

SSC CGL 2017 EXAM PAPER : Held on 17-AUG-2017
Shift-1
(Reasoning)

QID : 1 - Select the related word from the given alternatives.

Father : Parent :: Sister : ?

Options:

- 1) Other
- 2) Brother
- 3) Daughter
- 4) Sibling

Correct Answer: Sibling

QID : 2 - Select the related letters from the given alternatives.

WTQ : DGJ :: NKH : ?

Options:

- 1) MPS
- 2) LOR
- 3) NQT
- 4) ORV

Correct Answer: MPS

QID : 3 - Select the related number from the given alternatives.

60 : 15 :: 100 : ?

Options:

- 1) 45
- 2) 35
- 3) 5
- 4) 25

Correct Answer: 25

QID : 4 - Select the odd word from the given alternatives.

Options:

- 1) Chair
- 2) Sofa
- 3) Couch
- 4) Television

Correct Answer: Television

QID : 5 - Select the odd letters from the given alternatives.

Options:

- 1) XVT
- 2) NPR
- 3) LJH
- 4) FDB

Correct Answer: NPR

QID : 6 - Select the odd number from the given alternatives.

Options:

- 1) 1
- 2) -2
- 3) -(-3)
- 4) 5

Correct Answer: -2

QID : 7 - A series is given, with one word missing. Choose the correct alternative from the given ones that will complete the series.

bat, thin, reply, length, ?

Options:

- 1) terror
- 2) display
- 3) dome
- 4) scolding

Correct Answer: display

QID : 8 - A series is given, with one term missing. Choose the correct alternative from the given ones that will complete the series.

AbC, dEfG, hIjKl, MnOpQr, ?

Options:

- 1) StUvWxY
- 2) StUvWx
- 3) StUvWxYZ
- 4) sTuVwXy

Correct Answer: StUvWxY

QID : 9 - A series is given, with one number missing. Choose the correct alternative from the given ones that will complete the series.

1, 0.125, $\frac{1}{27}$, $\frac{1}{64}$, ? , $\frac{1}{216}$

Options:

- 1) 0.025
- 2) $\frac{1}{8}$
- 3) $\frac{1}{128}$
- 4) 0.008

Correct Answer: 0.008

QID : 10 - Hansh's birthday is on Monday 5th June. On what day of the week will be Tushar's Birthday in the same year if Tushar was born on 11th December?

Options:

- 1) Sunday
- 2) Wednesday
- 3) Monday
- 4) Tuesday

Correct Answer: Monday

QID : 11 - The weights of 4 boxes are 40, 30, 50 and 20 kilograms. Which of the following cannot be the total weight, in kilograms, of any combination of these boxes and in a combination a box can be used only once

Options:

- 1) 140
- 2) 130
- 3) 90
- 4) 100

Correct Answer: 130

QID : 12 - From the given words, select the word which cannot be formed using the letters of the given word.

TOKENISM

Options:

- 1) NAMES
- 2) EMITS
- 3) STONE
- 4) NOISE

Correct Answer: NAMES

QID : 13 - If SQUALOR is coded as USWCNQT, then how will WHY be coded as?

Options:

- 1) CZR
- 2) SGY
- 3) YJA
- 4) YPT

Correct Answer: YJA

QID : 14 - In a certain code language, '+' represents 'x', '-' represents '+', 'x' represents '÷' and '÷' represents '-'. What is the answer to the following question?

$$9 + 3 - 72 \times 6 \div 3 = ?$$

Options:

- 1) 46
- 2) 21
- 3) 9
- 4) 36

Correct Answer: 36

QID : 15 - If $19\#13=3$; $25\#3=11$; $36\#10=13$; then what is the value of $7\#3=?$

Options:

- 1) 21
- 2) 2
- 3) 26
- 4) 39

Correct Answer: 2

QID : 16 -

Select the missing number from the given responses

दिए गए विकल्पों में से लुप्त संख्या चुनिए।

10	4	2	12
7	?	3	15
8	5	1	3

Options:

- 1) 9
- 2) 1
- 3) 25
- 4) 2

Correct Answer: 2

QID : 17 - A and B start running from the same point. A runs 3 km West, then turns South and runs 5 km, then turns to her right and runs 7 km. B runs 1 km South then turns to her right and runs 10 km. Where is B with respect to A now?

Options:

- 1) 4 km South
- 2) 4 km North
- 3) 6 km North
- 4) 6 km South

Correct Answer: 4 km North

QID : 18 - In the question a statement is given, followed by two arguments, I and II. You have to consider the statement to be true even if it seems to be at variance from commonly known facts. You have to decide which of the given arguments, if any, is a strong argument.

Statement : Should speed breakers be banned?

Argument I : Yes, data shows that number of accidents increase after putting the speed breakers.

Argument II : No, it teaches fast drivers a lesson.

Options:

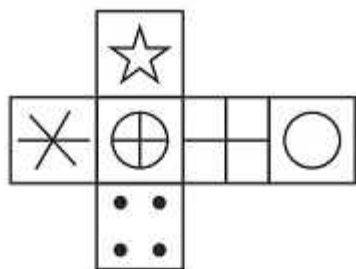
- 1) if only argument I is strong.
- 2) if only argument II is strong.
- 3) if both I and II are strong.
- 4) if neither I nor II is strong.

Correct Answer: if only argument I is strong.

QID : 19 -

Which of the following cube in the answer figure cannot be made based on the unfolded cube in the question figure?

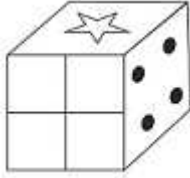
निम्नलिखित उत्तर आकृति में से कौन सा घन दिए गए प्रश्न आकृति में से खुले घन से बनाया नहीं जा सकता?



Options:

- 1)
- 2)
- 3)
- 4)

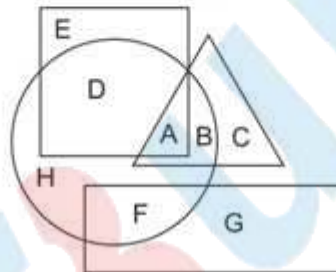
Correct Answer:



QID : 20 -

In the following figure, square represents Dancers, triangle represents Geologists, circle represents Architects and rectangle represents Mothers. Which set of letters represents architects who are also Geologists?

निम्नलिखित आकृति में, वर्ग नृतकियों को दर्शाता है, त्रिभुज भूवैज्ञानिकों को दर्शाता है, वृत्त वास्तुकारों को दर्शाता है और आयत माताओं को दर्शाता है। अक्षरों का कौन सा समूह वास्तुकारों को दर्शाता है जो भूवैज्ञानिक भी हैं?



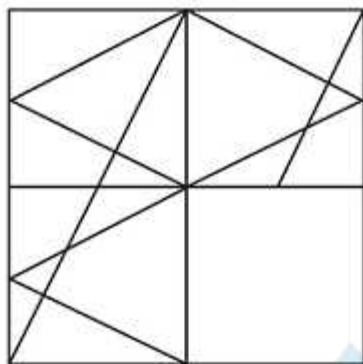
Options:

- 1) A,B
- 2) E,D
- 3) D,H,F
- 4) G,C

Correct Answer: A,B

Which answer figure will complete the pattern in the question figure?

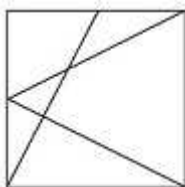
निम्नलिखित में से कौन-सी उत्तर आकृति प्रश्न आकृति के प्रतिरूप को पूरा करेगी?



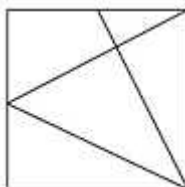
QID : 21 -

Options:

1)



2)

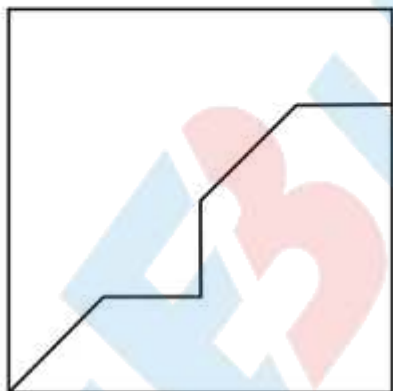


3)

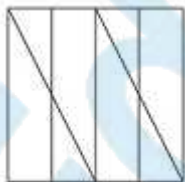


From the given answer figures, select the one in which the question figure is hidden/embedded.

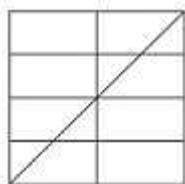
दी गई उत्तर आकृतियों में से उस आकृति को चुनिए जिसमें प्रश्न आकृति निहित है।



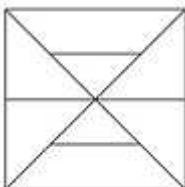
1)



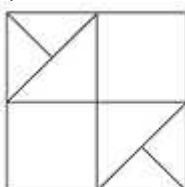
2)



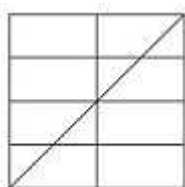
3)



4)



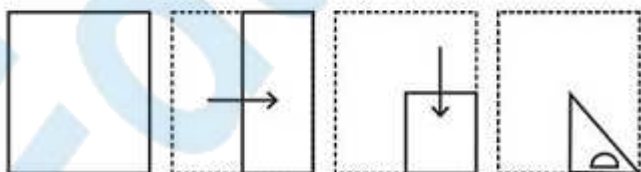
Correct Answer:



QID : 23 -

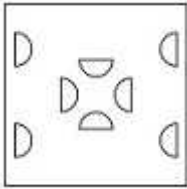
A piece of paper is folded and punched as shown below in the question figures. From the given answer figures, indicate how it will appear when opened.

प्रश्न आकृतियों में दिखाए अनुसार कागज को मोड़कर उसमें छेद करने तथा खोलने के बाद वह किस उत्तर आकृति जैसा दिखाई देगा?

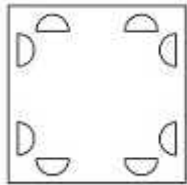


Options:

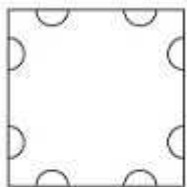
1)



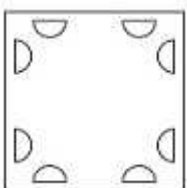
2)



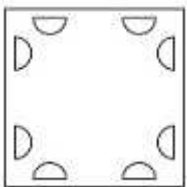
3)



4)



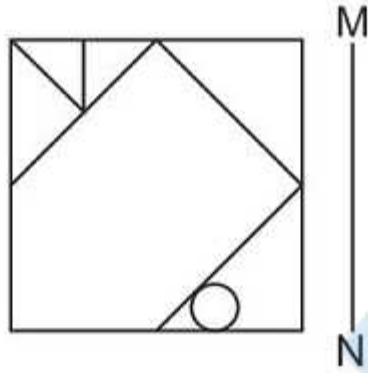
Correct Answer:



QID : 24 -

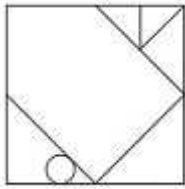
If a mirror is placed on the line MN, then which of the answer figures is the right image of the given figure?

यदि एक दर्पण को MN रेखा पर रखा जाए तो दी गई उत्तर आकृतियों में से कौन-सी आकृति प्रश्न आकृति का सही प्रतिबिम्ब होगी?

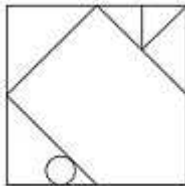


Options:

1)



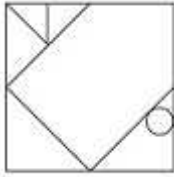
2)



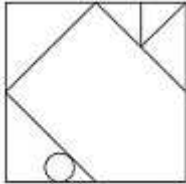
3)



4)



Correct Answer:



QID : 25 -

A word is represented by only one set of numbers as given in any one of the alternatives. The sets of numbers given in the alternatives are represented by two classes of alphabets as shown in the given two matrices. The columns and rows of Matrix-I are numbered from 0 to 4 and that of Matrix-II are numbered from 5 to 9. A letter from these matrices can be represented first by its row and next by its column, for example 'K' can be represented by 33, 43 etc and 'Z' can be represented by 65, 59 etc. Similarly, you have to identify the set for the word 'SIZE'.

एक शब्द केवल एक संख्या-समूह द्वारा दर्शाया गया है, जैसा कि विकल्पों में से किसी एक में दिया गया है। विकल्पों में दिए गए संख्या-समूह अक्षरों के दो वर्गों द्वारा दर्शाए गए हैं, जैसा कि दिए गए दो आव्यूहों में है। आव्यूह-I के स्तम्भ और पंक्ति की संख्या 0 से 4 और आव्यूह-II की 5 से 9 है। इन आव्यूहों से एक अक्षर को पहले उसकी पंक्ति और बाद में स्तम्भ संख्या द्वारा दर्शाया जा सकता है। उदाहरण के लिए 'K' को 33, 43 आदि द्वारा दर्शाया जा सकता है तथा 'Z' को 65, 59 आदि द्वारा दर्शाया जा सकता है। इसी तरह से आपको प्रश्न में दिए शब्द 'SIZE' के लिए समूह को पहचानना है।

Matrix I आव्यूह - I					
	0	1	2	3	4
0	E	M	E	J	H
1	I	H	F	G	A
2	E	H	D	A	I
3	C	B	M	K	L
4	F	L	G	K	D

Matrix II आव्यूह - II					
	5	6	7	8	9
5	U	V	U	V	Z
6	Z	O	X	S	P
7	P	P	R	V	N
8	Q	S	N	S	W
9	S	X	T	N	S

Options:

1) 34,32,98,77

2) 42,00,99,77

3) 03,44,67,77

4) 95,24,59,20

Correct Answer: 95,24,59,20

EduBull.Com

SSC CGL 2017 EXAM PAPER : Held on 17-AUG-2017
Shift-1
(General Awareness)

QID : 26 - In a centrally planned economy, the _____ plans all the important activities in the economy.

Options:

- 1) Industrialists
- 2) Citizens
- 3) Government
- 4) Judiciary

Correct Answer: Government

QID : 27 - _____ says that if we keep increasing the employment of an input, with other inputs fixed, eventually a point will be reached after which the resulting addition to output (i.e., marginal product of that input) will start falling.

Options:

- 1) Law of diminishing marginal product
- 2) Law of variable proportions
- 3) The Short Run
- 4) The Long Run

Correct Answer: Law of diminishing marginal product

QID : 28 - _____ means that the Supreme Court will reconsider the case and the legal issues involved in it.

Options:

- 1) Original Jurisdiction
- 2) Writ Jurisdiction
- 3) Appellate Jurisdiction
- 4) Advisory Jurisdiction

Correct Answer: Appellate Jurisdiction

QID : 29 - Which amendment of the Constitution of India increased the age of retirement of High Court judges from 60 to 62 years?

Options:

- 1) 10th
- 2) 12th
- 3) 15th
- 4) 245th

Correct Answer: 15th

QID : 30 - During their rule the British persuaded or forced cultivators in Madras to grow _____.

Options:

- 1) Jute
- 2) Tea
- 3) Sugarcane
- 4) Rice

Correct Answer: Rice

QID : 31 - The queen with the title Didda ruled over which part of India between 980 - 1003?

Options:

- 1) Avadh
- 2) Kashmir
- 3) Sindh
- 4) Bengal

Correct Answer: Kashmir

QID : 32 - In the north-west, India shares its land boundaries with which country?

Options:

- 1) Sri Lanka
- 2) Myanmar

3) Bangladesh

4) Pakistan

Correct Answer: Pakistan

QID : 33 - The part of the Himalayas lying between Satluj and Kali rivers is known as

_____.

Options:

1) Punjab Himalaya

2) Nepal Himalayas

3) Kumaon Himalayas

4) Assam Himalayas

Correct Answer: Kumaon Himalayas

QID : 34 - Potato, tomato and brinjal are three different species but all belong to which genus?

Options:

1) Solanum

2) Panthera

3) Felis

4) Tigris

Correct Answer: Solanum

QID : 35 - The first formed primary xylem elements are called _____.

Options:

1) Metaxylem

2) Protoxylem

3) Xylem fibres

4) Xylem parenchyma

Correct Answer: Protoxylem

QID : 36 - Nereis, Pheretima (Earthworm) and Hirudinaria (blood sucking leech) are examples of which Phylum?

Options:

1) Coelenterata

2) Aschelminthes

3) Annelida

4) Arthropoda

Correct Answer: Annelida

QID : 37 - In humans, the sound is produced by the _____.

Options:

- 1) oesophagus
- 2) larynx
- 3) medulla
- 4) epiglottis

Correct Answer: larynx

QID : 38 - The vocal cords in men are about _____ long.

Options:

- 1) 10mm
- 2) 20mm
- 3) 30mm
- 4) 40mm

Correct Answer: 20mm

QID : 39 - The _____ uses an addressing scheme known as URL to indicate the location of files on the web.

Options:

- 1) JavaScript
- 2) World Wide Web
- 3) SQL
- 4) String

Correct Answer: World Wide Web

QID : 40 - Most liquids that conduct electricity are solutions of acids, bases and _____.

Options:

- 1) Copper
- 2) Aluminium
- 3) Salts
- 4) Iron

Correct Answer: Salts

QID : 41 - Which base is present in milk of magnesia?

Options:

- 1) Magnesium hydroxide
- 2) Ammonium hydroxide
- 3) Sodium hydroxide
- 4) Calcium hydroxide

Correct Answer: Magnesium hydroxide

QID : 42 - _____ is the process of restoring a forest that once existed but was removed at some point of time in the past.

Options:

- 1) Deforestation
- 2) Reforestation
- 3) Greenhouse
- 4) Jhum cultivation

Correct Answer: Reforestation

QID : 43 - _____ scheme launched by the Central Government to eliminate open defecation by constructing toilets for households, communities.

Options:

- 1) Swachh Bharat Abhiyan
- 2) Gram Uday Se Bharat Uday Abhiyan
- 3) Stand up India scheme
- 4) National RU URBAN Mission

Correct Answer: Swachh Bharat Abhiyan

QID : 44 - Who discovered Sodium?

Options:

- 1) Humphry Davy
- 2) William Henry Fox
- 3) J.J.Thomson
- 4) Karl Benz

Correct Answer: Humphry Davy

QID : 45 - Who was the 2016 Men's Kabaddi World Cup Runner-Up?

Options:

- 1) Thailand
- 2) Iran
- 3) Argentina
- 4) Pakistan

Correct Answer: Iran

QID : 46 - Jama Masjid of Delhi was built in which century?

Options:

- 1) 15th
- 2) 16th
- 3) 17th
- 4) 18th

Correct Answer: 17th

QID : 47 - Which of the following won The Man Booker Prize 2016?

Options:

- 1) The Sellout
- 2) A Brief History of Seven Killings
- 3) The Narrow Road to the Deep North
- 4) The Luminaries

Correct Answer: The Sellout

QID : 48 - Which of the statements given below are correct?

1. The author of the novel 'Gilead' is Don Winslow.
2. The author of the novel 'Wolf Hall' is Stephen Dobyns.
3. The author of the novel 'To Kill a Mockingbird' is Harper Lee.

Options:

- 1) 1 and 2
- 2) 2 and 3
- 3) 1 and 3
- 4) 1, 2 and 3

Correct Answer: 1 and 2

QID : 49 - What was United Kingdom's rank in 2016 Human Development Index published by the United Nations Development Programme?

Options:

- 1) 4
- 2) 16
- 3) 64
- 4) 256

Correct Answer: 16

QID : 50 - Which railway station is used for immigration and customs of passengers who travel on the Thar Express between Pakistan and India?

Options:

- 1) Jalal Marri
- 2) Zero Point
- 3) Lal Pir
- 4) Gujar Garhi

Correct Answer: Zero Point

SSC CGL 2017 EXAM PAPER : Held on 17-AUG-2017 Shift-1
(Mathematics)

QID : 51 - Select the correct option:

Convert binary 1101111 to decimal.

Options:

- 1) 111
- 2) 101
- 3) 110
- 4) 100

Correct Answer: 111

QID : 52 - A can finish a work in 18 days and B in 36 days. If they work on it together for 9 days, then what percent of work is left?

Options:

- 1) 33.3
- 2) 20
- 3) 75
- 4) 25

Correct Answer: 25

QID : 53 - The diagonal of a square is 12 cm what is the length (in cm) of its side?

Options:

- 1) $6\sqrt{2}$
- 2) $12\sqrt{2}$
- 3) 6
- 4) 9

Correct Answer: $6\sqrt{2}$

QID : 54 - If on a Sale there is 30% discount on the marked price of Rs 2500, but the sale is done at Rs 1400 only. What additional discount (in %) did the customer get?

Options:

- 1) 10
- 2) 20
- 3) 15
- 4) 25

Correct Answer: 20

QID : 55 - What is the third proportional to 10 and 25?

Options:

- 1) 125
- 2) 150
- 3) 62.5
- 4) 225

Correct Answer: 62.5

QID : 56 - In a class of 50 students there are 27 boys. The average weight of these boys is 72 Kg and average weight of the full class is 55.44 kgs. What is the average weight (in kgs) of the girls of the class?

Options:

- 1) 42
- 2) 48
- 3) 30
- 4) 36

Correct Answer: 36

QID : 57 - If a saree is sold for Rs 1900 the seller will face 5% loss, at what price (in Rs) should he sell the saree to gain 15% profit?

Options:

- 1) 2200
- 2) 2400
- 3) 2500
- 4) 2300

Correct Answer: 2300

QID : 58 - Pranita got 30 marks more in Math than what she got in Science. Her Math marks are 60% of the sum of her Math and Science marks. What are her Science marks?

Options:

- 1) 90
- 2) 150
- 3) 120
- 4) 60

Correct Answer: 60

QID : 59 - To travel 432 km, an Express train takes 1 hour more than Duroto. If however, the speed of the Express train is increased by 50%, it takes 2 hours less than Duroto. What is the speed (in km/hr) of Duroto train?

Options:

- 1) 60
- 2) 54
- 3) 48
- 4) 72

Correct Answer: 54

QID : 60 - What is the difference (in Rs) between the compound interests on Rs. 4000 for 1 year at 12% per annum compounded yearly and half-yearly?

Options:

- 1) 14.4
- 2) 12.4
- 3) 10.4
- 4) 16.4

Correct Answer: 14.4

QID : 61 - If $7x - \frac{3(2x - 3)}{2} = \frac{1}{2}$, then what is the value of x?

Options:

- 1) -1
- 2) 1
- 3) 3
- 4) -3

Correct Answer: -1

QID : 62 - If $a + b = 4$ and $ab = 3$, then what is the value of $a^3 + b^3$?

Options:

- 1) 21
- 2) 17
- 3) 28
- 4) 31

Correct Answer: 28

QID : 63 - The sum of a fraction and 7 times its reciprocal is $11/2$. What is the fraction?

Options:

- 1) $7/2$
- 2) $2/7$
- 3) $3/4$
- 4) $4/3$

Correct Answer: $7/2$

QID : 64 - The 3rd and 9th term of an arithmetic progression are -8 and 10 respectively. What is the 16th term?

Options:

- 1) 34
- 2) 28
- 3) 25
- 4) 31

Correct Answer: 31

QID : 65 - What is the reflection of the point (1 , 2) in the line $y = 3$?

Options:

- 1) (1, -4)
- 2) (1, 4)
- 3) (-1, -4)
- 4) (-1, 4)

Correct Answer: (1, 4)

QID : 66 - Point A (2, 1) divides segment BC in the ratio 2:3. Co-ordinates of B are (1, -3) and C are (4, y). What is the value of y?

Options:

- 1) 8
- 2) -7
- 3) -8
- 4) 7

Correct Answer: 7

QID : 67 - At what point does the line $2x + 5y = -6$ cuts the X-axis?

Options:

- 1) (3, 0)
- 2) (0, 3)
- 3) (-3, 0)
- 4) (0, -3)

Correct Answer: (-3, 0)

QID : 68 - ABC is right angled at B. BD is an altitude. AD = 9 cm and DC = 16 cm. What is the value of BD (in cm)?

Options:

- 1) 6
- 2) 18
- 3) 21
- 4) 12

Correct Answer: 12

QID : 69 - What is the value of $\tan 45^\circ + \frac{4}{\sqrt{3}} \sec 60^\circ$?

Options:

- 1) $(\sqrt{3} + 8)/\sqrt{3}$
- 2) $(\sqrt{3} + 8)/3$
- 3) $(\sqrt{3} - 8)/\sqrt{3}$
- 4) $(\sqrt{3} - 8)/3$

Correct Answer: $(\sqrt{3} + 8)/\sqrt{3}$

QID : 70 - DEF is right angled at E. If $m \angle D = 30^\circ$. What is the length (in cm) of DE, if $EF = 2\sqrt{3}$ cm?

Options:

- 1) 3
- 2) 4
- 3) 6
- 4) 2

Correct Answer: 6

QID : 71 - If $\sin \theta = 20/29$, then what is the value of $\cos \theta$?

Options:

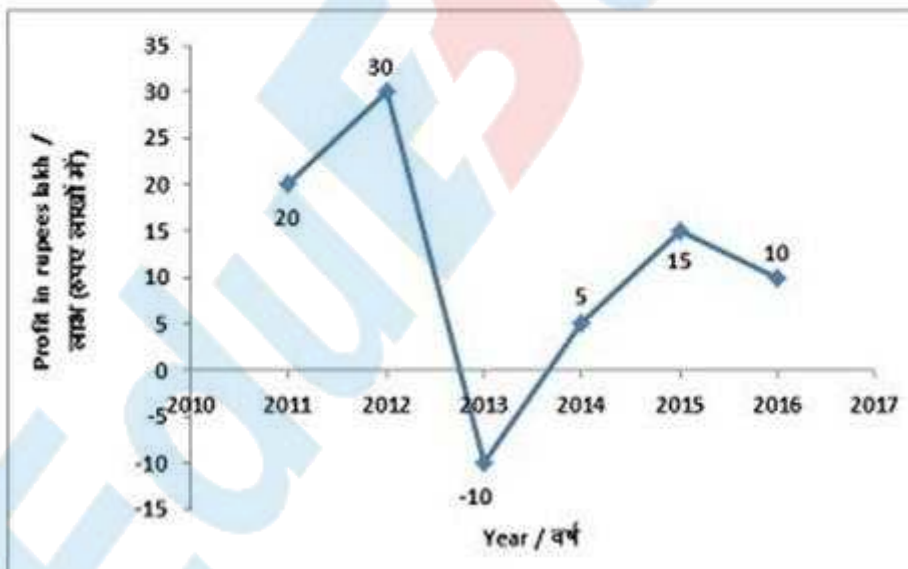
- 1) 29/21
- 2) 21/29
- 3) 21/20
- 4) 20/29

Correct Answer: 21/29

QID : 72 -

The line graph shows annual profits in rupees lakhs of a certain company from 2011 to 2016. Study the diagram and answer the following questions.

लाइन ग्राफ वर्ष 2011 से लेकर 2016 तक एक निश्चित कंपनी का वार्षिक लाभ (रुपए लाखों में) दर्शाता है। इस आरेख का अध्ययन करें और निम्नलिखित प्रश्नों का उत्तर दें।



The company reported a loss in which year?

Options:

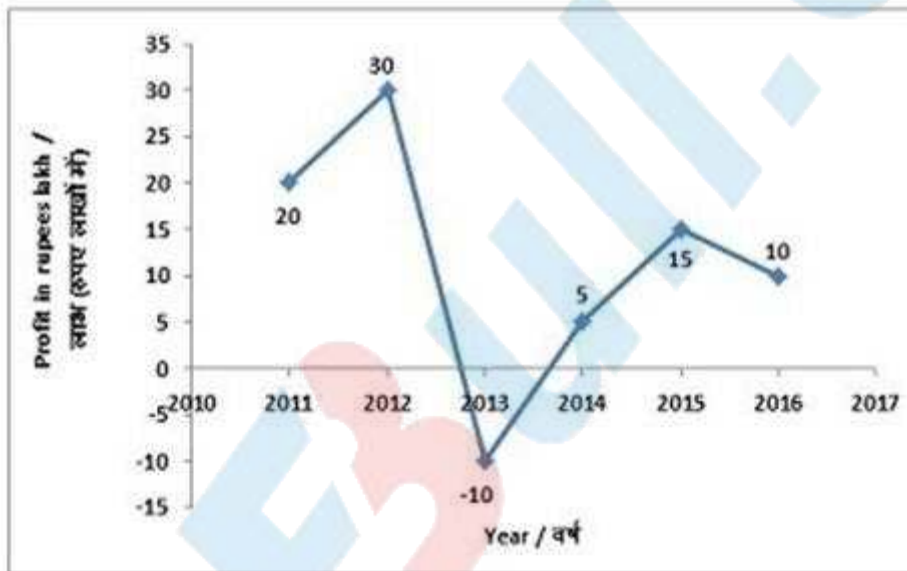
- 1) 2013
- 2) 2016
- 3) 2012
- 4) 2014

Correct Answer: 2013

QID : 73 -

The line graph shows annual profits in rupees lakhs of a certain company from 2011 to 2016. Study the diagram and answer the following questions.

लाइन ग्राफ वर्ष 2011 से लेकर 2016 तक एक निश्चित कंपनी का वार्षिक लाभ (रुपए लाखों में) दर्शाता है। इस आरेख का अध्ययन करें और निम्नलिखित प्रश्नों का उत्तर दें।



What is the cumulative profits (in lakh Rs) earned by the company in the given six years?

Options:

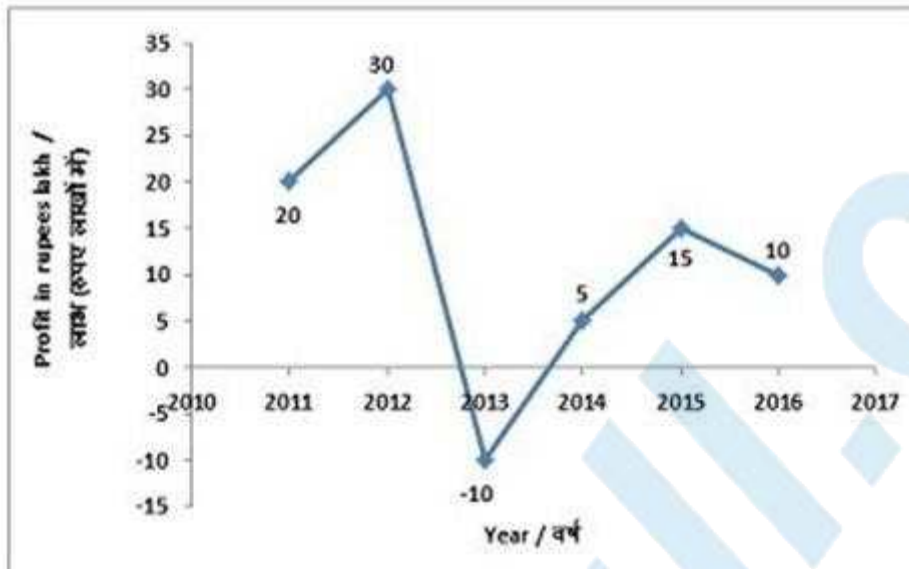
- 1) 80
- 2) 70
- 3) 90
- 4) 100

Correct Answer: 70

QID : 74 -

The line graph shows annual profits in rupees lakhs of a certain company from 2011 to 2016. Study the diagram and answer the following questions.

लाइन ग्राफ वर्ष 2011 से लेकर 2016 तक एक निश्चित कंपनी का वार्षिक लाभ (रुपए लाखों में) दर्शाता है। इस आरेख का अध्ययन करें और निम्नलिखित प्रश्नों का उत्तर दें।



By what value profit in 2012 was more (in %) than the profit of 2011?

Options:

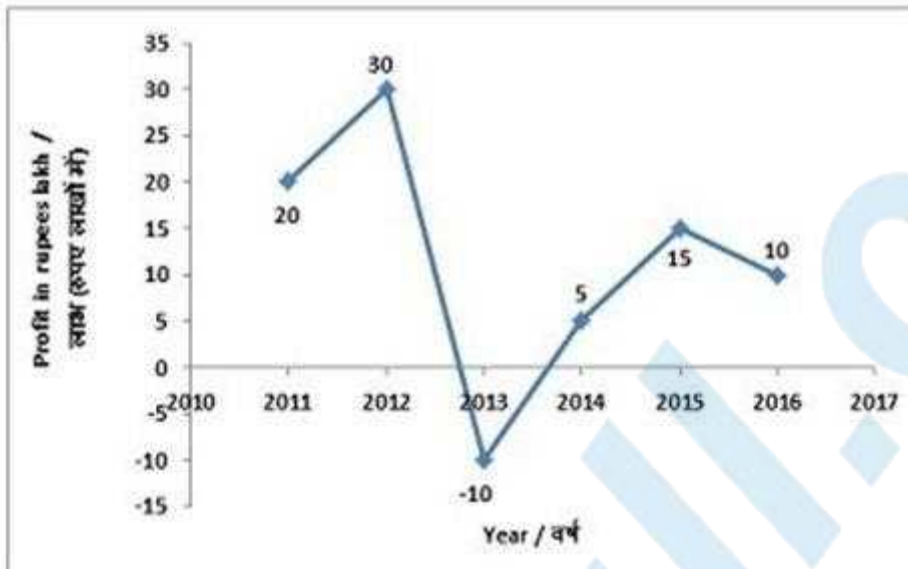
- 1) 10
- 2) 33.33
- 3) 50
- 4) 40

Correct Answer: 50

QID : 75 -

The line graph shows annual profits in rupees lakhs of a certain company from 2011 to 2016. Study the diagram and answer the following questions.

लाइन ग्राफ वर्ष 2011 से लेकर 2016 तक एक निश्चित कंपनी का वार्षिक लाभ (रुपए लाखों में) दर्शाता है। इस आरेख का अध्ययन करें और निम्नलिखित प्रश्नों का उत्तर दें।



If the profits are added to the company's reserves and the reserves stood at Rs 150 lakhs at the end of 2015, what were the reserves (in Rs. lakhs) in the beginning of 2012?

Options:

- 1) 130
- 2) 90
- 3) 110
- 4) 40

Correct Answer: 110

SSC CGL 2017 EXAM PAPER : Held on 17-AUG-2017
Shift-1
(English Comprehension)

QID : 76 - In the following question, some part of the sentence may have errors. Find out which part of the sentence has an error and select the appropriate option. If a sentence is free from error, select 'No Error'.

The view of the downstream (1)/ and directly down the (2)/ bridge was awesome. (3)/No Error (4)

Options:

- 1) 1
- 2) 2
- 3) 3
- 4) 4

Correct Answer: 2

QID : 77 - In the following question, some part of the sentence may have errors. Find out which part of the sentence has an error and select the appropriate option. If a sentence is free from error, select 'No Error'.

His name was hardly (1)/ known out (2)/ his own country. (3)/No Error (4)

Options:

- 1) 1
- 2) 2

3) 3

4) 4

Correct Answer: 2

QID : 78 - In the following question, the sentence given with blank to be filled in with an appropriate word. Select the correct alternative out of the four and indicate it by selecting the appropriate option.

The fun _____ reduced significantly when mom decided to tag along.

Options:

1) mark

2) sign

3) quotient

4) moment

Correct Answer: quotient

QID : 79 - In the following question, the sentence given with blank to be filled in with an appropriate word. Select the correct alternative out of the four and indicate it by selecting the appropriate option.

The shepherd guarded a large _____ of sheep and allowed them to move from pasture to pasture.

Options:

1) block

2) culture

3) shoal

4) flock

Correct Answer: flock

QID : 80 - In the following question, out of the four alternatives, select the word similar in meaning to the word given.

Facsimile

Options:

1) Disparate

2) Replica

3) Peculiar

4) Contrast

Correct Answer: Replica

QID : 81 - In the following question, out of the four alternatives, select the word similar in meaning to the word given.

Chauvinism

Options:

- 1) Neutral
- 2) Aloof
- 3) Zealotry
- 4) Evenhanded

Correct Answer: Zealotry

QID : 82 - In the following question, out of the four alternatives, select the word opposite in meaning to the word given.

Melody

Options:

- 1) Chant
- 2) Lyric
- 3) Cacophony
- 4) Inflection

Correct Answer: Cacophony

QID : 83 - In the following question, out of the four alternatives, select the word opposite in meaning to the word given.

Diffident

Options:

- 1) Bashful
- 2) Demure
- 3) Aggressive
- 4) Meek

Correct Answer: Aggressive

QID : 84 - In the following question, out of the four alternatives, select the alternative which best expresses the meaning of the idiom/phrase.

To have a finger in every pie

Options:

- 1) To Fight with everybody
- 2) To be involved in a large and varied number of activities or enterprises
- 3) To make fun of everybody
- 4) To leave every job unfinished

Correct Answer: To be involved in a large and varied number of activities or enterprises

QID : 85 - In the following question, out of the four alternatives, select the alternative which best expresses the meaning of the idiom/phrase.

To make up one's mind

Options:

- 1) To be prepared for unfavourable outcomes
- 2) To make a decision; decide
- 3) To overcome intense grief
- 4) To psyche oneself into believing that the task at hand is not impossible

Correct Answer: To make a decision; decide

QID : 86 - In the following question, out of the four alternatives, select the alternative which will improve the bracketed part of the sentence. In case no improvement is needed, select "no improvement".

We might (have doing) something to help you.

Options:

- 1) having to do
- 2) has done
- 3) have done
- 4) no improvement

Correct Answer: have done

QID : 87 - In the following question, out of the four alternatives, select the alternative which will improve the bracketed part of the sentence. In case no improvement is needed, select "no improvement".

He (to be) positively rude.

Options:

- 1) was being
- 2) were being
- 3) being
- 4) no improvement

Correct Answer: was being

QID : 88 - In the following question, out of the four alternatives, select the alternative which is the best substitute of the words/sentence.

Distorted representation of something

Options:

- 1) Travesty
- 2) Solemnity
- 3) Seriousness
- 4) Gravity

Correct Answer: Travesty

QID : 89 - In the following question, out of the four alternatives, select the alternative which is the best substitute of the words/sentence.

A feeling of intense longing for something

Options:

- 1) Yearning
- 2) Apathy
- 3) Satiety
- 4) Gratification

Correct Answer: Yearning

QID : 90 - In the following question, four words are given out of which one word is correctly spelt. Select the correctly spelt word.

Options:

- 1) Perverted
- 2) Pervirted
- 3) Parverted
- 4) Parvirted

Correct Answer: Perverted

QID : 91 - In the following question, four words are given out of which one word is correctly spelt. Select the correctly spelt word.

Options:

- 1) Blandnes
- 2) Blandenness
- 3) Blandenes
- 4) Blandness

Correct Answer: Blandness

QID : 92 - The question below consists of a set of labelled sentences. Out of the four options given, select the most logical order of the sentences to form a coherent paragraph.

The burning sun

X-our very

Y-seemed to be sucking

Z-blood out of us

Options:

- 1) XZY
- 2) XYZ
- 3) ZYX
- 4) YXZ

Correct Answer: YXZ

QID : 93 - The question below consists of a set of labelled sentences. Out of the four options given, select the most logical order of the sentences to form a coherent paragraph.

I hear the sound

X-his tool raised

Y-of the blow while I see

Z-above his head

Options:

- 1) XZY
- 2) XYZ
- 3) YXZ
- 4) ZYX

Correct Answer: YXZ

QID : 94 - In the following question, a sentence has been given in Active/Passive voice. Out of the four alternatives suggested, select the one which best expresses the same sentence in Passive/Active voice.

The tutor always answers the students' questions.

Options:

- 1) The students' questions is always answered by the tutor.
- 2) Questions answered by the tutor are by the students.
- 3) The students' questions are always answered by the tutor.
- 4) Questions answered by the tutor is by the students.

Correct Answer: The students' questions are always answered by the tutor.

QID : 95 - In the following question, a sentence has been given in Direct/Indirect speech. Out of the four alternatives suggested, select the one which best expresses the same sentence in Indirect/Direct speech.

Mother said, "Will you tell me what it means, Pritam?"

Options:

- 1) Mother asked Pritam if he will tell her what it meant.
- 2) Mother asked Pritam that he would tell her what it meant.
- 3) Mother asked Pritam if he would tell her what it meant.
- 4) Mother asked Pritam that he will tell her what it meant.

Correct Answer: Mother asked Pritam if he would tell her what it meant.

QID : 96 - A passage is given with 5 questions following it. Read the passage carefully and choose the best answer to each question out of the four alternatives.

Prebiotics are the lesser-known gut-health promoters which serve as food for good bacteria inside the gut. "We found that dietary prebiotics can improve non-REM (random eye movement) sleep, as well as REM sleep after a stressful event," said Robert Thompson, a PhD researcher at University of Colorado Boulder in the U.S. Prebiotics are dietary fibres found naturally in foods like artichokes, raw garlic, leeks and onions.

When beneficial bacteria digest prebiotic fibre, they not only multiply, improving overall gut health, but they also release metabolic by-products. Researchers fed three-week-old male rats a diet of either standard chow or chow that included prebiotics. They then monitored the rats' body temperature, gut bacteria and sleep-wake cycles — using electroencephalogram (EEG), or brain activity testing over time. Findings revealed that the rats on the prebiotic diet spent more time in non-rapid-eye-movement (NREM) sleep, which is restful and restorative, than those on the non-prebiotic diet.

What are prebiotics?

Options:

- 1) Dietary fibres
- 2) Bacteria
- 3) Foods like artichokes
- 4) Gut microbiota

Correct Answer: Dietary fibres

QID : 97 - A passage is given with 5 questions following it. Read the passage carefully and choose the best answer to each question out of the four alternatives.

Prebiotics are the lesser-known gut-health promoters which serve as food for good bacteria inside the gut. "We found that dietary prebiotics can improve non-REM (random eye movement) sleep, as well as REM sleep after a stressful event," said Robert Thompson, a PhD researcher at University of Colorado Boulder in the U.S. Prebiotics are dietary fibres found naturally in foods like artichokes, raw garlic, leeks and onions.

When beneficial bacteria digest prebiotic fibre, they not only multiply, improving overall gut health, but they also release metabolic by-products. Researchers fed three-week-old male rats a diet of either standard chow or chow that included prebiotics. They then monitored the rats' body temperature, gut bacteria and sleep-wake cycles — using electroencephalogram (EEG), or brain activity testing over time. Findings revealed that the rats on the prebiotic diet spent more time in non-rapid-eye-movement (NREM) sleep, which is restful and restorative, than those on the non-prebiotic diet.

What type of sleep is restorative?

Options:

- 1) NREM
- 2) REM
- 3) EEG
- 4) ECG

Correct Answer: NREM

QID : 98 - A passage is given with 5 questions following it. Read the passage carefully and choose the best answer to each question out of the four alternatives.

Prebiotics are the lesser-known gut-health promoters which serve as food for good bacteria inside the gut. "We found that dietary prebiotics can improve non-REM (random eye movement) sleep, as well as REM sleep after a stressful event," said Robert Thompson, a PhD researcher at University of Colorado Boulder in the U.S. Prebiotics are dietary fibres found naturally in foods like artichokes, raw garlic, leeks and onions.

When beneficial bacteria digest prebiotic fibre, they not only multiply, improving overall gut health, but they also release metabolic by-products. Researchers fed three-week-old male rats a diet of either standard chow or chow that included prebiotics. They then monitored the rats' body temperature, gut bacteria and sleep-wake cycles — using electroencephalogram (EEG), or brain activity testing over time. Findings revealed that the rats on the prebiotic diet spent more time in non-rapid-eye-movement (NREM) sleep, which is restful and restorative, than those on the non-prebiotic diet.

How are metabolic by-products released?

Options:

- 1) When good bacteria help sleep
- 2) When good bacteria digest dietary fibres
- 3) When gut becomes rich in nutrients
- 4) After recovery from stress due to sleep

Correct Answer: When good bacteria digest dietary fibres

QID : 99 - A passage is given with 5 questions following it. Read the passage carefully and choose the best answer to each question out of the four alternatives.

Prebiotics are the lesser-known gut-health promoters which serve as food for good bacteria inside the gut. "We found that dietary prebiotics can improve non-REM (random eye movement) sleep, as well as REM sleep after a stressful event," said Robert Thompson, a PhD researcher at University of Colorado Boulder in the U.S. Prebiotics are dietary fibres found naturally in foods like artichokes, raw garlic, leeks and onions.

When beneficial bacteria digest prebiotic fibre, they not only multiply, improving overall gut health, but they also release metabolic by-products. Researchers fed three-week-old male rats a diet of either standard chow or chow that included prebiotics. They then monitored the rats' body temperature, gut bacteria and sleep-wake cycles — using electroencephalogram (EEG), or brain activity testing over time. Findings revealed that the rats on the prebiotic diet spent more time in non-rapid-eye-movement (NREM) sleep, which is restful and restorative, than those on the non-prebiotic diet.

How can sleep wake cycles be monitored?

Options:

- 1) By testing brain power
- 2) By allowing REM and NREM sleep
- 3) By using EEG
- 4) By recording body temperature

Correct Answer: By using EEG

QID : 100 - A passage is given with 5 questions following it. Read the passage carefully and choose the best answer to each question out of the four alternatives.

Prebiotics are the lesser-known gut-health promoters which serve as food for good bacteria inside the gut. "We found that dietary prebiotics can improve non-REM (random eye movement) sleep, as well as REM sleep after a stressful event," said Robert Thompson, a PhD researcher at University of Colorado Boulder in the U.S. Prebiotics are dietary fibres found naturally in foods like artichokes, raw garlic, leeks and onions.

When beneficial bacteria digest prebiotic fibre, they not only multiply, improving overall gut health, but they also release metabolic by-products. Researchers fed three-week-old male rats a diet of either standard chow or chow that included prebiotics. They then monitored the rats' body temperature, gut bacteria and sleep-wake cycles — using electroencephalogram (EEG), or brain activity testing over time. Findings revealed that the rats on the prebiotic diet spent more time in non-rapid-eye-movement (NREM) sleep, which is restful and restorative, than those on the non-prebiotic diet.

What is chow?

Options:

- 1) Type of dietary fibre
- 2) A class of nutrients
- 3) Rat food
- 4) Sleep enhancer

Correct Answer: Rat food

SSC CGL 2017 EXAM PAPER : Held on 17-AUG-2017
Shift-2
(Reasoning)

QID : 101 - Select the related word from the given alternatives.

Office : Colleagues :: Home : ?

Options:

- 1) Rest
- 2) Work
- 3) Friends
- 4) Family

Correct Answer: Family

QID : 102 - Select the related letters from the given alternatives.

XVT : RPN :: LJH : ?

Options:

- 1) FDB
- 2) ECA
- 3) KIG
- 4) QOM

Correct Answer: FDB

QID : 103 - Select the related number from the given alternatives.

0.04 : 0.2 :: 0.09 : ?

Options:

- 1) 0.3
- 2) 0.6
- 3) 0.9
- 4) 2

Correct Answer: 0.3

QID : 104 - Select the odd word from the given alternatives.

Options:

- 1) Chair
- 2) Bench
- 3) Bed
- 4) Sofa

Correct Answer: Bed

QID : 105 - Select the odd letters from the given alternatives.

Options:

- 1) CEG
- 2) UXZ
- 3) ORT
- 4) ILN

Correct Answer: CEG

QID : 106 - Select the odd number from the given alternatives.

Options:

- 1) 75
- 2) 65
- 3) 82
- 4) 85

Correct Answer: 82

QID : 107 - A series is given, with one word missing. Choose the correct alternative from the given ones that will complete the series.

isobar, artist, statute, teapot, otters, ?

Options:

- 1) pencil
- 2) erect
- 3) tongue
- 4) meter

Correct Answer: erect

QID : 108 - A series is given, with one term missing. Choose the correct alternative from the given ones that will complete the series.

XX, XOX, XXXX, XXOXX, XXXXXX, ?

Options:

- 1) XXXOXXXX
- 2) XXXOXXX
- 3) XXXXXXX
- 4) XXXOXXXO

Correct Answer: XXXOXXX

QID : 109 - A series is given, with one number missing. Choose the correct alternative from the given ones that will complete the series.

3, $5/3$, $1/3$, ? , $-7/3$, $-11/3$

Options:

- 1) $-2/3$
- 2) $-4/3$
- 3) -1
- 4) -2

Correct Answer: -1

QID : 110 - Divit's birthday is on Friday 30th June. On what day of the week will be Samar's Birthday in the same year if Samar was born on 15th November?

Options:

- 1) Tuesday
- 2) Friday
- 3) Wednesday
- 4) Saturday

Correct Answer: Wednesday

QID : 111 - The weights of 4 boxes are 100, 70, 50 and 90 kilograms. Which of the following cannot be the total weight, in kilograms, of any combination of these boxes and in a combination a box can be used only once?

Options:

- 1) 310
- 2) 260
- 3) 230
- 4) 210

Correct Answer: 230

QID : 112 - From the given words, select the word which cannot be formed using the letters of the given word.

RECLINES

Options:

- 1) SINCE
- 2) RELIC
- 3) LINER
- 4) SCARE

Correct Answer: SCARE

QID : 113 - If REGAINS is coded as QDFZHMR, then how will PRY be coded as?

Options:

- 1) BJX
- 2) OQX
- 3) LFT
- 4) PSU

Correct Answer: OQX

QID : 114 - In a certain code language, '+' represents 'x', '-' represents '+', 'x' represents '÷' and '÷' represents '-'. What is the answer to the following question?

$$45 \times 5 + 2 - 20 = ?$$

Options:

- 1) 17
- 2) 81
- 3) 38
- 4) 64

Correct Answer: 38

QID : 115 - If $5@1=60$; $12@8=200$; $16@2=180$; then what is the value of $16@10=?$

Options:

- 1) 32
- 2) 11
- 3) 9
- 4) 260

Correct Answer: 260

QID : 116 -

Select the missing number from the given responses

दिए गए विकल्पों में से लुप्त संख्या चुनिए।

104	?	57
87	78	9
103	78	25

Options:

- 1) 35
- 2) 47
- 3) 54
- 4) 78

Correct Answer: 47

QID : 117 - Two women A and B are shopping in a mall. They start from the same point. A walks 150 m West, then turns to her left and walks 160 m. B walks 140 m East, then turns South and walks 160 m, then turns to her left and walks 120 m.

Where is B with respect to A now?

Options:

- 1) 410 m West
- 2) 410 m East
- 3) 170 m East
- 4) 170 m West

Correct Answer: 410 m East

QID : 118 - In the question a statement is given, followed by two arguments, I and II. You have to consider the statement to be true even if it seems to be at variance from commonly known facts. You have to decide which of the given arguments, if any, is a strong argument.

Statement : Should eating paan at public places be made punishable?

Argument I : Yes, people eat pan and spit and makes public places dirty.

Argument II : No, Indians love paan.

Options:

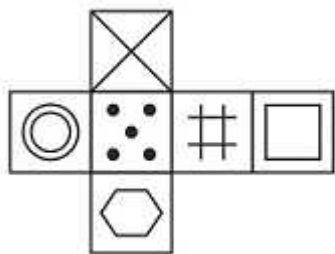
- 1) if only argument I is strong.
- 2) if only argument II is strong.
- 3) if both I and II are strong.
- 4) if neither I nor II is strong.

Correct Answer: if only argument I is strong.

QID : 119 -

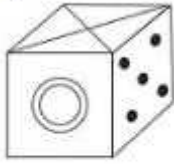
Which of the following cube in the answer figure cannot be made based on the unfolded cube in the question figure?

निम्नलिखित उत्तर आकृति में से कौन सा घन दिए गए प्रश्न आकृति में से खुले घन से बनाया नहीं जा सकता?

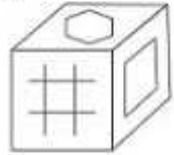


Options:

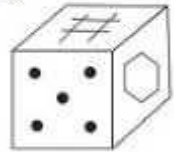
1)



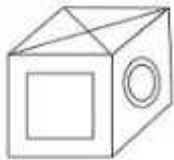
2)



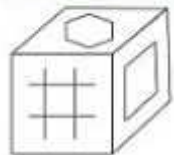
3)



4)



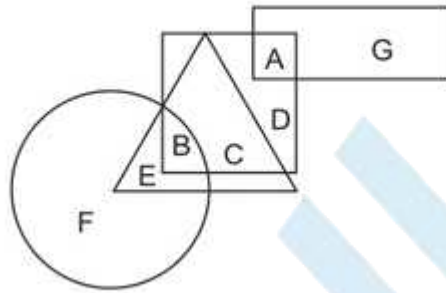
Correct Answer:



QID : 120 -

In the following figure, square represents Optometrists, triangle represents Painters, circle represents Vegetarians and rectangle represents Men. Which set of letters represents painters who are either men or vegetarians?

निम्नलिखित आकृति में, वर्ग दृष्टिमितिज्ञों को दर्शाता है, त्रिभुज चित्रकारों को दर्शाता है, वृत्त शाकाहारीयों को दर्शाता है और आयत पुरुषों को दर्शाता है। अक्षरों का कौन सा समूह चित्रकारों को दर्शाता है जो या तो पुरुष हैं या शाकाहारी हैं?



Options:

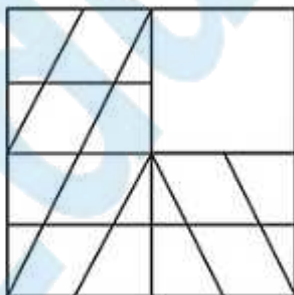
- 1) D,F
- 2) E,B
- 3) H,G,F
- 4) A,C,E

Correct Answer: E,B

QID : 121 -

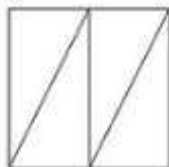
Which answer figure will complete the pattern in the question figure?

निम्नलिखित में से कौन-सी उत्तर आकृति प्रश्न आकृति के प्रतिरूप को पूरा करेगी?

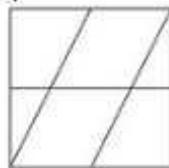


Options:

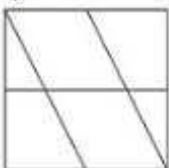
1)



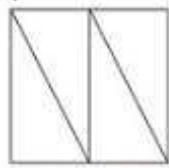
2)



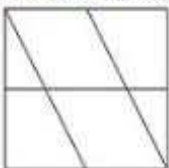
3)



4)



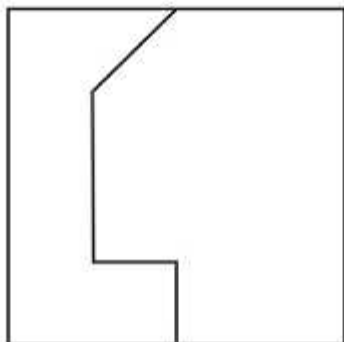
Correct Answer:



QID : 122 -

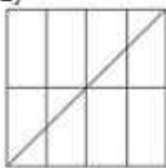
From the given answer figures, select the one in which the question figure is hidden/embedded.

दी गई उत्तर आकृतियों में से उस आकृति को चुनिए जिसमें प्रश्न आकृति निहित है।

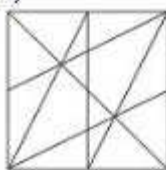


Options:

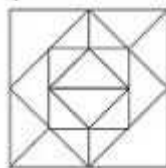
1)



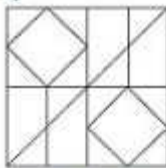
2)



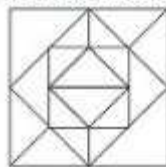
3)



4)



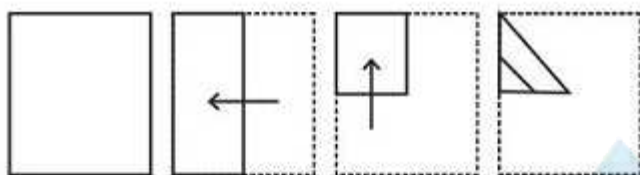
Correct Answer:



QID : 123 -

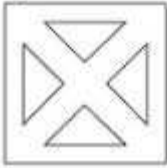
A piece of paper is folded and punched as shown below in the question figures. From the given answer figures, indicate how it will appear when opened.

प्रश्न आकृतियों में दिखाए अनुसार कागज को मोड़कर उसमें छेद करने तथा खोलने के बाद वह किस उत्तर आकृति जैसा दिखाई देगा?




Options:

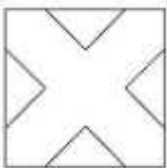
1)



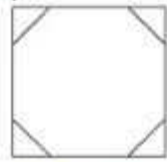
2)




3)



4)



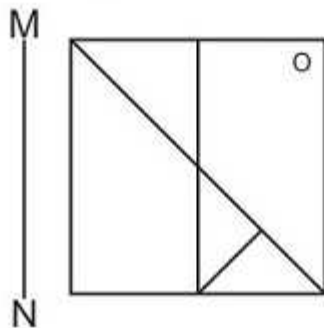
Correct Answer:



QID : 124 -

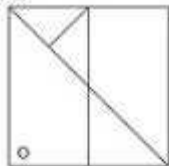
If a mirror is placed on the line MN, then which of the answer figures is the right image of the given figure?

यदि एक दर्पण को MN रेखा पर रखा जाए तो दी गई उत्तर आकृतियों में से कौन-सी आकृति प्रश्न आकृति का सही प्रतिबिम्ब होगी?

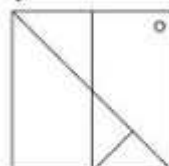


Options:

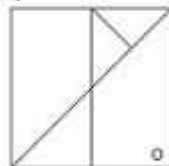
1)



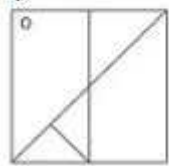
2)



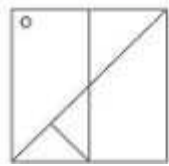
3)



4)



Correct Answer:



QID : 125 -

A word is represented by only one set of numbers as given in any one of the alternatives. The sets of numbers given in the alternatives are represented by two classes of alphabets as shown in the given two matrices. The columns and rows of Matrix-I are numbered from 0 to 4 and that of Matrix-II are numbered from 5 to 9. A letter from these matrices can be represented first by its row and next by its column, for example 'K' can be represented by 42, 34 etc and 'Z' can be represented by 96, 79 etc. Similarly, you have to identify the set for the word 'ROAD'.

एक शब्द केवल एक संख्या-समूह द्वारा दर्शाया गया है, जैसा कि विकल्पों में से किसी एक में दिया गया है। विकल्पों में दिए गए संख्या-समूह अक्षरों के दो वर्गों द्वारा दर्शाए गए हैं, जैसा कि दिए गए दो आव्यूहों में है। आव्यूह-I के स्तम्भ और पंक्ति की संख्या 0 से 4 और आव्यूह-II की 5 से 9 है। इन आव्यूहों से एक अक्षर को पहले उसकी पंक्ति और बाद में स्तम्भ संख्या द्वारा दर्शाया जा सकता है। उदाहरण के लिए 'K' को 42, 34 आदि द्वारा दर्शाया जा सकता है तथा 'Z' को 96, 79 आदि द्वारा दर्शाया जा सकता है। इसी तरह से आपको प्रश्न में दिए शब्द 'ROAD' के लिए समूह को पहचानना है।

Matrix I आव्यूह - I					
	0	1	2	3	4
0	L	K	A	F	H
1	K	I	I	C	D
2	J	E	E	E	F
3	M	I	A	E	K
4	M	B	K	C	G

Matrix II आव्यूह - II					
	5	6	7	8	9
5	Q	S	R	U	Z
6	S	R	O	V	T
7	O	U	V	S	Z
8	V	Y	T	Y	S
9	Y	Z	O	U	V

Options:

- 1) 24,14,67,76
- 2) 30,22,86,56
- 3) 66,67,02,14
- 4) 13,43,56,86

Correct Answer: 66,67,02,14

SSC CGL 2017 EXAM PAPER : Held on 17-AUG-2017
Shift-2
(General Awareness)

QID : 126 - The _____ exchange rate is the relative price of foreign goods in terms of domestic goods.

Options:

- 1) Artificial
- 2) Nominal
- 3) Fixed
- 4) Real

Correct Answer: Real

QID : 127 - _____ is an alternative way of representing the production function.

Options:

- 1) The Short Run
- 2) The Long Run
- 3) Isoquant
- 4) Average product

Correct Answer: Isoquant

QID : 128 - "United Nations Organization" is listed in the _____ list given in the Seventh Schedule in the Constitution of India.

Options:

- 1) Union
- 2) State
- 3) Global
- 4) Concurrent

Correct Answer: Union

QID : 129 - There are total _____ parliamentary seats (Rajya Sabha constituency) in Punjab.

Options:

- 1) 7
- 2) 1
- 3) 18
- 4) 10

Correct Answer: 7

QID : 130 - Big landlords or warrior chiefs in the seventh century were acknowledged as _____ by the existing kings?

Options:

- 1) Rashtrakutas
- 2) Chalukya
- 3) Samantas
- 4) Brahmanas

Correct Answer: Samantas

QID : 131 - The Agra fort was built by _____.

Options:

- 1) Shah Jahan
- 2) Akbar
- 3) Jahangir
- 4) Babur

Correct Answer: Akbar

QID : 132 - How many states does India have as of June 2017?

Options:

- 1) 26
- 2) 27
- 3) 28
- 4) 29

Correct Answer: 29

QID : 133 - The northern plain of India has been formed by the interplay of the three major river systems, namely– the Indus, the Ganga and the _____.

Options:

- 1) Brahmaputra
- 2) Krishna
- 3) Kaveri
- 4) Mahanadi

Correct Answer: Brahmaputra

QID : 134 - In the names *Mangifera indica* (mango), *Solanum tuberosum* (potato) and *Panthera leo* (lion), what does the three names, *indica*, *tuberosum* and *leo*, represent?

Options:

- 1) Binomial Nomenclature
- 2) Taxonomic Hierarchy
- 3) Identification
- 4) Specific Epithet

Correct Answer: Specific Epithet

QID : 135 - _____ are chlorophyll-bearing, simple, thalloid, autotrophic and largely aquatic (both fresh water and marine) organisms.

Options:

- 1) Pteridophytes
- 2) Bryophytes
- 3) Algae
- 4) Gymnosperms

Correct Answer: Algae

QID : 136 - Animals like annelids and arthropods etc where the body can be divided into identical left and right halves in only one plane, exhibit _____ symmetry.

Options:

- 1) Coelenterata
- 2) Radial
- 3) Ctenophora
- 4) Bilateral

Correct Answer: Bilateral

QID : 137 - If the orbit of a planet is an ellipse then what is the point at which the Sun is located called?

Options:

- 1) Centre
- 2) Circumcentre
- 3) Incentre
- 4) Focus

Correct Answer: Focus

QID : 138 - The sliding friction is _____ than the static friction.

Options:

- 1) double
- 2) same
- 3) greater
- 4) smaller

Correct Answer: smaller

QID : 139 - _____ optical data storage is a technology where data is stored in multiple layers in the optical disc.

Options:

- 1) 3D
- 2) 30D
- 3) 300D
- 4) 3000D

Correct Answer: 3D

QID : 140 - Kelvin (K) is the unit of measurement of _____.

Options:

- 1) Density
- 2) Pressure
- 3) Mass
- 4) Temperature

Correct Answer: Temperature

QID : 141 - What is the process of rust forming on iron called?

Options:

- 1) Rusting
- 2) Crystallisation
- 3) Shovel
- 4) Spade

Correct Answer: Rusting

QID : 142 - _____ acts as a shield absorbing ultraviolet radiation from the sun.

Options:

- 1) Chlorofluorocarbons
- 2) Stratosphere
- 3) Ozone hole
- 4) Greenhouse

Correct Answer: Stratosphere

QID : 143 - _____ scheme launched by the Central Government aims to spur social, economic and infrastructure development in rural areas by developing a cluster of 300 Smart Villages.

Options:

- 1) Soil Health Card
- 2) Shyama Prasad Mukherji Rurban Mission
- 3) Pradhan Mantri Fasal Bima Yojana
- 4) Pradhanmantri rojgar yojna

Correct Answer: Shyama Prasad Mukherji Rurban Mission

QID : 144 - Who invented the electrocardiogram (ECG)?

Options:

- 1) Willem Einthoven
- 2) Edward Jenner
- 3) Antonio de Ulloa and Charles Wood
- 4) Karl Benz

Correct Answer: Willem Einthoven

QID : 145 - Who is the winner of 2017 Formula One Chinese Grand Prix?

Options:

- 1) Sebastian Vettel
- 2) Lewis Hamilton
- 3) Valtteri Bottas
- 4) Kimi Raikkonen

Correct Answer: Lewis Hamilton

QID : 146 - In which city of India is Charminar located?

Options:

- 1) Pune
- 2) Delhi

3) Aurangabad

4) Hyderabad

Correct Answer: Hyderabad

QID : 147 - Which of the following was the winner of the Grammy Awards 2016 "Record of the Year"?

Options:

1) Uptown Funk

2) Really Love

3) Thinking Out Loud

4) Blank Space

Correct Answer: Uptown Funk

QID : 148 - 1. The author of the novel 'Darkness at Noon' is Victor LaValle.

2. The author of the novel 'The Great Gatsby' is F. Scott Fitzgerald.

3. The author of the novel 'The Sound and the Fury' is L. Ron Hubbard.

Which of the statements given above are not correct?

Options:

1) 1 and 2

2) 2 and 3

3) 1 and 3

4) 1, 2 and 3

Correct Answer: 1 and 3

QID : 149 - What was Norway's rank in 2016 Human Development Index published by the United Nations Development Programme?

Options:

1) 1

2) 10

3) 100

4) 200

Correct Answer: 1

QID : 150 - Which country is not a member of Bay of Bengal Initiative for Multi-Sectoral Technical and Economic Cooperation (BIMSTEC)?

Options:

1) Thailand

2) Myanmar

3) India

4) Pakistan

Correct Answer: Pakistan

EduBull.com

SSC CGL 2017 EXAM PAPER : Held on 17-AUG-2017 Shift-2
(Mathematics)

QID : 151 - What is the value of 9991×10009 ?

Options:

- 1) 99999099
- 2) 99999819
- 3) 99999919
- 4) 99999019

Correct Answer: 99999919

QID : 152 - A can do $\frac{1}{3}$ rd of a job in 3 days and B can do half of the job in 9 days. If they work on it together, then in how many days can they finish half of the job?

Options:

- 1) 4
- 2) 5
- 3) 6
- 4) 3

Correct Answer: 3

QID : 153 - What is the area (in sq cm) of a rhombus if the lengths of its diagonals are 25 cm and 20 cm?

Options:

- 1) 500

- 2) 250
- 3) 125
- 4) 200

Correct Answer: 250

QID : 154 - If a shopkeeper sells an item at Rs 4200 which is marked as Rs 4800, then what is the discount (in %) that he is offering?

Options:

- 1) 12.5
- 2) 14.28
- 3) 10
- 4) 15

Correct Answer: 12.5

QID : 155 - The flight fare between two cities is increased in the ratio 11:13. What is the increase (in Rs) in the fare, if the original fare was Rs 12100?

Options:

- 1) 14300
- 2) 2200
- 3) 22000
- 4) 1430

Correct Answer: 2200

QID : 156 - 3 numbers whose average is 112, the first number is $\frac{1}{6}$ th the sum of other 2. What is the first number?

Options:

- 1) 45
- 2) 30
- 3) 15
- 4) 48

Correct Answer: 48

QID : 157 - A trader buys 800 kgs of tomatoes for Rs 7200. 10% tomatoes are damaged in transportaion. At what rate (Rs/Kg) should he sell the rest to earn 30% profit?

Options:

- 1) 9
- 2) 13
- 3) 10

4) 12

Correct Answer: 13

QID : 158 - A student has to secure 35% marks to pass in a subject. If he gets 82 and fails by 23 marks. What is the maximum marks of the subject?

Options:

- 1) 300
- 2) 250
- 3) 350
- 4) 400

Correct Answer: 300

QID : 159 - A spaceship travels at 810 km/hr. How many metres does it travel in 1/5th of a second?

Options:

- 1) 60
- 2) 45
- 3) 75
- 4) 90

Correct Answer: 45

QID : 160 - If the amount received at the end of 2nd and 3rd year as Compound Interest on a certain Principal is Rs 2100, and Rs 2268 respectively, what is the rate (in %) of interest?

Options:

- 1) 7
- 2) 8
- 3) 9
- 4) 10

Correct Answer: 8

QID : 161 - If $5x - (1/2)(2x - 7) = 5.5$, then what is the value of x?

Options:

- 1) $3/2$
- 2) $1/2$
- 3) $-1/2$
- 4) $-3/2$

Correct Answer: $1/2$

QID : 162 - If $a + b = 4$ and $ab = -5$, then what is the value of $a^3 + b^3$?

Options:

- 1) 34
- 2) 36
- 3) 124
- 4) 126

Correct Answer: 124

QID : 163 - The sum of a number and 4 times its reciprocal is 5. What is the number?

Options:

- 1) 4
- 2) 5
- 3) 6
- 4) 7

Correct Answer: 4

QID : 164 - The 3rd and 8th term of an arithmetic progression are -13 and 2 respectively. What is the 14th term?

Options:

- 1) 23
- 2) 17
- 3) 20
- 4) 26

Correct Answer: 20

QID : 165 - What is the reflection of the point (4 , -3) in the line $y = 1$?

Options:

- 1) (4, -5)
- 2) (4, 5)
- 3) (-4, -5)
- 4) (-4, 5)

Correct Answer: (4, 5)

QID : 166 - In what ratio does the point $T(x, 0)$ divide the segment joining the points $S(5, 1)$ and $U(-1, -2)$?

Options:

- 1) 2 : 1
- 2) 1 : 2
- 3) 3 : 1
- 4) 2 : 3

Correct Answer: 1 : 2

QID : 167 - At what point does the line $3x + 2y = 12$ cuts the Y-axis?

Options:

- 1) (0, 6)
- 2) (0, -6)
- 3) (6, 0)
- 4) (-6, 0)

Correct Answer: (0, 6)

QID : 168 - The areas of two similar triangles ABC and PQR are 121 sq cms and 64 sq cms respectively. If PQ = 12 cm, what is the length (in cm) of AB?

Options:

- 1) 7.25
- 2) 6.25
- 3) 16.5
- 4) 5.25

Correct Answer: 16.5

QID : 169 - What is the value of $\tan 60^\circ + \operatorname{cosec} 60^\circ$?

Options:

- 1) $\frac{5}{3}$
- 2) $\frac{2}{\sqrt{3}}$
- 3) $\frac{5}{\sqrt{3}}$
- 4) $\frac{2}{3}$

Correct Answer: $\frac{5}{\sqrt{3}}$

QID : 170 - XYZ is right angled at Y. If $m\angle Z = 60^\circ$, then what is the value of $(\frac{1}{\sqrt{2}}) \sec X$?

Options:

- 1) $\frac{2}{\sqrt{3}}$
- 2) $\frac{1}{\sqrt{6}}$
- 3) $\frac{1}{\sqrt{3}}$
- 4) $\frac{2}{\sqrt{6}}$

Correct Answer: $2/\sqrt{6}$

QID : 171 - If $\operatorname{Cosec} \theta = 17/8$, then what is the value of $\cos \theta$?

Options:

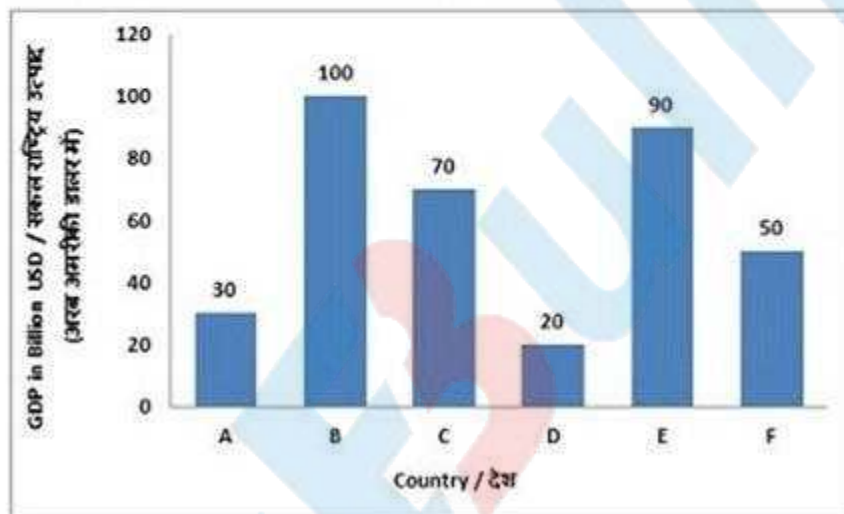
- 1) $15/8$
- 2) $15/17$
- 3) $8/15$
- 4) $17/15$

Correct Answer: $15/17$

QID : 172 -

The bar graph shows GDP for the year 2016 in billion USD of six countries (A, B, C, D, E, F) of a regional trade block. Study the diagram and answer the following questions.

बार ग्राफ वर्ष 2016 में एक क्षेत्रीय व्यावसायिक ब्लॉक के छह देशों (A, B, C, D, E, F) का सकल राष्ट्रीय उत्पाद (अरब अमरीकी डालर में) दर्शाता है। इस आरेख का अध्ययन करें और निम्नलिखित प्रश्नों का उत्तर दें।



Which country is the third biggest in terms of Gross Domestic Product (GDP)?

Options:

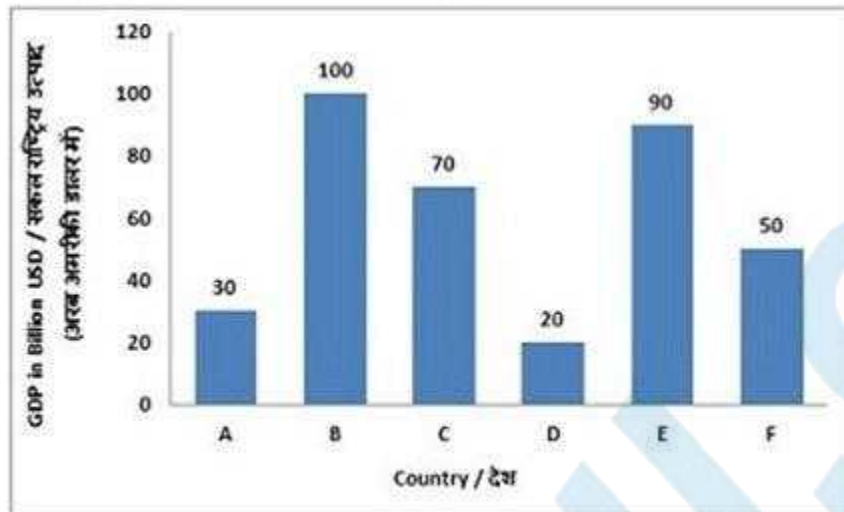
- 1) A
- 2) C
- 3) E
- 4) F

Correct Answer: C

QID : 173 -

The bar graph shows GDP for the year 2016 in billion USD of six countries (A, B, C, D, E, F) of a regional trade block. Study the diagram and answer the following questions.

बार ग्राफ वर्ष 2016 में एक क्षेत्रीय व्यावसायिक ब्लॉक के छह देशों (A, B, C, D, E, F) का सकल राष्ट्रीय उत्पाद (अरब अमरीकी डालर में) दर्शाता है। इस आरेख का अध्ययन करें और निम्नलिखित प्रश्नों का उत्तर दें।



By what amount (in billion USD) is the Gross Domestic Product (GDP) of Country A lesser than that of Country F?

Options:

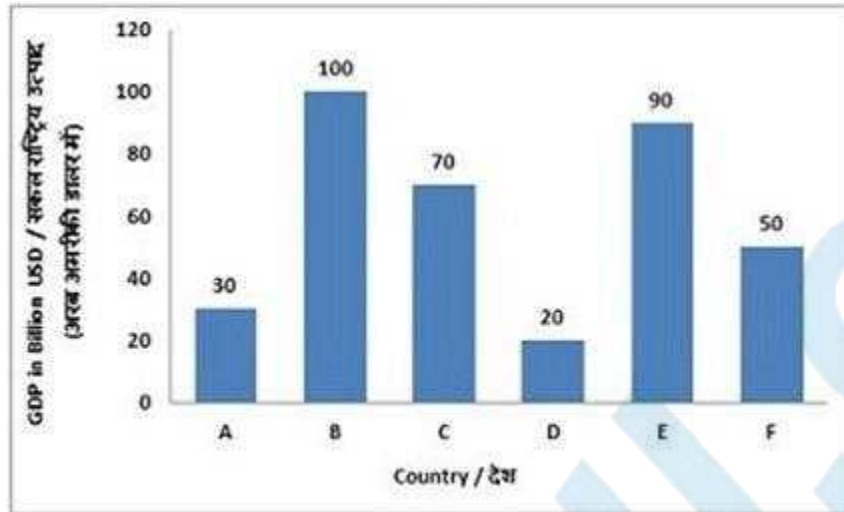
- 1) 20
- 2) 50
- 3) 25
- 4) 40

Correct Answer: 40

QID : 174 -

The bar graph shows GDP for the year 2016 in billion USD of six countries (A, B, C, D, E, F) of a regional trade block. Study the diagram and answer the following questions.

बार ग्राफ वर्ष 2016 में एक क्षेत्रीय व्यावसायिक ब्लॉक के छह देशों (A, B, C, D, E, F) का सकल राष्ट्रीय उत्पाद (अरब अमरीकी डालर में) दर्शाता है। इस आरेख का अध्ययन करें और निम्नलिखित प्रश्नों का उत्तर दें।



What is the ratio of Gross Domestic Product (GDP) of Country E to Total of GDPs of countries A, C and F taken together?

Options:

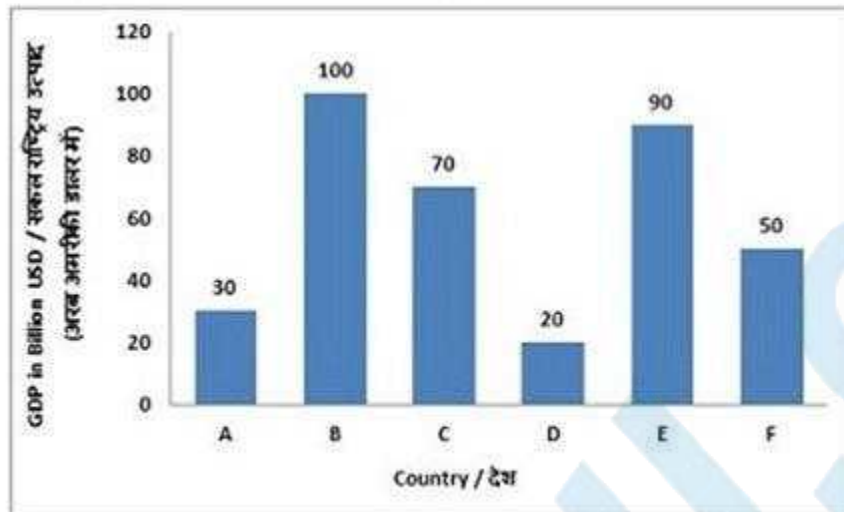
- 1) 3 : 5
- 2) 5 : 3
- 3) 9 : 5
- 4) 5 : 9

Correct Answer: 3 : 5

QID : 175 -

The bar graph shows GDP for the year 2016 in billion USD of six countries (A, B, C, D, E, F) of a regional trade block. Study the diagram and answer the following questions.

बार ग्राफ वर्ष 2016 में एक क्षेत्रीय व्यावसायिक ब्लॉक के छह देशों (A, B, C, D, E, F) का सकल राष्ट्रीय उत्पाद (अरब अमरीकी डालर में) दर्शाता है। इस आरेख का अध्ययन करें और निम्नलिखित प्रश्नों का उत्तर दें।



If the combined GDP of the six countries has grown by 50% in the last decade, then what was their combined annual Gross Domestic Product (in billion USD) before 10 years?

Options:

- 1) 540
- 2) 180
- 3) 240
- 4) 200

Correct Answer: 240

SSC CGL 2017 EXAM PAPER : Held on 17-AUG-2017
Shift-2
(English Comprehension)

QID : 176 - In the following question, some part of the sentence may have errors. Find out which part of the sentence has an error and select the appropriate option. If a sentence is free from error, select 'No Error'.

Water was dripping (1)/ of the trees, and (2)/ the grass was wet. (3)/No Error (4)

Options:

- 1) 1
- 2) 2
- 3) 3
- 4) 4

Correct Answer: 2

QID : 177 - In the following question, some part of the sentence may have errors. Find out which part of the sentence has an error and select the appropriate option. If a sentence is free from error, select 'No Error'.

Pravin sat up on the (1)/ sofa, with his legs (2)/ tucked down him. (3)/No Error (4)

Options:

- 1) 1
- 2) 2

3) 3

4) 4

Correct Answer: 3

QID : 178 - In the following question, the sentence given with blank to be filled in with an appropriate word. Select the correct alternative out of the four and indicate it by selecting the appropriate option.

At night, the hungry orphan would sneak into the kitchen and _____ tiny amounts of food

Options:

1) prefer

2) lifter

3) differ

4) pilfer

Correct Answer: pilfer

QID : 179 - In the following question, the sentence given with blank to be filled in with an appropriate word. Select the correct alternative out of the four and indicate it by selecting the appropriate option.

As the only _____ person in the wacky family, the sensible girl felt like the odd woman out.

Options:

1) insane

2) vain

3) sane

4) main

Correct Answer: sane

QID : 180 - In the following question, out of the four alternatives, select the word similar in meaning to the word given.

Piquancy

Options:

1) Bland

2) Flavouring

3) Insipid

4) Tedious

Correct Answer: Flavouring

QID : 181 - In the following question, out of the four alternatives, select the word similar in meaning to the word given.

To Confront

Options:

- 1) To Avoid
- 2) To Dodge
- 3) To Yield
- 4) To Accost

Correct Answer: To Accost

QID : 182 - In the following question, out of the four alternatives, select the word opposite in meaning to the word given.

Savant

Options:

- 1) Amateur
- 2) Academic
- 3) Pundit
- 4) Egghead

Correct Answer: Amateur

QID : 183 - In the following question, out of the four alternatives, select the word opposite in meaning to the word given.

To Indict

Options:

- 1) To Arraign
- 2) To Censure
- 3) To Exonerate
- 4) To Impeach

Correct Answer: To Exonerate

QID : 184 - In the following question, out of the four alternatives, select the alternative which best expresses the meaning of the idiom/phrase.

To Have bitten off more than you can chew

Options:

- 1) To eat voraciously and then fall sick
- 2) To behave disrespectfully towards elders and then repent the act
- 3) To have tried to do something which is too difficult
- 4) To have missed a golden opportunity and after that willing to put twice the effort to recover the loss

Correct Answer: To have tried to do something which is too difficult

QID : 185 - In the following question, out of the four alternatives, select the alternative which best expresses the meaning of the idiom/phrase.

Out of print

Options:

- 1) Not able to print due to being short on paper
- 2) A book no longer available from the publisher
- 3) Intentionally not mention some items in the article or book
- 4) All publishers refuse to publish your book

Correct Answer: A book no longer available from the publisher

QID : 186 - In the following question, out of the four alternatives, select the alternative which will improve the bracketed part of the sentence. In case no improvement is needed, select "no improvement".

I'm (having to) too much fun.

Options:

- 1) having
- 2) had
- 3) has
- 4) no improvement

Correct Answer: having

QID : 187 - In the following question, out of the four alternatives, select the alternative which will improve the bracketed part of the sentence. In case no improvement is needed, select "no improvement".

What would the cavalry (doing) out here?

Options:

- 1) be doing
- 2) be done
- 3) done
- 4) no improvement

Correct Answer: be doing

QID : 188 - In the following question, out of the four alternatives, select the alternative which is the best substitute of the words/sentence.

In exactly the same words as were used originally

Options:

- 1) Verbatim
- 2) Offbeat

3) Divergent

4) Contrary

Correct Answer: Verbatim

QID : 189 - In the following question, out of the four alternatives, select the alternative which is the best substitute of the words/sentence.

A person inclined to question or doubt accepted opinions

Options:

1) Adherent

2) Sceptic

3) Zealot

4) Disciple

Correct Answer: Sceptic

QID : 190 - In the following question, four words are given out of which one word is correctly spelt. Select the correctly spelt word.

Options:

1) Ditheering

2) Dethering

3) Dithering

4) Detheering

Correct Answer: Dithering

QID : 191 - In the following question, four words are given out of which one word is correctly spelt. Select the correctly spelt word.

Options:

1) Throtled

2) Throttlede

3) Throtlede

4) Throttled

Correct Answer: Throttled

QID : 192 - The question below consists of a set of labelled sentences. Out of the four options given, select the most logical order of the sentences to form a coherent paragraph.

Children are sensitive

X-to what happens around them and are

Y-enthusiastic about working on

Z-plays that reflect their lives

Options:

- 1) ZYX
- 2) XYZ
- 3) ZXY
- 4) YZX

Correct Answer: XYZ

QID : 193 - The question below consists of a set of labelled sentences. Out of the four options given, select the most logical order of the sentences to form a coherent paragraph.

But this does not mean

X-phenomena to the body

Y-is a meaningless expression

Z-that the reference of mental

Options:

- 1) YZX
- 2) ZXY
- 3) YXZ
- 4) XZY

Correct Answer: ZXY

QID : 194 - In the following question, a sentence has been given in Active/Passive voice. Out of the four alternatives suggested, select the one which best expresses the same sentence in Passive/Active voice.

The travel agent is making all the reservations.

Options:

- 1) All the reservations is made by the travel agent.
- 2) All the reserving will be made by the travel agent.
- 3) All the reservations are being made by the travel agent.
- 4) All the reserving is made by the travel agent.

Correct Answer: All the reservations are being made by the travel agent.

QID : 195 - In the following question, a sentence has been given in Direct/Indirect speech. Out of the four alternatives suggested, select the one which best expresses the same sentence in Indirect/Direct speech.

He said to the dentist, "I have a toothache."

Options:

- 1) He told the dentist that I have a toothache.
- 2) He told the dentist that he had gotten a toothache.

- 3) He told the dentist that he had a toothache.
4) He told the dentist that I have a gotten toothache.

Correct Answer: He told the dentist that he had a toothache.

QID : 196 - In the following passage, some of the words have been left out. Read the passage carefully and select the correct answer for the given blank out of the four alternatives.

The Trikonasana, or triangle pose, stimulates the function of the entire body and _____ a lateral (side) stretch to the spine. It helps reduce blood pressure, stress, and anxiety. Practise this asana every day and you'll _____ strength in the ankles, thighs, knees, hips, calves and hamstrings. All standing poses _____ the cardiovascular system, so the more you do it, the _____ your stamina will become. The aim is never to overdo it, but to engage regularly, _____ that you get stronger and more stable over time.

function of the entire body and _____ a lateral (side) stretch

Options:

- 1) given
2) gave
3) to give
4) gives

Correct Answer: gives

QID : 197 - In the following passage, some of the words have been left out. Read the passage carefully and select the correct answer for the given blank out of the four alternatives.

The Trikonasana, or triangle pose, stimulates the function of the entire body and _____ a lateral (side) stretch to the spine. It helps reduce blood pressure, stress, and anxiety. Practise this asana every day and you'll _____ strength in the ankles, thighs, knees, hips, calves and hamstrings. All standing poses _____ the cardiovascular system, so the more you do it, the _____ your stamina will become. The aim is never to overdo it, but to engage regularly, _____ that you get stronger and more stable over time.

you'll _____ strength in the ankles, thighs, knees, hips

Options:

- 1) gaining
2) gain
3) gained
4) to gain

Correct Answer: gain

QID : 198 - In the following passage, some of the words have been left out. Read the passage carefully and select the correct answer for the given blank out of the four alternatives.

The Trikonasana, or triangle pose, stimulates the function of the entire body and _____ a lateral (side) stretch to the spine. It helps reduce blood pressure, stress, and anxiety. Practise this asana every day and you'll _____ strength in the ankles, thighs, knees, hips, calves and hamstrings. All standing poses _____ the cardiovascular system, so the more you do it, the _____ your stamina will become. The aim is never to overdo it, but to engage regularly, _____ that you get stronger and more stable over time.

All standing poses _____ the cardiovascular system

Options:

- 1) built
- 2) build
- 3) building
- 4) to build

Correct Answer: build

QID : 199 - In the following passage, some of the words have been left out. Read the passage carefully and select the correct answer for the given blank out of the four alternatives.

The Trikonasana, or triangle pose, stimulates the function of the entire body and _____ a lateral (side) stretch to the spine. It helps reduce blood pressure, stress, and anxiety. Practise this asana every day and you'll _____ strength in the ankles, thighs, knees, hips, calves and hamstrings. All standing poses _____ the cardiovascular system, so the more you do it, the _____ your stamina will become. The aim is never to overdo it, but to engage regularly, _____ that you get stronger and more stable over time.

so the more you do it, the _____ your stamina.

Options:

- 1) best
- 2) better
- 3) good
- 4) too good

Correct Answer: better

QID : 200 - In the following passage, some of the words have been left out. Read the passage carefully and select the correct answer for the given blank out of the four alternatives.

The Trikonasana, or triangle pose, stimulates the function of the entire body and _____ a lateral (side) stretch to the spine. It helps reduce blood pressure, stress, and anxiety. Practise this asana every day and you'll _____ strength in the ankles, thighs, knees, hips, calves and hamstrings. All standing poses _____ the cardiovascular system, so the more you do it, the _____ your stamina will become. The aim is never to overdo it, but to engage regularly, _____ that you get stronger and more stable over time.

to engage regularly, _____ that you get stronger and more stable

Options:

- 1) if
- 2) of
- 3) so
- 4) to

Correct Answer: so

SSC CGL 2017 EXAM PAPER : Held on 17-AUG-2017
Shift-3
(Reasoning)

QID : 201 - Select the related word from the given alternatives.

Tongue : Taste :: Nose : ?

Options:

- 1) Smell
- 2) Face
- 3) Touch
- 4) Chin

Correct Answer: Smell

QID : 202 - Select the related letters from the given alternatives.

FDH : LJN :: RPT : ?

Options:

- 1) XYZ
- 2) WUY
- 3) XVZ
- 4) SUV

Correct Answer: XVZ

QID : 203 - Select the related number from the given alternatives.

39 : 52 :: 51 : ?

Options:

- 1) 53
- 2) 40
- 3) 68
- 4) 38

Correct Answer: 68

QID : 204 - Select the odd word from the given alternatives.

Options:

- 1) Nylon
- 2) Wool
- 3) Silk
- 4) Cotton

Correct Answer: Nylon

QID : 205 - Select the odd letters from the given alternatives.

Options:

- 1) ZXV
- 2) GDA
- 3) NKH
- 4) URO

Correct Answer: ZXV

QID : 206 - Select the odd number from the given alternatives.

Options:

- 1) 15
- 2) 20
- 3) 40
- 4) 60

Correct Answer: 15

QID : 207 - A series is given, with one word missing. Choose the correct alternative from the given ones that will complete the series.

Pension, Aptitude, Captain, Tropical, Survive, ?

Options:

- 1) Parrot
- 2) Apply
- 3) Trap
- 4) Tetrapod

Correct Answer: Tetrapod

QID : 208 - A series is given, with one term missing. Choose the correct alternative from the given ones that will complete the series.

DEC, HIG, LMK, PQO, TUS, ?

Options:

- 1) XYZ
- 2) WXY
- 3) XYW
- 4) YZA

Correct Answer: XYW

QID : 209 - A series is given, with one number missing. Choose the correct alternative from the given ones that will complete the series.

100, -20, 4, ? , 0.16, -0.032

Options:

- 1) 0.8
- 2) 1
- 3) -1
- 4) -0.8

Correct Answer: -0.8

QID : 210 - Chirag's birthday is on Thursday 1st June. On what day of the week will be Reyansh's Birthday in the same year if Reyansh was born on 3rd December?

Options:

- 1) Wednesday
- 2) Sunday
- 3) Friday
- 4) Saturday

Correct Answer: Sunday

QID : 211 - The weights of 4 boxes are 20, 40, 50 and 30 kilograms. Which of the following cannot be the total weight, in kilograms, of any combination of these boxes and in a combination a box can be used only once

Options:

- 1) 140
- 2) 130
- 3) 90
- 4) 120

Correct Answer: 130

QID : 212 - From the given words, select the word which cannot be formed using the letters of the given word.

ORDINALS

Options:

- 1) DINAR
- 2) ADORN
- 3) SALON
- 4) IDEAL

Correct Answer: IDEAL

QID : 213 - If QUICKLY is coded as OSGAIJW, then how will HUE be coded as?

Options:

- 1) ZMA
- 2) FSC
- 3) HZK
- 4) HNI

Correct Answer: FSC

QID : 214 - In a certain code language, '+' represents 'x', '-' represents '+', 'x' represents '÷' and '÷' represents '-'. What is the answer to the following question?

$$42 \times 7 \div 7 + 9 - 62 = ?$$

Options:

- 1) 5
- 2) 87
- 3) 22
- 4) 2

Correct Answer: 5

QID : 215 - If $17@1=8$; $9@1=4$; $6@4=1$; then what is the value of $8@10=?$

Options:

- 1) 3
- 2) 26
- 3) 23
- 4) 47

Correct Answer: 3

QID : 216 -

Select the missing number from the given responses

दिए गए विकल्पों में से लुप्त संख्या चुनिए।

23	114	204
45	25	36
68	89	?

Options:

- 1) 157
- 2) 168
- 3) 21
- 4) 15

Correct Answer: 168

QID : 217 - A truck travels 36 km North, then it turns West and travels 9 km, then it turns South and travels 50 km, then it turns to its left and travels 9 km. Where is it now with reference to its starting position?

Options:

- 1) 14 km North
- 2) 86 km South
- 3) 86 km North
- 4) 14 km South

Correct Answer: 14 km South

QID : 218 - In the question two statements are given, followed by two conclusions, I and II. You have to consider the statements to be true even if it seems to be at variance from commonly known facts. You have to decide which of the given conclusions, if any, follows from the given statements.

Statement 1 : Some clever are intelligent.

Statement 2 : No intelligent is Smart.

Conclusion I : Some intelligent are clever.

Conclusion II : Some smart are clever.

Options:

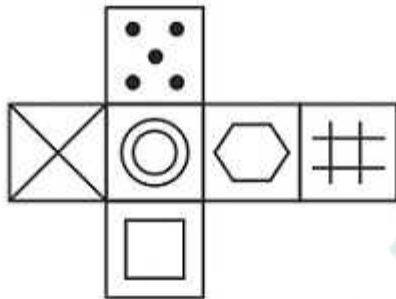
- 1) Only conclusion I follows
- 2) Only conclusion II follows
- 3) Both I and II follow
- 4) Neither I nor II follows

Correct Answer: Only conclusion I follows

QID : 219 -

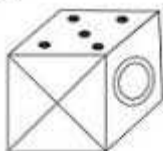
Which of the following cube in the answer figure cannot be made based on the unfolded cube in the question figure?

निम्नलिखित उत्तर आकृति में से कौन सा घन दिए गए प्रश्न आकृति में से खुले घन से बनाया नहीं जा सकता?

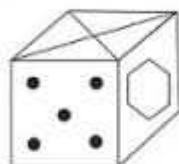


Options:

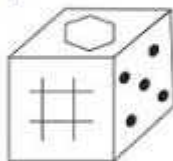
1)



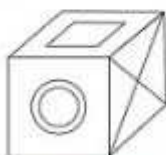
2)



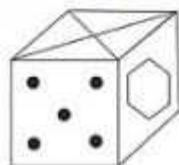
3)



4)



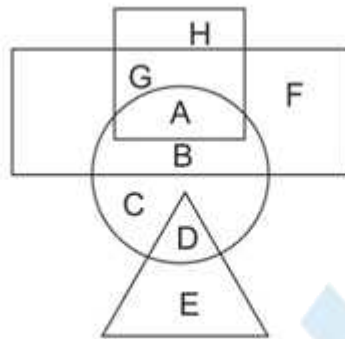
Correct Answer:



QID : 220 -

In the following figure, square represents Dietitians, triangle represents Botanists, circle represents Psychologists and rectangle represents Indians. Which set of letters represents Psychologists who are not Botanists?

निम्नलिखित आकृति में, वर्ग आहार विशेषज्ञों को दर्शाता है, त्रिभुज वनस्पतिज्ञों को दर्शाता है, वृत्त मनोवैज्ञानिकों को दर्शाता है और आयत भारतीयों को दर्शाता है। अक्षरों का कौन सा समूह मनोवैज्ञानिकों को दर्शाता है जो वनस्पतिज्ञ नहीं हैं?



Options:

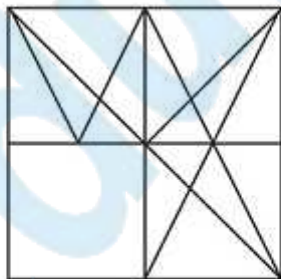
- 1) D,G,A
- 2) A,B,C
- 3) F,E,C
- 4) H,B,D

Correct Answer: A,B,C

QID : 221 -

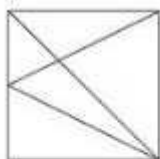
Which answer figure will complete the pattern in the question figure?

निम्नलिखित में से कौन-सी उत्तर आकृति प्रश्न आकृति के प्रतिरूप को पूरा करेगी?

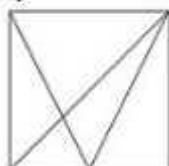


Options:

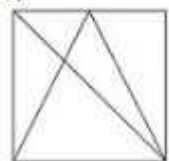
1)



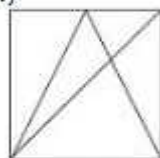
2)



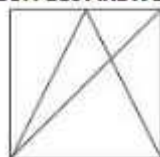
3)



4)



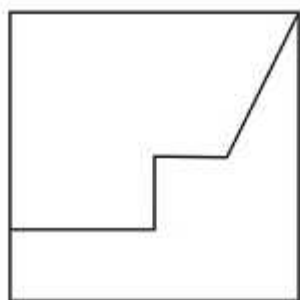
Correct Answer:



QID : 222 -

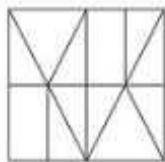
From the given answer figures, select the one in which the question figure is hidden/embedded.

दी गई उत्तर आकृतियों में से उस आकृति को चुनिए जिसमें प्रश्न आकृति निहित है।

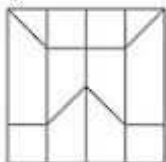


Options:

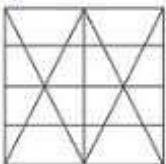
1)



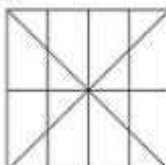
2)



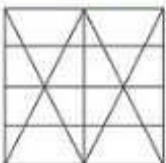
3)



4)



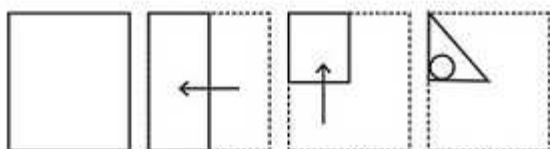
Correct Answer:



QID : 223 -

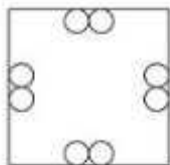
A piece of paper is folded and punched as shown below in the question figures. From the given answer figures, indicate how it will appear when opened.

प्रश्न आकृतियों में दिखाए अनुसार कागज को मोड़कर उसमें छेद करने तथा खोलने के बाद वह किस उत्तर आकृति जैसा दिखाई देगा?

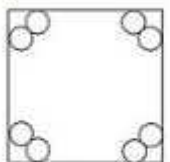


Options:

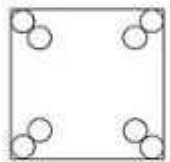
1)



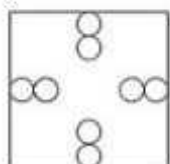
2)



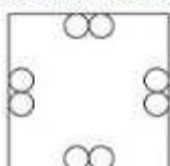
3)



4)



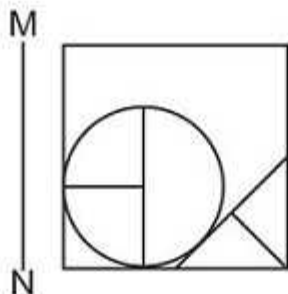
Correct Answer:



QID : 224 -

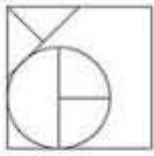
If a mirror is placed on the line MN, then which of the answer figures is the right image of the given figure?

यदि एक दर्पण को MN रेखा पर रखा जाए तो दी गई उत्तर आकृतियों में से कौन-सी आकृति प्रश्न आकृति का सही प्रतिबिम्ब होगी?



Options:

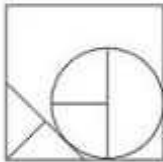
1)



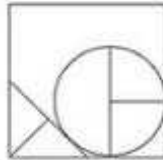
2)



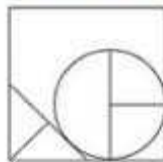
3)



4)



Correct Answer:



QID : 225 -

A word is represented by only one set of numbers as given in any one of the alternatives. The sets of numbers given in the alternatives are represented by two classes of alphabets as shown in the given two matrices. The columns and rows of Matrix-I are numbered from 0 to 4 and that of Matrix-II are numbered from 5 to 9. A letter from these matrices can be represented first by its row and next by its column, for example 'K' can be represented by 20, 34 etc and 'Z' can be represented by 67, 88 etc. Similarly, you have to identify the set for the word 'PURE'.

एक शब्द केवल एक संख्या-समूह द्वारा दर्शाया गया है, जैसा कि विकल्पों में से किसी एक में दिया गया है। विकल्पों में दिए गए संख्या-समूह अक्षरों के दो वर्गों द्वारा दर्शाए गए हैं, जैसा कि दिए गए दो आव्यूहों में है। आव्यूह-I के स्तम्भ और पंक्ति की संख्या 0 से 4 और आव्यूह-II की 5 से 9 है। इन आव्यूहों से एक अक्षर को पहले उसकी पंक्ति और बाद में स्तम्भ संख्या द्वारा दर्शाया जा सकता है। उदाहरण के लिए 'K' को 20, 34 आदि द्वारा दर्शाया जा सकता है तथा 'Z' को 67, 88 आदि द्वारा दर्शाया जा सकता है। इसी तरह से आपको प्रश्न में दिए शब्द 'PURE' के लिए समूह को पहचानना है।

Matrix I आव्यूह - I					
	0	1	2	3	4
0	G	K	D	D	G
1	A	J	F	E	J
2	K	F	H	F	A
3	D	G	M	C	K
4	C	L	H	J	B

Matrix II आव्यूह - II					
	5	6	7	8	9
5	O	T	V	U	R
6	Q	U	Z	Y	T
7	V	Y	X	Q	N
8	Y	R	X	Z	P
9	N	U	Y	U	O

Options:

- 1) 89,96,86,13
- 2) 34,34,56,79
- 3) 41,44,67,96
- 4) 01,10,79,57

Correct Answer: 89,96,86,13

SSC CGL 2017 EXAM PAPER : Held on 17-AUG-2017
Shift-3
(General Awareness)

QID : 226 - In a market system, the central problems regarding how much and what to produce are solved through the coordination of economic activities brought about by _____ signals.

Options:

- 1) Supply
- 2) Demand
- 3) Price
- 4) Stock Market

Correct Answer: Price

QID : 227 - _____ says that the marginal product of a factor input initially rises with its employment level. But after reaching a certain level of employment, it starts falling.

Options:

- 1) Law of diminishing marginal product
- 2) Law of variable proportions
- 3) The Short Run
- 4) The Long Run

Correct Answer: Law of variable proportions

QID : 228 - Constituent Assembly of India was founded in the year _____.

Options:

- 1) 1940
- 2) 1946
- 3) 1947
- 4) 1950

Correct Answer: 1946

QID : 229 - Which Fundamental Right in the Indian Constitution allows citizens to move the court if they believe that any of their Fundamental Rights have been violated by the State?

Options:

- 1) Cultural and Educational Rights
- 2) Right to Constitutional Remedies
- 3) Right against Exploitation
- 4) Right to Freedom of Religion

Correct Answer: Right to Constitutional Remedies

QID : 230 - During their rule the British persuaded or forced cultivators in Punjab to grow

_____.

Options:

- 1) Jute
- 2) Tea
- 3) Sugarcane
- 4) Wheat

Correct Answer: Wheat

QID : 231 - The Red fort in Delhi was the residence of emperors of which dynasty in the 16th century?

Options:

- 1) Rajput
- 2) Khalji
- 3) Tughluq
- 4) Mughal

Correct Answer: Mughal

QID : 232 - India has a land boundary of about _____ km.

Options:

- 1) 5200
- 2) 10200
- 3) 15200
- 4) 20200

Correct Answer: 15200

QID : 233 - The Patkai hills belong to which mountain ranges?

Options:

- 1) Himachal
- 2) Purvanchal
- 3) Himgiri
- 4) Hindu Kush

Correct Answer: Purvanchal

QID : 234 - RBCs are formed in the _____ in the adults.

Options:

- 1) blue bone marrow
- 2) red bone marrow
- 3) white bone marrow
- 4) black bone marrow

Correct Answer: red bone marrow

QID : 235 - The later (second) formed primary xylem elements are called _____.

Options:

- 1) Protoxylem
- 2) Metaxylem
- 3) Xylem parenchyma
- 4) Xylem fibres

Correct Answer: Metaxylem

QID : 236 - Which of the following does not hold true for Animal belonging to Phylum Chordate?

Options:

- 1) Notochord present
- 2) Pharynx perforated by gill slits.
- 3) Heart is dorsal (if present)
- 4) A post-anal part (tail) is present

Correct Answer: Heart is dorsal (if present)

QID : 237 - In science a push or pull of an object is called _____.

Options:

- 1) Pick
- 2) Lift
- 3) Force
- 4) Shut

Correct Answer: Force

QID : 238 - There are how many vocal cords in the human voice box?

Options:

- 1) One
- 2) Two
- 3) Three
- 4) Four

Correct Answer: Two

QID : 239 - The attribute _____ specifies (in pixels) the distance between two adjacent cells.

Options:

- 1) Width
- 2) Height
- 3) Cellpadding
- 4) Cellspacing

Correct Answer: Cellspacing

QID : 240 - What is the name of the acid in an ant's sting?

Options:

- 1) Acetic acid
- 2) Citric acid
- 3) Formic acid
- 4) Lactic acid

Correct Answer: Formic acid

QID : 241 - Which base is present in soap?

Options:

- 1) Sodium hydroxide
- 2) Silicon dioxide
- 3) Calcium hydroxide
- 4) Ammonium hydroxide

Correct Answer: Sodium hydroxide

QID : 242 - Any undesirable change in physical, chemical or biological characteristics of air, land, water or soil is called?

Options:

- 1) Greenhouse effect
- 2) Solid wastes

- 3) Pollution
- 4) Deforestation

Correct Answer: Pollution

QID : 243 - _____ scheme was launched by the Central Government to create awareness about the cleanliness of the children.

Options:

- 1) Sukanya Samridhi Yojana
- 2) Bal Swachta Mission
- 3) Pradhan Mantri Jan Dhan Yojana
- 4) Beti Bachao Beti Padhao Yojana

Correct Answer: Bal Swachta Mission

QID : 244 - Who discovered the colour photography?

Options:

- 1) Robert Noyce
- 2) Enrico Fermi
- 3) John Logie Baird
- 4) James Clerk Maxwell

Correct Answer: James Clerk Maxwell

QID : 245 - Who was the host nation of 2014 FIFA World Cup?

Options:

- 1) Argentina
- 2) Netherlands
- 3) Germany
- 4) Brazil

Correct Answer: Brazil

QID : 246 - Jama Masjid of Delhi was built by?

Options:

- 1) Akbar
- 2) Humayun
- 3) Babar
- 4) Shah Jahan

Correct Answer: Shah Jahan

QID : 247 - Which of the following won the Oscars 2017 Best Picture?

Options:

- 1) La La Land
- 2) Moonlight

- 3) Arrival
- 4) Fences

Correct Answer: Moonlight

QID : 248 - Which of the statements given below are correct?

- 1. The author of the novel 'Half of a Yellow Sun' is Chimamanda Ngozi Adichie.
- 2. The author of the novel 'Middlesex' is Jeffrey Eugenides.
- 3. The author of the novel 'Missile Gap' is China Mieville.

Options:

- 1) 1 and 2
- 2) 2 and 3
- 3) 1 and 3
- 4) 1, 2 and 3

Correct Answer: 1 and 2

QID : 249 - Which company acquired LinkedIn For \$26.2 Billion?

Options:

- 1) Apple
- 2) Facebook
- 3) Microsoft
- 4) IBM

Correct Answer: Microsoft

QID : 250 - Which of the following rivers flows from India to Pakistan?

Options:

- 1) Satluj
- 2) Ghaghra
- 3) Betwa
- 4) Tapi

Correct Answer: Satluj

SSC CGL 2017 EXAM PAPER : Held on 17-AUG-2017 Shift-3
(Mathematics)

QID : 251 - What least number must be added to 4131, so that the sum is completely divisible by 19?

Options:

- 1) 10
- 2) 11
- 3) 9
- 4) 12

Correct Answer: 11

QID : 252 - A, B and C can finish a job working alone in 12, 8 and 24 days respectively. In how many days they can finish the job if they worked together?

Options:

- 1) 5
- 2) 6
- 3) 4
- 4) 3

Correct Answer: 4

QID : 253 - What is the area (in sq cm) of an equilateral triangle of side 14 cm?

Options:

- 1) $49\sqrt{3}$

- 2) $98\sqrt{3}$
- 3) $(49/2)\sqrt{3}$
- 4) $(49/4)\sqrt{3}$

Correct Answer: $49\sqrt{3}$

QID : 254 - What is the effective discount (in %) on two successive discounts of 20% and 10%?

Options:

- 1) 30
- 2) 32
- 3) 35
- 4) 28

Correct Answer: 28

QID : 255 - Profit of Rs 1,03,500 has to be divided between three partners A, B and C in the ratio 11:7:5. How much amount (in Rs) does B get?

Options:

- 1) 22,500
- 2) 49,500
- 3) 50,500
- 4) 31,500

Correct Answer: 31,500

QID : 256 - The average weight of P, Q and R is 45 kg. If the average weight of P and Q be 36.5 kg and that of Q and R be 52 kg, then what is the weight (in kgs) of Q?

Options:

- 1) 42
- 2) 44
- 3) 46
- 4) 48

Correct Answer: 42

QID : 257 - A shopkeeper by selling 21 items earns a profit equal to the selling price of 1 item. What is his profit percentage?

Options:

- 1) 5.5
- 2) 2.2
- 3) 2
- 4) 5

Correct Answer: 5

QID : 258 - What is the value of 10% of 150% of 400?

Options:

- 1) 600
- 2) 50
- 3) 500
- 4) 60

Correct Answer: 60

QID : 259 - To cover a distance of 144 km in 3.2 hours what should be the average speed of the car in meters/second?

Options:

- 1) 12.5
- 2) 10
- 3) 7.5
- 4) 15

Correct Answer: 12.5

QID : 260 - If in 2 years at simple interest the principal increases by 18%, what will be the compound interest (in Rs) earned on Rs 7000 in 3 years at the same rate?

Options:

- 1) 1865.2
- 2) 2065.2
- 3) 1965.2
- 4) 1765.2

Correct Answer: 2065.2

QID : 261 - If $\frac{x}{3} - \frac{[5(\frac{7x}{5} - \frac{4}{3})]}{2} = -\frac{x}{6}$, then what is the value of x?

Options:

- 1) $\frac{10}{9}$
- 2) $-\frac{10}{9}$
- 3) $-\frac{9}{10}$
- 4) $\frac{9}{10}$

Correct Answer: $\frac{10}{9}$

QID : 262 - If $a^3 + b^3 = 19$ and $a + b = 1$, then what is the value of ab ?

Options:

- 1) 5
- 2) -6
- 3) 7
- 4) -9

Correct Answer: -6

QID : 263 - A fraction is greater than its reciprocal by $(72)/(77)$. What is the fraction?

Options:

- 1) $7/11$
- 2) $11/7$
- 3) $4/7$
- 4) $7/4$

Correct Answer: $11/7$

QID : 264 - What is the sum of the first 12 terms of an arithmetic progression if the first term is -19 and last term is 36?

Options:

- 1) 192
- 2) 230
- 3) 102
- 4) 214

Correct Answer: 102

QID : 265 - What is the reflection of the point $(-2, 5)$ in the line $x = -1$?

Options:

- 1) $(-2, -7)$
- 2) $(0, 5)$
- 3) $(2, 5)$
- 4) $(-2, 7)$

Correct Answer: $(0, 5)$

QID : 266 - Point P is the midpoint of segment AB. Co-ordinates of P are $(3, 1)$ and B are $(5, -4)$. What are the co-ordinates of point A?

Options:

- 1) $(-1, 7)$
- 2) $(1, -7)$

- 3) (1 , 6)
- 4) (-1 , -7)

Correct Answer: (1 , 6)

QID : 267 - What is the slope of the line perpendicular to the line passing through the points (-5 , 1) and (-2 , 0)?

Options:

- 1) -3
- 2) 3
- 3) -1/3
- 4) 1/3

Correct Answer: -1/3

QID : 268 - ABC is similar to PQR. If ratio of perimeter of ABC : perimeter of PQR is 5:9 and if PQ = 45 cm, then the length of AB (in cm) is?

Options:

- 1) 15
- 2) 20
- 3) 25
- 4) 16

Correct Answer: 25

QID : 269 - What is the value of $(1/\sqrt{2}) \cot 45^\circ + (1/\sqrt{3}) \operatorname{Cosec} 60^\circ$?

Options:

- 1) $(\sqrt{6} + 1)/\sqrt{3}$
- 2) $\sqrt{3}$
- 3) $(1 + 3\sqrt{2})/\sqrt{3}$
- 4) $(3 + 2\sqrt{2})/3\sqrt{2}$

Correct Answer: $(3 + 2\sqrt{2})/3\sqrt{2}$

QID : 270 - ABC is right angled at B. If $m\angle A = 60^\circ$, then what is the value of $\sec C \cdot \sin A$?

Options:

- 1) $2/\sqrt{3}$
- 2) $\sqrt{3}/2$
- 3) $2/3$
- 4) 1

Correct Answer: 1

QID : 271 - If $\tan \theta = 7/24$, then what is the value of $\sec \theta$?

Options:

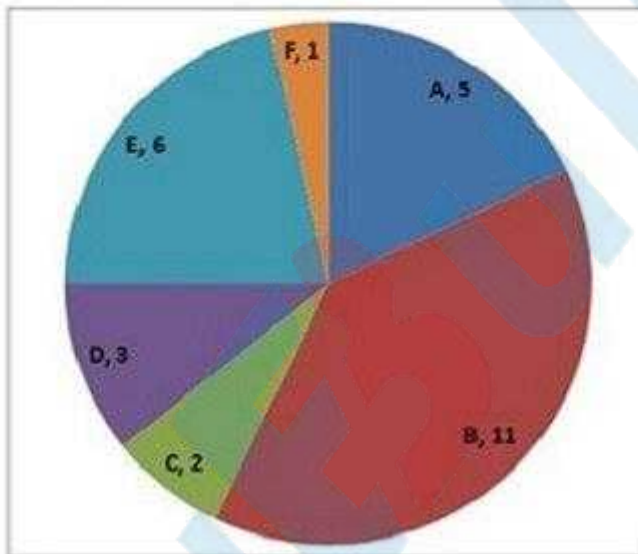
- 1) $24/25$
- 2) $24/7$
- 3) $25/7$
- 4) $25/24$

Correct Answer: $25/24$

QID : 272 -

The pie chart shows tickets sold (in 1000s) per month by six different airlines (A, B, C, D, E, F). Study the diagram and answer the following questions.

पाई चार्ट छह भिन्न-भिन्न एयरलाइन्स (A, B, C, D, E, F) द्वारा प्रति माह बेचे जाने वाली टिकटें (हज़ारों में) दर्शाता है। इस आरेख का अध्ययन करें और निम्नलिखित प्रश्नों का उत्तर दें।



Which airline sold the second highest number of tickets?

Options:

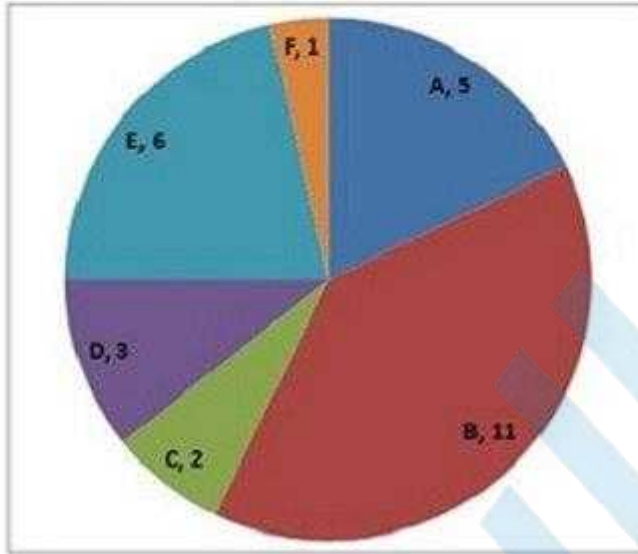
- 1) E
- 2) A
- 3) B
- 4) D

Correct Answer: E

QID : 273 -

The pie chart shows tickets sold (in 1000s) per month by six different airlines (A, B, C, D, E, F). Study the diagram and answer the following questions.

पाई चार्ट छह भिन्न-भिन्न एयरलाइन्स (A, B, C, D, E, F) द्वारा प्रति माह बेचे जाने वाली टिकटें (हज़ारों में) दर्शाता है। इस आरेख का अध्ययन करें और निम्नलिखित प्रश्नों का उत्तर दें।



Airline E sold how many more tickets than Airline A?

Options:

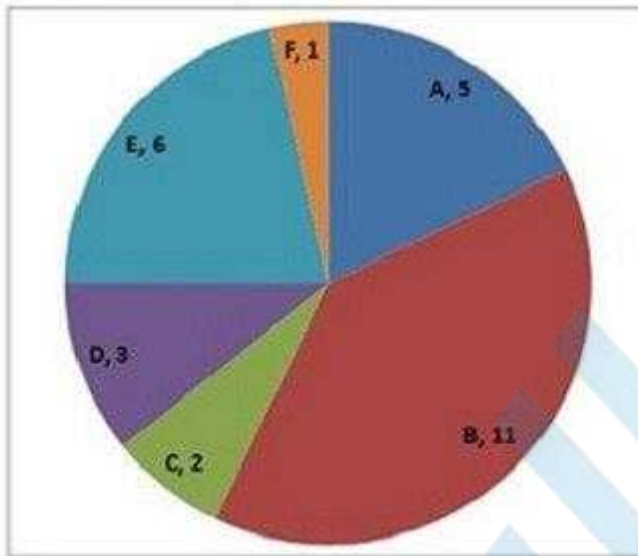
- 1) 25
- 2) 16
- 3) 20
- 4) 10

Correct Answer: 20

QID : 274 -

The pie chart shows tickets sold (in 1000s) per month by six different airlines (A, B, C, D, E, F). Study the diagram and answer the following questions.

पाई चार्ट छह भिन्न-भिन्न एयरलाइन्स (A, B, C, D, E, F) द्वारा प्रति माह बेचे जाने वाली टिकटें (हज़ारों में) दर्शाता है। इस आरेख का अध्ययन करें और निम्नलिखित प्रश्नों का उत्तर दें।



The ratio of tickets sold by Airlines A and D to tickets sold by Airline E is?

Options:

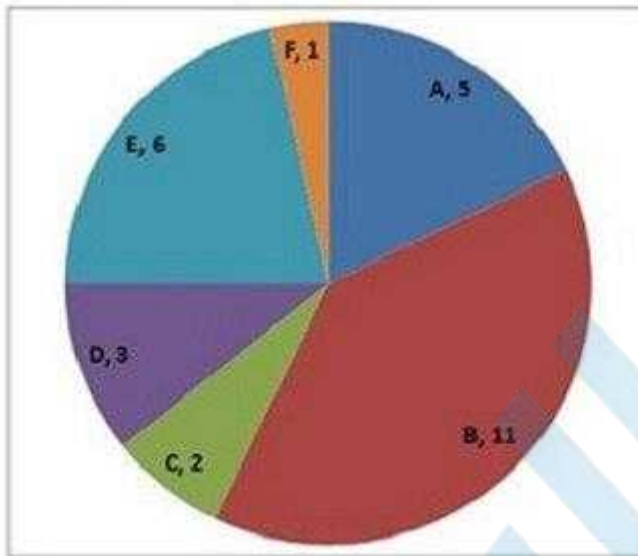
- 1) 3 : 4
- 2) 4 : 3
- 3) 2 : 3
- 4) 4 : 1

Correct Answer: 4 : 3

QID : 275 -

The pie chart shows tickets sold (in 1000s) per month by six different airlines (A, B, C, D, E, F). Study the diagram and answer the following questions.

पाई चार्ट छह भिन्न-भिन्न एयरलाइन्स (A, B, C, D, E, F) द्वारा प्रति माह बेचे जाने वाली टिकटें (हज़ारों में) दर्शाता है। इस आरेख का अध्ययन करें और निम्नलिखित प्रश्नों का उत्तर दें।



If the price of an airline ticket is Rs 7000 then by what amount, monthly Revenue (in Rs. Millions) from sale of tickets of Airline B is greater than that of Airline E?

Options:

- 1) 77
- 2) 7
- 3) 35
- 4) 42

Correct Answer: 35

SSC CGL 2017 EXAM PAPER : Held on 17-AUG-2017
Shift-3
(English Comprehension)

QID : 276 - In the following question, some part of the sentence may have errors. Find out which part of the sentence has an error and select the appropriate option. If a sentence is free from error, select 'No Error'.

She was so (1)/ near to (2)/ achieving her goal. (3)/No Error (4)

Options:

- 1) 1
- 2) 2
- 3) 3
- 4) 4

Correct Answer: 2

QID : 277 - In the following question, some part of the sentence may have errors. Find out which part of the sentence has an error and select the appropriate option. If a sentence is free from error, select 'No Error'.

He watched as fights (1)/ broke out (2)/ along the city. (3)/No Error (4)

Options:

- 1) 1
- 2) 2

3) 3

4) 4

Correct Answer: 3

QID : 278 - In the following question, the sentence given with blank to be filled in with an appropriate word. Select the correct alternative out of the four and indicate it by selecting the appropriate option.

Everyone was pleased to learn the actor would _____ his role as the captivating pirate.

Options:

1) reprise

2) rescue

3) save

4) free

Correct Answer: reprise

QID : 279 - In the following question, the sentence given with blank to be filled in with an appropriate word. Select the correct alternative out of the four and indicate it by selecting the appropriate option.

The diamond necklace was _____ too extravagant for a simple dinner party.

Options:

1) distance

2) long

3) very much

4) far

Correct Answer: far

QID : 280 - In the following question, out of the four alternatives, select the word similar in meaning to the word given.

Fallacy

Options:

1) Conformity

2) Surety

3) Bias

4) Evidence

Correct Answer: Bias

QID : 281 - In the following question, out of the four alternatives, select the word similar in meaning to the word given.

To reproach

Options:

- 1) To commend
- 2) To laud
- 3) To exonerate
- 4) To admonish

Correct Answer: To admonish

QID : 282 - In the following question, out of the four alternatives, select the word opposite in meaning to the word given.

Veneration

Options:

- 1) Adoration
- 2) Contempt
- 3) Reverence
- 4) Admiration

Correct Answer: Contempt

QID : 283 - In the following question, out of the four alternatives, select the word opposite in meaning to the word given.

Impugnable

Options:

- 1) Dicey
- 2) Debatable
- 3) Indubious
- 4) Hazy

Correct Answer: Indubious

QID : 284 - In the following question, out of the four alternatives, select the alternative which best expresses the meaning of the idiom/phrase.

To hit the nail on the head

Options:

- 1) To take out frustration by beating a person
- 2) To make a wrong decision
- 3) To find exactly the right answer
- 4) To unwittingly fall into a trap]

Correct Answer: To find exactly the right answer

QID : 285 - In the following question, out of the four alternatives, select the alternative which best expresses the meaning of the idiom/phrase.

On thin ice

Options:

- 1) To keep failing after repeated efforts
- 2) To endure a harsh winter
- 3) To keep one's cool even in a tough situation
- 4) In a precarious or risky situation

Correct Answer: In a precarious or risky situation

QID : 286 - In the following question, out of the four alternatives, select the alternative which will improve the bracketed part of the sentence. In case no improvement is needed, select "no improvement".

All (was surprising) to find that he was not with them.

Options:

- 1) was surprised
- 2) were surprised
- 3) is surprised
- 4) no improvement

Correct Answer: were surprised

QID : 287 - In the following question, out of the four alternatives, select the alternative which will improve the bracketed part of the sentence. In case no improvement is needed, select "no improvement".

Read in order (become) wise.

Options:

- 1) to have to be
- 2) to have become
- 3) to become
- 4) no improvement

Correct Answer: to become

QID : 288 - In the following question, out of the four alternatives, select the alternative which is the best substitute of the words/sentence.

Showing strong feeling

Options:

- 1) Meek
- 2) Vehement
- 3) Apathetic
- 4) Impotent

Correct Answer: Vehement

QID : 289 - In the following question, out of the four alternatives, select the alternative which is the best substitute of the words/sentence.

A sheath for the blade of a sword

Options:

- 1) Scabbard
- 2) Denude
- 3) Divulge
- 4) Expose

Correct Answer: Scabbard

QID : 290 - In the following question, four words are given out of which one word is correctly spelt. Select the correctly spelt word.

Options:

- 1) Litegants
- 2) Litigents
- 3) Litigants
- 4) Litegents

Correct Answer: Litigants

QID : 291 - In the following question, four words are given out of which one word is correctly spelt. Select the correctly spelt word.

Options:

- 1) Stoically
- 2) Stoicaly
- 3) Stoecally
- 4) Stoecaly

Correct Answer: Stoically

QID : 292 - The question below consists of a set of labelled sentences. Out of the four options given, select the most logical order of the sentences to form a coherent paragraph.

The space in front of the large

X-hut was empty, but

Y-placed several stools

Z-before it were

Options:

- 1) XYZ
- 2) XZY
- 3) ZYX
- 4) ZXY

Correct Answer: XZY

QID : 293 - The question below consists of a set of labelled sentences. Out of the four options given, select the most logical order of the sentences to form a coherent paragraph.

From our common experience

X-of the relation of the

Y-mental he starts out

Z-physical and the

Options:

- 1) XYZ
- 2) XZY
- 3) ZYX
- 4) ZXY

Correct Answer: XZY

QID : 294 - In the following question, a sentence has been given in Active/Passive voice. Out of the four alternatives suggested, select the one which best expresses the same sentence in Passive/Active voice.

The maid vacuums and dusts the house every day.

Options:

- 1) Every day the house is vacuumed and dusted by the maid.
- 2) Every day the house were vacuumed and dusted by the maid.
- 3) Dusting and Vacuuming of the house every day is being done by the maid.
- 4) Dusting and Vacuuming of the house every day was being done by the maid.

Correct Answer: Every day the house is vacuumed and dusted by the maid.

QID : 295 - In the following question, a sentence has been given in Direct/Indirect speech. Out of the four alternatives suggested, select the one which best expresses the same sentence in Indirect/Direct speech.

The spectators said, "Bravo! Good hit, Jay!"

Options:

- 1) The spectators applauded Jay for his good hit.
- 2) The spectators applauded Jay saying, bravo, good hit Jay.
- 3) The spectators applaud Jay for his good hit.
- 4) The spectators applaud Jay saying, bravo, good hit Jay.

Correct Answer: The spectators applauded Jay for his good hit.

QID : 296 - In the following passage, some of the words have been left out. Read the passage carefully and select the correct answer for the given blank out of the four alternatives.

And then, a few glorious minutes _____, it was time to reluctantly head ashore.
_____ time, the strokes were more fluid, the movements more relaxed. I turned back one
last time _____ hello to a clown fish, the reason why I came to the Andamans. As I
watched, it played hide-and-seek _____ a sea anemone, before frisking away. Suddenly, I
realised a kinship with the blue waters _____ the Bay of Bengal.

a few glorious minutes _____, it was time to reluctantly head ashore.

Options:

- 1) late
- 2) later
- 3) lately
- 4) latest

Correct Answer: later

QID : 297 - In the following passage, some of the words have been left out. Read the passage carefully and select the correct answer for the given blank out of the four alternatives.

And then, a few glorious minutes _____, it was time to reluctantly head ashore.
_____ time, the strokes were more fluid, the movements more relaxed. I turned back one
last time _____ hello to a clown fish, the reason why I came to the Andamans. As I
watched, it played hide-and-seek _____ a sea anemone, before frisking away. Suddenly, I
realised a kinship with the blue waters _____ the Bay of Bengal.
_____ time, the strokes were more fluid

Options:

- 1) These
- 2) Those
- 3) At
- 4) This

Correct Answer: This

QID : 298 - In the following passage, some of the words have been left out. Read the passage carefully and select the correct answer for the given blank out of the four alternatives.

And then, a few glorious minutes _____, it was time to reluctantly head ashore.
_____ time, the strokes were more fluid, the movements more relaxed. I turned back one
last time _____ hello to a clown fish, the reason why I came to the Andamans. As I
watched, it played hide-and-seek _____ a sea anemone, before frisking away. Suddenly, I
realised a kinship with the blue waters _____ the Bay of Bengal.

I turned back one last time _____ hello to a clown fish, the reason

Options:

- 1) to say
- 2) said
- 3) saying
- 4) says

Correct Answer: to say

QID : 299 - In the following passage, some of the words have been left out. Read the passage carefully and select the correct answer for the given blank out of the four alternatives.

And then, a few glorious minutes _____, it was time to reluctantly head ashore. _____ time, the strokes were more fluid, the movements more relaxed. I turned back one last time _____ hello to a clown fish, the reason why I came to the Andamans. As I watched, it played hide-and-seek _____ a sea anemone, before frisking away. Suddenly, I realised a kinship with the blue waters _____ the Bay of Bengal.

hide-and-seek _____ a sea anemone, before frisking away.

Options:

- 1) to
- 2) for
- 3) from
- 4) with

Correct Answer: with

QID : 300 - In the following passage, some of the words have been left out. Read the passage carefully and select the correct answer for the given blank out of the four alternatives.

And then, a few glorious minutes _____, it was time to reluctantly head ashore. _____ time, the strokes were more fluid, the movements more relaxed. I turned back one last time _____ hello to a clown fish, the reason why I came to the Andamans. As I watched, it played hide-and-seek _____ a sea anemone, before frisking away. Suddenly, I realised a kinship with the blue waters _____ the Bay of Bengal.

kinship with the blue waters _____ the Bay of Bengal.

Options:

- 1) for
- 2) from
- 3) to
- 4) of

Correct Answer: of