

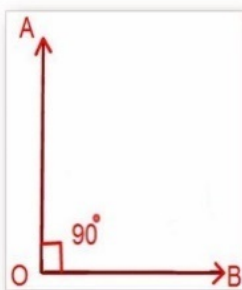



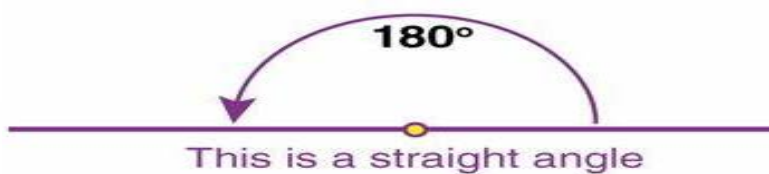
## Angles – Right and Straight


 **Right Angle:** An angle measuring  $90^\circ$  is called a right angle. The arms of a right angles are perpendicular to each other. In figure,  $\angle AOB$  is a right angle.

 **For Example:** Corner of a room and Pillar on a ground form right angles.



 **Straight Angle:** An angle whose measure is  $180^\circ$  is called a straight angle.



 **For Example:** Tubelight, pencil, a line segment form straight angles.