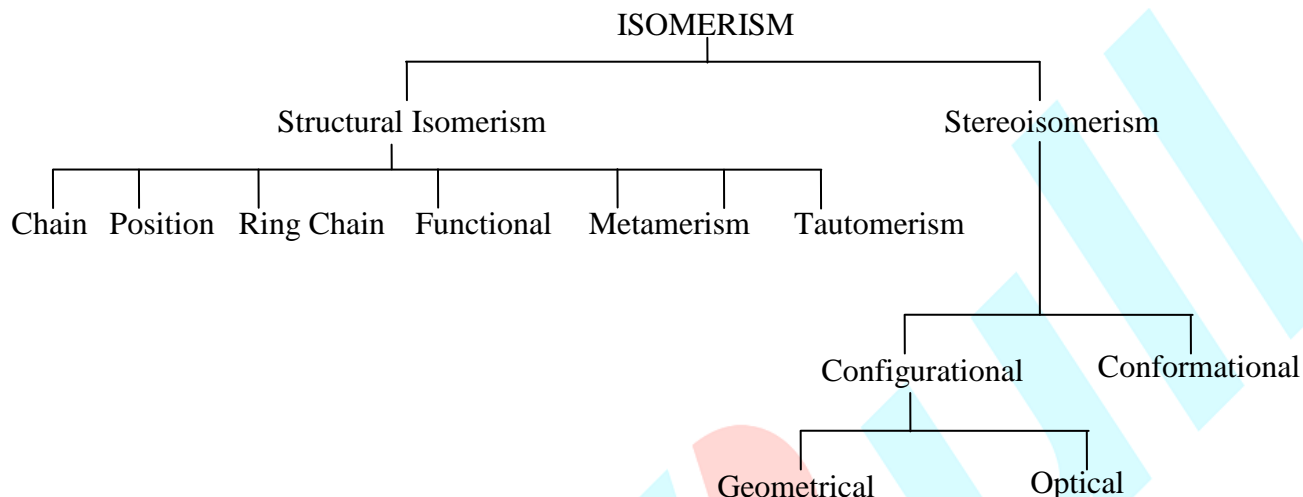


ISOMERISM

Two or more than two compounds having the same molecular formula but different physical/chemical or both properties are called isomers and the phenomenon is called isomerism.



2.1 Structural Isomerism

2.1.1 Chain Isomerism (C.I.)

The compounds which have same molecular formula, same functional group but different arrangement of carbon chain (Parental or side chain) show chain isomerism.

Ex. $\text{CH}_3\text{--CH}_2\text{--CH}_2\text{--CH}_3$

(Butane (4C))

Ex. $\text{CH}_3\text{--CH}_2\text{--CH}_2\text{--CH}_2\text{--OH}$

1-Butanol (4C)

Ex.



Methylcyclobutane

$\text{CH}_3\text{--CH--CH}_3$

CH_3

2-Methyl propane (3C)

$\text{CH}_3\text{--CH--CH}_2\text{--OH}$

CH_3

2-Methyl-1-propanol (3C)



Cyclopentane

2.1.2 Position Isomerism (P.I.)

The compounds which have same molecular formula. Same functional group, same parent carbon chain but different position of functional group or multiple bond or substituents, show position isomerism.

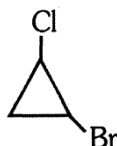
Ex. $\text{CH}_2\text{=CH--CH}_2\text{--CH}_3$

But-1-ene

Ex. $\text{CH}_3\text{--CH}_2\text{--CH}_2\text{--CH}_2\text{--OH}$

1-Butanol

Ex.



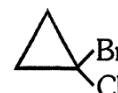
$\text{CH}_3\text{--CH=CH--CH}_2$

But-2-ene

$\text{CH}_3\text{--CH}_2\text{--CH--CH}_3$

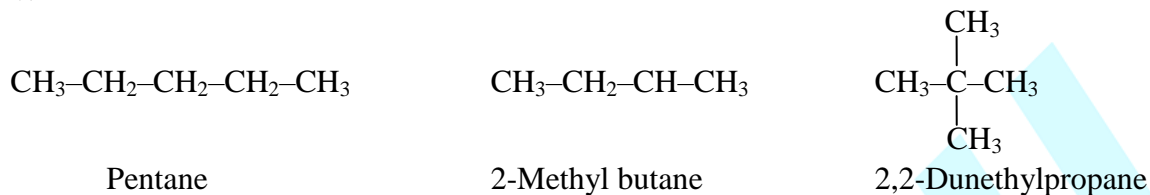
OH

2-Butanol



1-Bromo-2-chlorocyclopropane

1-Bromo-1-chlorocyclopropane

Example of CI and PI :**(i) C_5H_{12} has three structural isomers :****(ii) C_6H_{14} has 5 structural isomers**(a) $CH_3CH_2CH_2CH_2CH_2CH_3$ (b) $CH_3-CH_2-CH_2-\underset{\begin{array}{c} | \\ CH_3 \end{array}}{CH}-CH_3$

Hexane

(c) $CH_3-CH_2-\underset{\begin{array}{c} | \\ CH_3 \end{array}}{CH}-CH_2-CH_3$

2-Methyl pentane

(d) $CH_3-\underset{\begin{array}{c} | \\ CH_3 \end{array}}{CH}-\underset{\begin{array}{c} | \\ CH_3 \end{array}}{CH}-CH_3$

2,2-Dimethyl pentane

Hexane

(e) $H_3C-\underset{\begin{array}{c} | \\ CH_3 \end{array}}{\overset{\begin{array}{c} CH_3 \\ | \end{array}}{C}}-CH_2-CH_3$

2,2-Dimethyl butane

- (a-b), (a-c), (a-d), (a-e) → Chain Isomers
- (b-d), (b-e), (c-d), (c-e)
- b-c, d-e → Position Isomers

(iii) $C_3H_6Cl_2$ has 4 isomers : Position of chlorine atom is different in all the structure, so these are position isomers.

(a) $\begin{array}{c} Cl \\ | \\ H_3C-CH_2-CH-Cl \end{array}$

1,1-Dichloropropane

(b) $\begin{array}{c} Cl \\ | \\ H_2C-CH_2-CH_2-Cl \end{array}$

1,3-Dichloropropane

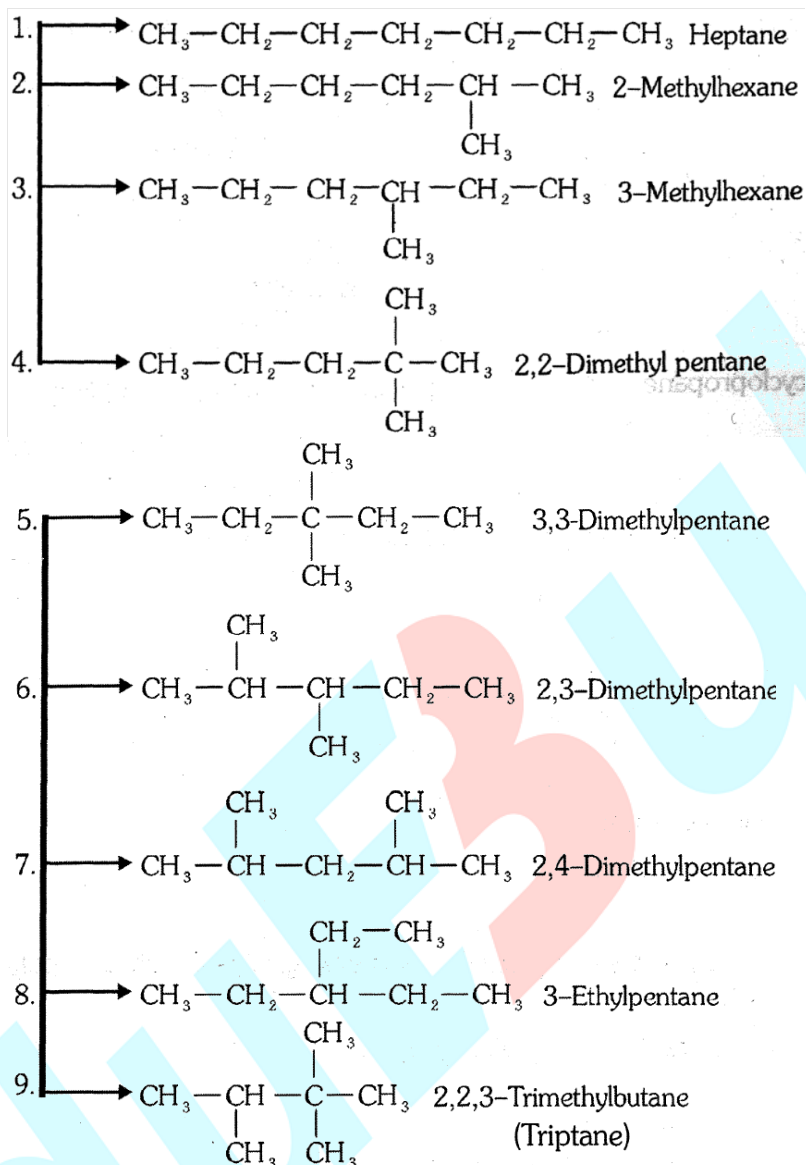
(c) $\begin{array}{c} Cl \\ | \\ H_3C-C-CH_3 \\ | \\ Cl \end{array}$

2,2-Dichloropropane

(d) $\begin{array}{c} Cl \\ | \\ H_2C-CH-CH_3 \\ | \\ Cl \end{array}$

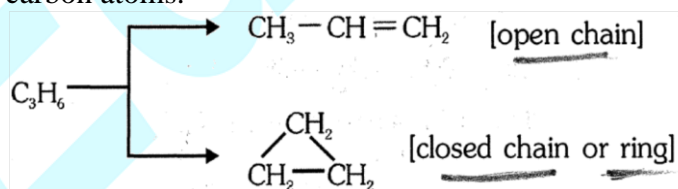
1,2-Dichloropropane

Ex. How many structural isomers of C_7H_{16} are possible?**Ans.** (9)



2.1.3 Ring chain isomerism (RCI)

Same molecular formula but different mode of linking (open chain & closed chain) of carbon atoms.



GOLDEN KEY POINTS

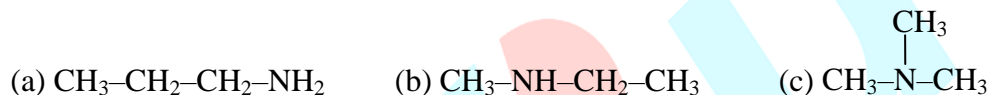
- Alkenes with cycloalkane and alkynes and alkadienes with cycloalkenes show Ring-chain Isomerism.
- Ring-chain Isomers are also Functional Isomers but priority must be given to Ring-chain Isomers.

2.1.4 Functional Isomerism

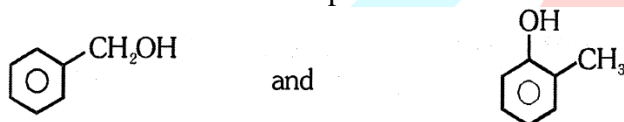
Same molecular formula but different functional groups.

Following compounds show Functional isomerism, as they have same molecular formula and different functional group.

- (i) Alcohol and Ether \longrightarrow $\text{CH}_3\text{--CH}_2\text{--OH}$ and $\text{CH}_3\text{--O--CH}_3$
- (ii) Aldehydes and Ketones \longrightarrow $\text{CH}_3\text{--CH}_2\text{--}\overset{\text{O}}{\underset{\parallel}{\text{C}}}\text{--H}$ and $\text{CH}_3\text{--}\overset{\text{O}}{\underset{\parallel}{\text{C}}}\text{--CH}_3$
- (iii) Acids and Ester \longrightarrow $\text{CH}_3\text{--}\overset{\text{O}}{\underset{\parallel}{\text{C}}}\text{--OH}$ and $\text{H--}\overset{\text{O}}{\underset{\parallel}{\text{C}}}\text{--O--CH}_3$
- (iv) Cyanide and Isocyanide \longrightarrow $\text{CH}_3\text{--CH}_2\text{--CH}_2\text{--CN}$ and $\text{CH}_3\text{--CH}_2\text{--CH}_2\text{--NC}$
- (v) Nitro and Nitrite \longrightarrow $\text{CH}_3\text{--CH}_2\text{--}\overset{\text{O}}{\underset{\parallel}{\text{N}}}\text{--O}$ and $\text{CH}_3\text{--CH}_2\text{--O--N=O}$
- (vi) 1°, 2°, 3° Amines



(vii) Alcoholic and Phenolic compounds:



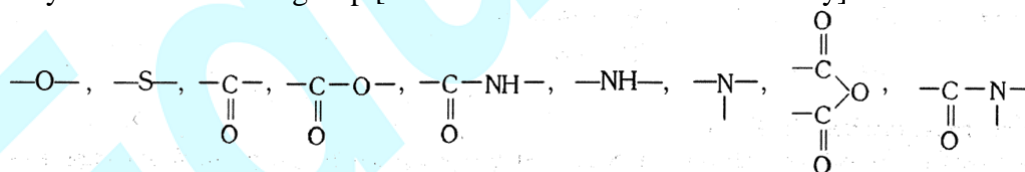
(viii) Alkyl halides do not show Functional isomerism.

(ix) $\text{CH}_3\text{--C}\equiv\text{CH}$ propyne and $\text{CH}_2=\text{CH}=\text{CH}_2$

2.1.5 Metamerism

Same molecular formula, same polyvalent Functional group but different alkyl groups attached to polyvalent Functional group.

Polyvalent Functional group [Which have more than one valency] are :



Ex. $\text{CH}_3\text{--O--CH}_2\text{--CH}_2\text{--CH}_3$

Ex. $\text{CH}_3\text{--CH}_2\text{--NH--CH}_2\text{--CH}_3$

Ex. $\text{CH}_3\text{--NH--CH}_2\text{--CH}_2\text{--CH}_2\text{--CH}_3$

Ex. $\text{CH}_3\text{--}\overset{\text{O}}{\underset{\parallel}{\text{C}}}\text{--CH}_2\text{--CH}_2\text{--CH}_2\text{--CH}_3$

$\text{H}_3\text{C--CH}_2\text{--O--CH}_2\text{--CH}_3$

$\text{CH}_3\text{--NH--CH}_2\text{--CH}_2\text{--CH}_3$

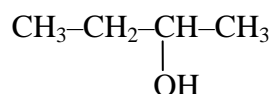
$\text{H}_3\text{C--CH}_2\text{--NH--CH}_2\text{--CH}_2\text{--CH}_3$

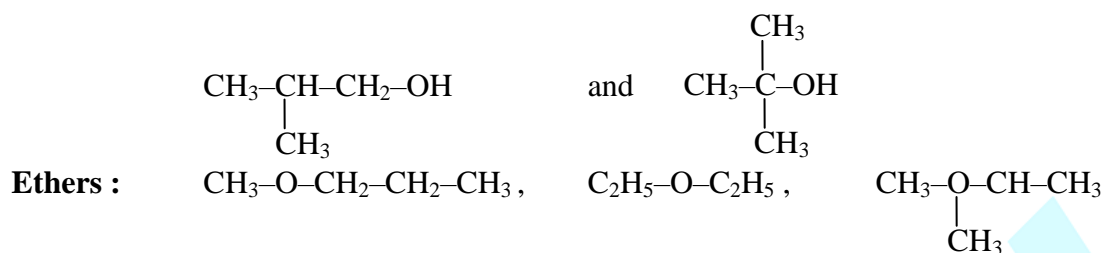
$\text{CH}_3\text{--CH}_2\text{--}\overset{\text{O}}{\underset{\parallel}{\text{C}}}\text{--CH}_2\text{--CH}_2\text{--CH}_3$

Examples Based on Structural Isomerism :-

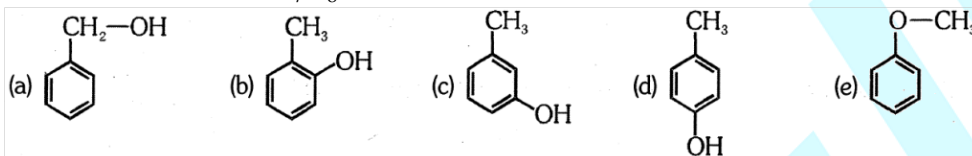
Ex.-1 $\text{C}_4\text{H}_{10}\text{O}$ Structural isomers \Rightarrow 7 [4 alcohol and 3 ethers] total 7 structural isomers are possible.

Alcohol : $\text{CH}_3\text{--CH}_2\text{--CH}_2\text{--CH}_2\text{--OH}$





Ex. 2 Aromatic isomers of $\text{C}_7\text{H}_8\text{O}$.



- a, b - Functional isomers
- c, d - Position isomers
- a, e - Functional isomers
- b, c - Position isomers
- a, d - Functional isomers
- a, c - Functional isomers

Note : Alcoholic and phenolic groups are Functional isomers.

BEGINNER'S BOX-1

- Structures $\text{CH}_3-\text{CH}_2-\text{CH}=\text{CH}_2$ and $\text{CH}_3-\underset{\text{CH}_3}{\text{C}}=\text{CH}_2$ are:-
 - Chain isomers
 - Position isomers
 - Both chain & position isomers
 - Not isomers
- How many minimum carbons required for Chain isomerism and Position isomerism in alkanes?
 - 4, 5
 - 3, 5
 - 4, 6
 - 4, 4
- How many minimum carbons required for Chain isomerism and Position isomerism in alkenes?
 - 4, 5
 - 3, 4
 - 4, 4
 - 5, 5
- How many minimum carbons required for Chain isomerism and Position isomerism in alkynes?
 - 5, 4
 - 5, 3
 - 4, 6
 - 4, 4
- $\text{CH}_3-\text{CH}=\text{CH}-\text{CH}_3$ and $\text{CH}_2=\underset{\text{CH}_2-\text{CH}_2}{\text{CH}_2}$ are:-
 - Ring-chain Isomers
 - Chain Isomers
 - Functional Isomers
 - Position Isomers
- $\text{CH}_3-\text{CH}_2-\text{CH}_2-\overset{\text{O}}{\parallel}{\text{C}}-\text{OH}$ and $\text{CH}_3-\text{CH}_2-\underset{\text{OH}}{\text{CH}}-\overset{\text{O}}{\parallel}{\text{C}}-\text{H}$ are :-
 - Position isomers
 - Functional isomers
 - Identical
 - Chain isomers
- $\text{CH}_3-\text{S}-\text{CH}_2-\text{CH}_3$ and $\text{CH}_3-\text{CH}_2-\text{S}-\text{CH}_3$ are:-
 - Ring-chain Isomers
 - Chain Isomers

(3) Functional Isomers

(4) Identical

8. $\text{CH}_3-\overset{\text{O}}{\parallel}\text{C}-\text{O}-\overset{\text{O}}{\parallel}\text{C}-\text{C}_6\text{H}_5$ and $\text{C}_6\text{H}_5-\overset{\text{O}}{\parallel}\text{C}-\text{O}-\overset{\text{O}}{\parallel}\text{C}-\text{CH}_3$ are:-
 (1) Metamers (2) Chain Isomers (3) Identical (4) Position Isomers

2.2 Stereo Isomerism

Two or more than two compounds having same molecular formula, same structural formula but different arrangement of atoms or groups in space.

(A) Configurational Isomerism: Stereo isomers which have following characteristics.

(a) Stereo isomer which cannot interconvert at room temperature due to restricted rotation known as Geometrical isomerism.

(b) Stereo isomers which have different behavior towards plane polarised light are known as optical isomers.

(B) Conformational Isomerism

2.2.1 Geometrical isomerism (G.I) :

(i) Alkenes ($>\text{C}=\text{C}<$), oximes ($>\text{C}=\text{N}-\text{OH}$) and azo compounds [$-\text{N}=\text{N}-$] etc., show G.I. due to restricted rotation about double bond

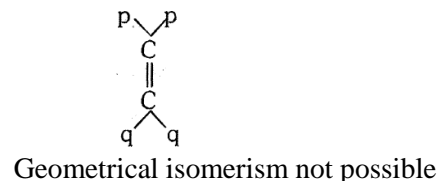
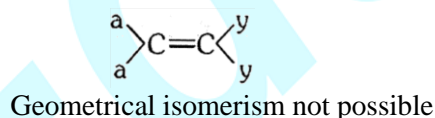
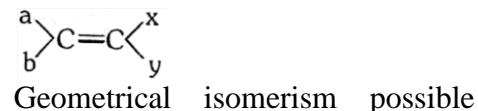
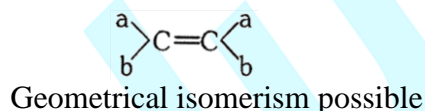
(ii) cycloalkanes show G.I. due to restricted rotation about single bond in ring.

G.I. IN ALKENES :

Reason : Restricted rotation about double bond :

Condition for Geometrical isomerism :

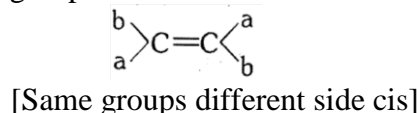
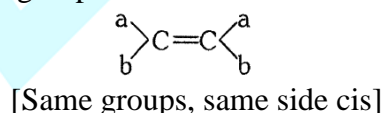
Only those alkenes show G. I. in which "Each sp^2 carbon individually have different atoms or groups"



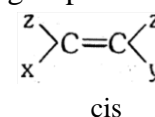
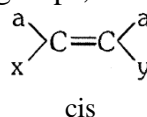
Nomenclature Systems of Geometrical isomers

(a) Cis-Trans System

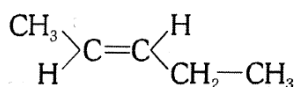
If same groups are at same side then cis and if same groups are at different side then trans.



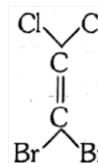
Ex.



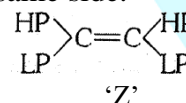
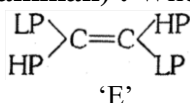
Ex.



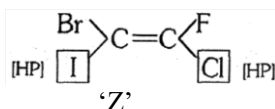
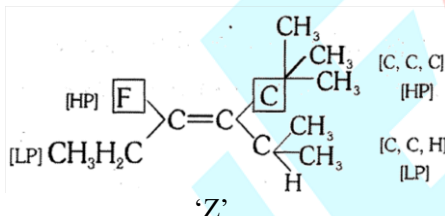
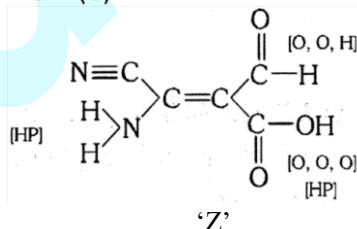
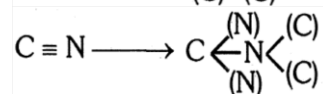
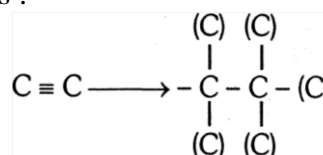
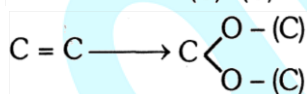
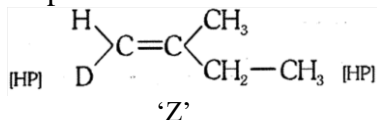
Trans-2-pentene

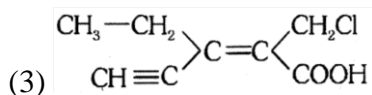
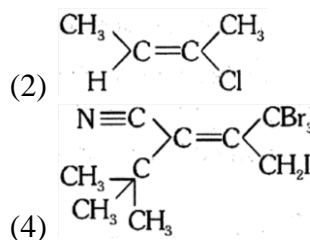
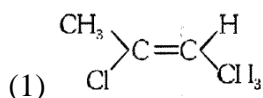


It does not show Geometrical isomers
So no cis-trans

(b) E-Z System :**E (Entgegen):** When high priority groups are at opposite side.**Z (Zusammen) :** When high priority groups are at same side.

HP-High priority and LP-Low priority

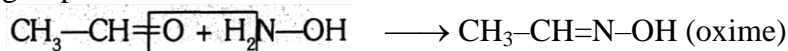
Priority Rules [CIP Sequence Rule) :**Rule I :** Priority is proportional to atomic number of atom which is directly attached to sp^2 carbon.**Rule II :** If rule-I is failed then consider the atomic number of next atom and so on.**Rule III :-** If multiple bond is present then consider them as :-**Rule IV :** If isotopes are present then consider atomic weight.**BEGINNER'S BOX-2****1.** Assign correct E, Z configuration to following molecules :-



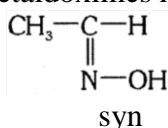
(4)

GEOMETRICAL ISOMERS IN OXIMES [>C=N-OH] :

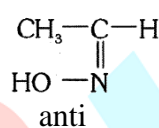
- Oximes show G.I. due to restricted rotation about double bond.
- Only those oximes show Geometrical isomerism in which sp^2 carbon have two different groups.



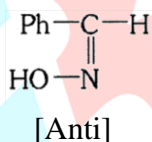
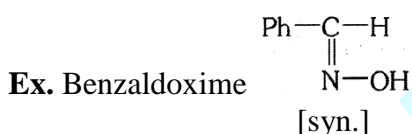
Ex. Acetaldoximes has two Geometrical isomers-



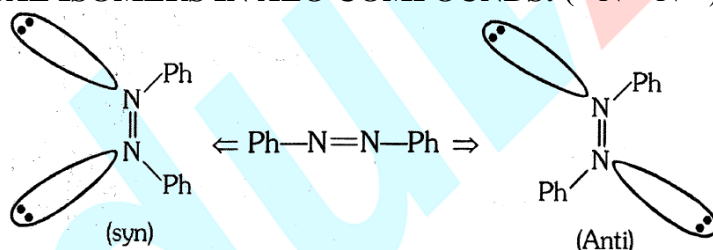
When H and OH are on the same side.



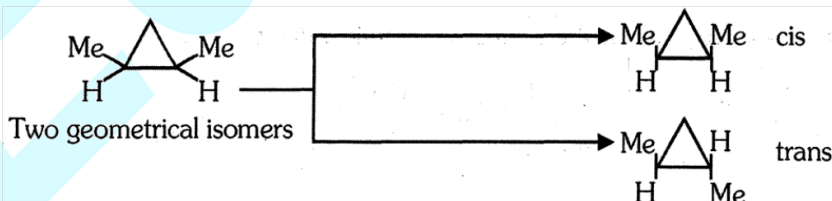
When H and OH are on the opposite side



GEOMETRICAL ISOMERS IN AZO COMPOUNDS: ($-\ddot{\text{N}}=\ddot{\text{N}}-$)



GEOMETRICAL ISOMERS IN CYCLOALKANES : Cycloalkanes show Geometrical isomerism due to restricted rotation about single bond. Only those cycle alkanes show Geometrical isomers in which atleast two different carbons have two different groups.



NUMBER OF GEOMETRICAL ISOMERS IN POLYENES :



- (a) If $\text{R}_1 \neq \text{R}_2$ then number of Geometrical isomers = 2^n
[n = number of double bonds which show G.I.]

Ex. $\text{CH}_3-\text{CH}=\text{CH}-\text{CH}=\text{CH}-\text{CH}=\text{CH}-\text{CH}_2\text{CH}_3$

As $n = 3$, number of Geometrical isomers $= 2^3 = 8$

(b) If $R_1 = R_2$ then number of Geometrical isomers $= 2^{n-1} + 2^{p-1}$

Where $p = \frac{n}{2}$ (when n is even) and $p = \frac{n+1}{2}$ (n is odd)

Ex. $\text{CH}_3\text{--CH=CH--CH=CH--CH=CH--CH}_3$ [$n = 3$]

Number of Geometrical isomers $= 2^2 + 2^1$
 $= 4 + 2 = 6$

BEGINNER'S BOX-3

1. Which of the following shows Geometrical isomerism :-

(a) $\text{CH}_3\text{--CH}_2\text{--CH=N--OH}$

(b) $\text{H}_2\text{C=N--OH}$

(c) $\text{CH}_3\text{--}\overset{\text{N--OH}}{\underset{\text{||}}{\text{C}}}\text{--CH}_3$

(d) $\text{CH}_3\text{--}\overset{\text{N--OH}}{\underset{\text{||}}{\text{C}}}\text{--CH}_2\text{CH}_3$

(1) a, c

(2) c, d

(c) a, d

(4) b, c

2. Which of the following show Geometrical isomerism:-

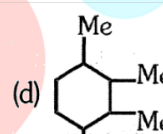
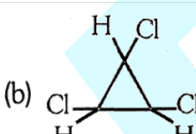
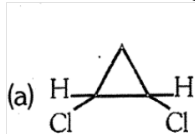
(1) 1, 1-Diphenyl-1-butene

(2) 1,1-Diphenyl-2-butene

(3) 2,3-Dimethyl-2-butene

(4) 3-Phenyl-1-butene

3. Which of the following show Geometrical isomerism :-



(1) a, b, d

(2) a, c, d

(3) a, b, c

(4) b, c, d

4. Calculate total number of geometrical isomers in the following compound

$\text{CH}_3\text{--CH=CH--CH=CH--CH=CH--C}_6\text{H}_5$

(1) 2

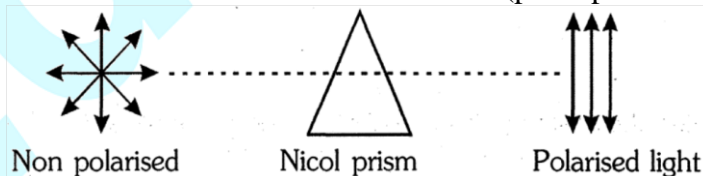
(2) 4

(3) 6

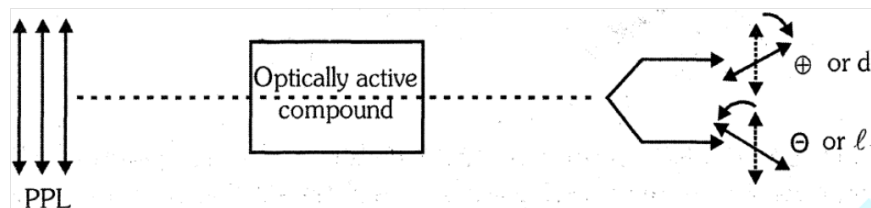
(4) 8

2.2.2 OPTICAL ISOMERISM :

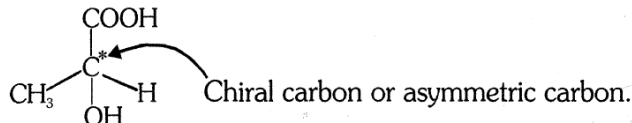
Optical isomers: Two or more than two compound have same molecular formula, same structural formula but different behaviour towards PPL (plane polarised light).



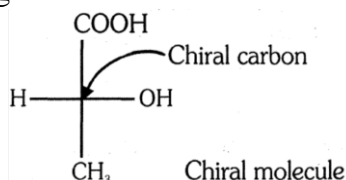
Optical activity : Tendency to rotate plane of PPL in a particular direction. If a compound rotates plane of PPL in clockwise direction then it will be dexterorotatory or d or $(+)$ and if a compound rotates plane of PPL in anticlockwise direction then it will be leavorotatory or λ or $(-)$.



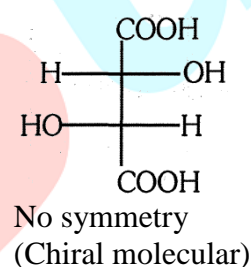
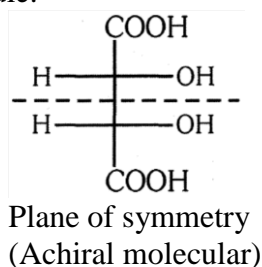
Chiral carbon : Carbon which is bonded to four different atoms or groups.



Chiral molecule : (i) A molecule having only one chiral centre then it will be always chiral. Except flipping



(ii) A molecule having atleast two chiral carbons and no symmetry then it will be chiral molecule.



Essential and sufficient condition for optical activity is :

"Molecule should be **chiral**"

or

"Molecule should be **unsymmetrical**"

or

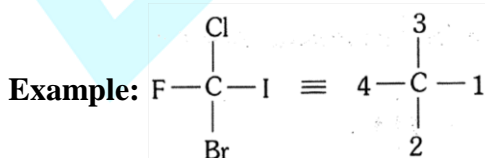
"**Nonsuperimposable** mirror images"

Absolute Configuration (R, S configuration) :

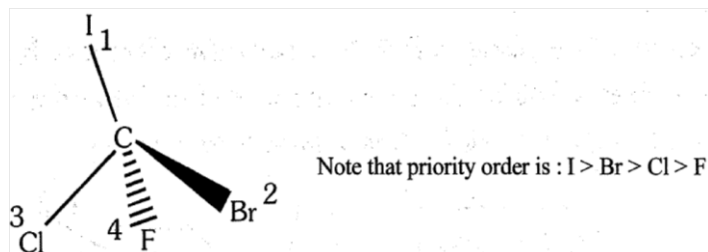
The actual three dimensional arrangement of groups in a molecule containing asymmetric carbon is termed as **absolute configuration**.

(R) (S) nomenclature is assigned as follows :

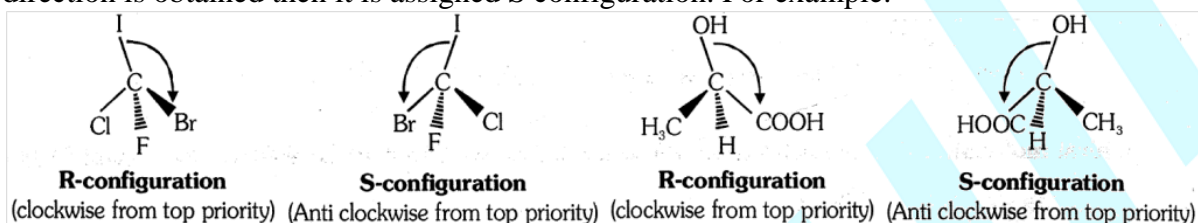
1. Each group attached to stereocentre is assigned a priority on the basis of CIP sequence rule.



2. After assigning priorities, the least priority group is written at remotest valency (going away).

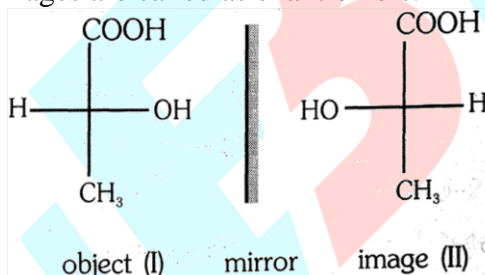


- ◆ Now the order from top priority to second priority and then to the third priority is determined. If it gives a clockwise direction then it is termed R configuration and if the anticlockwise direction is obtained then it is assigned S configuration. For example.



Enantiomers :

Stereoisomers which are mirror images to each other and not superimpose to each other. Nonsuperimposable mirror images are called as enantiomers.



I and II are nonsuperimposable mirror images, so I and II are enantiomers.

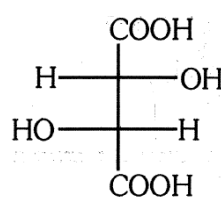
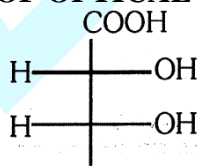
- Enantiomers have chiral structures.
- Enantiomers are optically active substance. They rotate the plane polarized light in opposite directions but to the equal extent.

Diastereomers : Stereoisomers which are not mirror images of each others.



I and II are not mirror images, so I and II are diastereomers.

EXAMPLES OF OPTICAL ISOMERISM

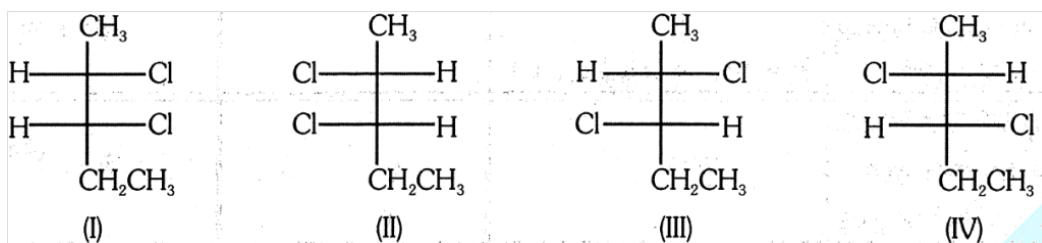


Example : (1)


(2)

(1) and (2) are diastereomers

Example:



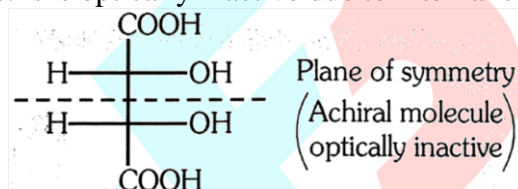
I, II = Enantiomers, III, IV = Enantiomers
 I, III = Diastereomers, II, IV = Diastereomers
 II, III = Diastereomers, I, IV = Diastereomers



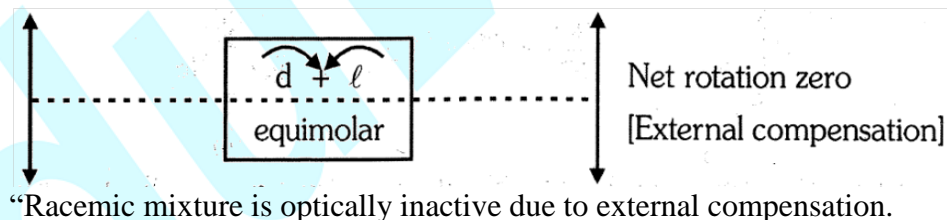
Example :

I and II are identical

Meso compounds : Compounds having atleast two chiral carbons and plane of symmetry is called meso compounds. It is optically inactive due to internal compensation.

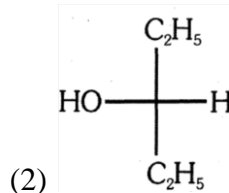
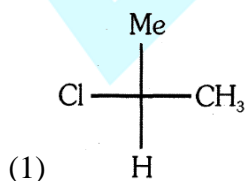


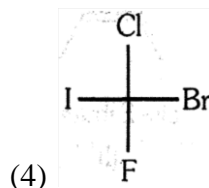
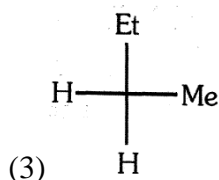
Racemic mixture : Equimolar mixture of d and λ enantiomers is called as racemic mixture. (d λ or \pm).



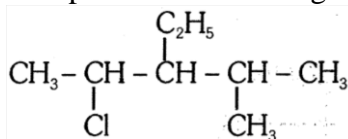
BEGINNER'S BOX-4

- Which of the following molecule is chiral :-
 (1) Isobutane (2) Neopentane
 (3) Sec. butylchloride (4) All
- Which of the following molecule has chiral carbon :-





3. How many chiral carbon atoms are present in following molecule :-



(1) 1

(2) 2

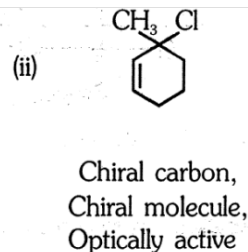
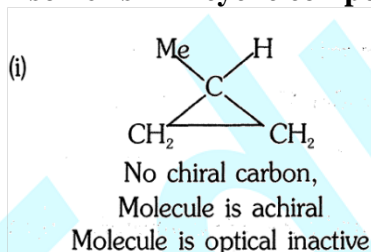
(3) 3

(4) 4

Number of Stereoisomers :-

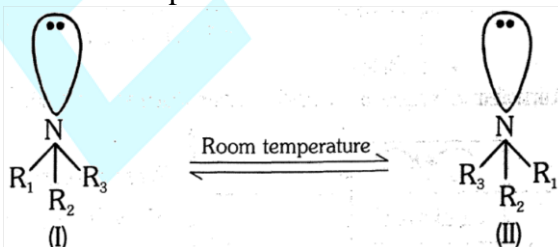
S.N.	Nature of compounds	No. of optically active isomers (a)	No. of meso compounds (m)	Total no. of Stereoisomer (a+m)
1.	Compounds having dissimilar ends	2^n N = No. of chiral centre	0	$(2^n + 0)$
2.	Compounds having similar ends with even chiral centres	2^{n-1}	$2^{\frac{n}{2}-1}$	$(2^{n-1} + 2^{\frac{n}{2}-1})$
3.	Compounds having similar ends with odd chiral centres	$2^{n-1} - 2^{\frac{n-1}{2}}$	$2^{\frac{n-1}{2}}$	2^{n-1}

Optical Isomerism in cyclic compounds :



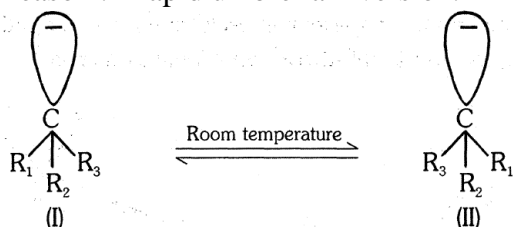
Special Point :

1. Chiral nitrogen containing/tertiary/open chain amine does not show optical isomerism.
Reason :- Rapid umbrella inversion.



Energy required for this interconversion is available at room temperature. So I and II are interconvertible.

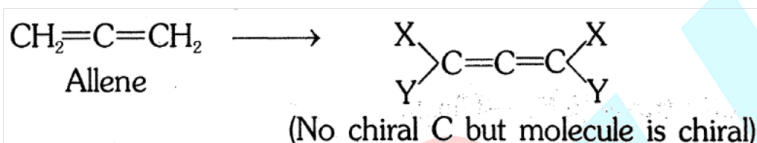
2. Chiral C containing carbanion does not show optical isomerism.
Reason :- Rapid umbrella inversion.



Energy required for this interconversion is available at room temperature. So I and II are interconvertible.

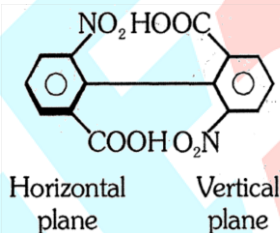
Note :- Only 2nd period elements show flipping.

3. Substituted Allenes do not have chiral carbons but molecule is chiral, so show optical isomerism.



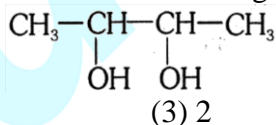
Only those substituted allenes will be optically active in which "each sp² C have different atoms or group".

4. Ortho substituted biphenyl compounds do not have any chiral carbon but due to chiral molecule, they are optically active.



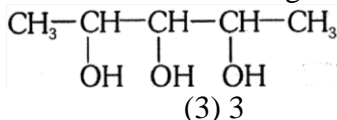
BEGNNIER'S BOX-5

1. Calculate total number of optical isomers in following compound :-



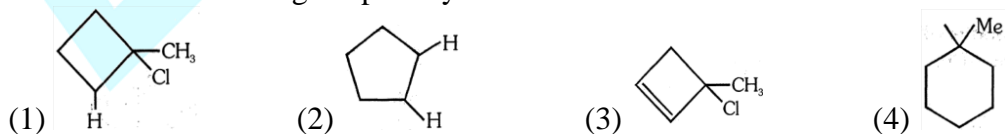
- (1) 4 (2) 3 (3) 2 (4) 1

2. Calculate total number of optical isomers in following compound :-

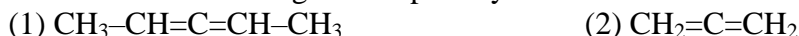


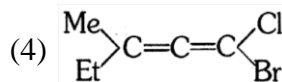
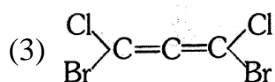
- (1) 2 (2) 4 (3) 3 (4) 8

3. Which of the following is optically active :-

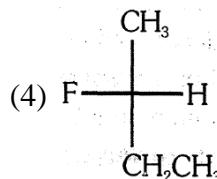
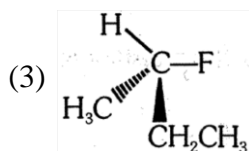
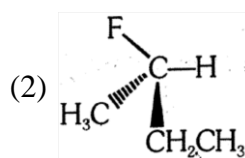
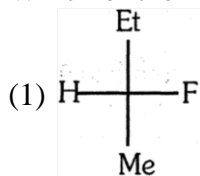


4. Which of the following is not optically active -



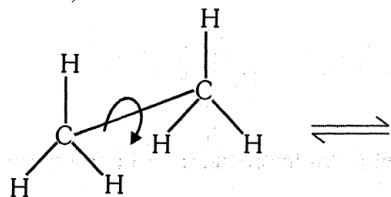


5. Which of the following has 'S' configuration :-

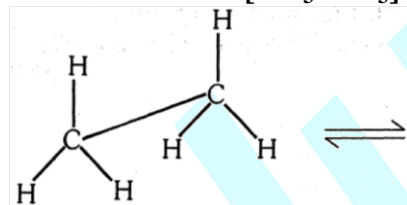


(B) Conformational Isomerism

The different arrangement of atoms in space that result from the free rotation around single bond, are called conformations. The phenomenon is called conformational isomerism



Conformation of ethane [$\text{CH}_3\text{--CH}_3$]

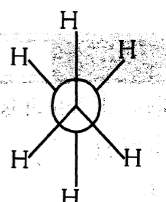


(Saw horse projection)



(III)

$\xrightleftharpoons{60^\circ}$



(IV)

(Newman projection)

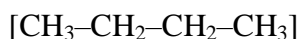
[Stability order : Staggered > Eclipsed]

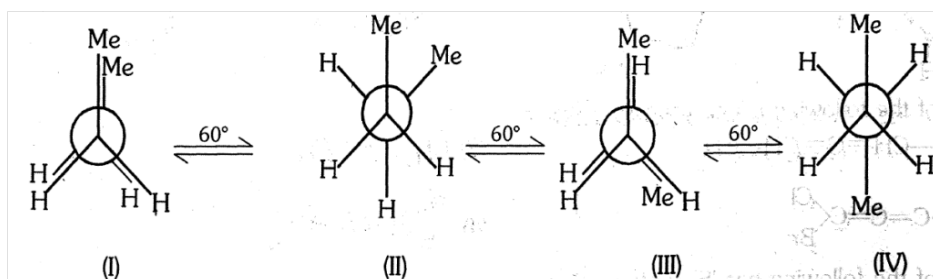
Dihedral Angle :

Dihedral angle in eclipsed form of ethane is 0° .

Dihedral angle in staggered form of ethane is 60° .

Conformation of Butane





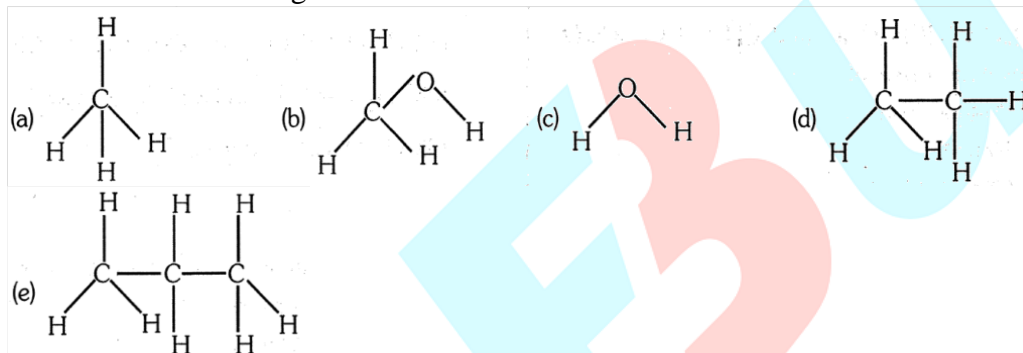
I (Fully eclipsed form) : In this form distance between 2 methyl groups is minimum so maximum repulsion or minimum stable.

IV (Anti or staggered) : In this form distance between 2 methyl groups is maximum so minimum repulsion or maximum stable.

Stability order : IV > II > III > I

BEGINNER'S BOX-6

1. Which of the following shows conformational isomerism.



(1) b, d, e

(2) a, b, c, e

(3) b, c, d

(4) c, d, e

2. Most stable conformation of butane is :-

(1) Partial eclipsed

(2) Full eclipsed

(3) Staggered

(4) Gauche

3. Which of the following is not a pair of isomers :

(1) Propyne and Cyclopropene

(2) Propyne and Propadiene

(3) Propene and Cyclopropene

(4) 1-Propanol and Methoxy ethane

4. What is dihedral angle in staggered form of ethane :-

(1) 30°

(2) 45°

(3) 75°

(4) 60°

ANSWER KEY

BEGINNER'S BOX-1

1. (1) 2. (3) 3. (3) 4. (1) 5. (1) 6. (2) 7. (4)
8. (3)

BEGINNER'S BOX-2

1. (Z) 2. (E) 3. (E) 4. (E)

BEGINNER'S BOX-3

1. (3) 2. (2) 3. (1) 4. (4)

BEGINNER'S BOX-4

1. (3) 2. (4) 3. (2)

BEGINNER'S BOX-5

1. (2) 2. (2) 3. (3) 4. (2) 5. (3)

BEGINNER'S BOX-6

1. (1) 2. (3) 3. (3) 4. (4)