

## MISSING NUMBER

### Directions

Before this chapter we should read chapter "Number Series". About Chapter:- In this chapter some specific patterns are made by some numbers.

The logic is set by "Addition", "Multiplication", "Subtraction", "Divide", "Square" and "Cube" of Numbers.

↳ These patterns are set in Different Figure like: Matrix, Circle, Triangle, Butterfly

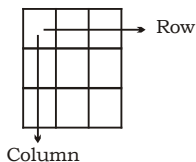
The questions are of two types :

- I. When Pattern set in single figure
- II When Pattern set in two or more than two figures.

### TYPE - I

Here we are giving some examples for type-I

\ In Matrix ↳



In this type of Figure pattern is either set in Row or in Column

### Ex.

1. Find Missing number in following Matrix?

6	15	20
8	4	5
3	5	20
51	65	?

- (a) 100                      (b) 120  
(c) 90                        (d) 80

Sol. (b) In this matrix pattern is made by "Column Numbers"

In 1st Column ↳  $(6 \times 8) + 3 = 51$

In 2nd Column ↳  $(15 \times 4) + 5 = 65$

In 3rd Column ↳  $(20 \times 5) + 20$

= 120

Ex.2 Find Missing Number in following Matrix?

18	11	19
12	13	16
36	4	?

- (a) 36                      (b) 9  
(c) 35                      (d) 7

Sol. (b) In this Matrix Operation is made by "Column Number"

In 1st Column ↳  $(18-12)^2$  ↳ 36

In 2nd Column ↳  $(11-13)^2$  ↳ 4

In 3rd Column ↳  $(19-16)^2$  ↳ 9

Ex.3 Find Missing number?

3	4	9	16
5	6	25	36
7	8	?	64

- (a) 15                      (b) 18  
(c) 16                      (d) 49

Sol. (d) In this chapter operation is made by Row Numbers

In 1st Row ↳  $3 + 4 + 9 = 16$

In 2nd Row ↳  $5 + 6 + 25 = 36$

In 3rd Row ↳  $7 + 8 + \mathbf{49} = 64$

Ex.4 Find the missing number?

268	(29)	210
218	?	166

- (a) 42                      (b) 25  
(c) 26                      (d) 29

Sol. (c) Row Pattern

In 1st Row ↳  $\frac{(268 - 210)}{2} = 29$

In 2nd Row ↳  $\frac{(218 - 166)}{2}$

= 26

Ex.5 Find missing number?

13	9	24
11	?	6
16	20	10

- (a) 11                      (b) 20  
(c) 19                      (d) 14

Sol. (a) Column pattern

In 1st Column ↳  $13 + 11 + 16 = 40$

In 3rd Column ↳  $24 + 6 + 10 = 40$

Similarly

In 2nd Column ↳  $9 + \mathbf{11} + 20 = 40$

Ex.6 Find the missing number?

85	20	5
126	24	6
175	?	7

- (a) 22                      (b) 24  
(c) 26                      (d) 28

Sol. (d) Row Pattern

In 1st Row ↳  $(20 \times 5) - (20 - 5) = 85$

In 2nd Row ↳  $(24 \times 6) - (24 - 6) = 126$

In 3rd Row ↳  $(\mathbf{28} \times 7) - (\mathbf{28} - 7) = 175$

Ex.7

4	5	1	2
5	6	7	6
6	9	6	4
45	92	84	?

- (a) 56                      (b) 48  
(c) 52                      (d) 45

Sol. (b) Column Pattern

In 1st Column ↳  $6^2 + 5^2 - 4^2 = 45$

In 2nd Column ↳  $9^2 + 6^2 - 5^2 = 92$

In 3rd Column ↳  $6^2 + 7^2 - 1^2 = 84$

In 4th Column ↳  $4^2 + 6^2 - 2^2$  ↳ **48**

Ex.8

4	6	10
2	1	3
5	8	?

- (a) 14                      (b) 15  
(c) 17                      (d) 16

Sol. (c) In First Row  $\downarrow 4^2 - 6 = 10$   
 In 2nd Row  $\downarrow 2^2 - 1 = 3$   
 In 3rd Row  $\downarrow 5^2 - 8 = 17$

Ex.9

5	8	14
9	6	21
7	2	?

- (a) 14 (b) 15  
 (c) 13 (d) 16

Sol. (b) In First Row  $\downarrow (5 \times 2)$

$$+ \frac{8}{2} = 14$$

In 2nd Row  $\downarrow (9 \times 2) + \frac{6}{2} = 21$

In 3rd Row  $\downarrow (7 \times 2) + \frac{2}{2} = 15$

Ex.10

5	9	15
16	29	?
49	89	147

- (a) 48 (b) 45  
 (c) 54 (d) 51

Sol. (a) In First column  $\downarrow$

$$(5 \times 3) + 1 = 16, (16 \times 3) + 1 = 49$$

In 2nd Column  $\downarrow$   
 $(9 \times 3) + 2 = 29, (29 \times 3) + 2 = 89$

In 3rd Column  $\downarrow$   
 $(15 \times 3) + 3 = 48, (48 \times 3) + 3 = 147$

Ex.11 Find Missing Number

8	13	10
7	12	9
10	15	?

- (a) 8 (b) 12  
 (c) 5 (d) 19

Sol. (b) In First Row

$$\downarrow 8 \quad 13^{+2} \quad 10$$

+3

In 2nd Row  $\downarrow 7 \quad 12^{+2} \quad 9$

+3

In 3rd Row  $\downarrow 10 \quad 15^{+2} \quad 12$

+3

Ex.12

5	6	7	8
10	18	21	24
7	9	10	?

- (a) 11 (b) 15

- (c) 13 (d) 20

Sol. (a) In 1st Column  $\downarrow \frac{10}{5} + 5 = 7$

In 2nd Column  $\downarrow \frac{18}{6} + 6 = 9$

In 3rd Column  $\downarrow \frac{21}{7} + 7 = 10$

In 4th Column =  $\frac{24}{8} + 8 = 11$

Ex.13 Find Missing number.

3	9	18
6	36	?
2	4	12

- (a) 12 (b) 6  
 (c) 612 (d) 81

Sol. (b) middle no. is multiplication of diagonally opposite no.

$$3 \times 12 = 36$$

$$18 \times 2 = 36$$

$$9 \times 4 = 36$$

$$6 \times 6 = 36$$

Ex.14 Find Missing number?

11	6	8
17	12	?
25	34	19
19	28	11

- (a) 16 (b) 15  
 (c) 13 (d) 9

Sol. (a) In 1st Column  $\downarrow 11 + 25 = 17 + 19 = 36$

In 2nd Column  $\downarrow 6 + 34 = 12 + 28 = 40$

In 3rd Column  $\downarrow 8 + 19 = 16 + 11 = 27$

Ex.15 Find Missing number

9	4	20
8	5	15
7	6	?

- (a) 4 (b) 6  
 (c) 3 (d) 2

Sol. (b) In 1st Row  $(9 - 4) \times 4 = 20$

In 2nd Row  $(8 - 5) \times 5 = 15$   
 In 3rd  $(7 - 6) \times 6 = 6$

Ex.16 Find Missing Term?

14	9	12	20
4	9	8	10
12	13	7	20
3	3	11	?
20	42	19	40

- (a) 2 (b) 8  
 (c) 12 (d) 4

Sol. (b) In First Column  $\downarrow (14 \times 4) - (12 \times 3) = 20$

In 2nd Column  $\downarrow (9 \times 9) - (13 \times 3) = 42$

In 3rd Column  $\downarrow (12 \times 8) - (7 \times 11) = 19$

In 4th Column  $\downarrow (20 \times 10) - (20 \times 8) = 40$

Ex.17 Find Missing Term?

0	-1	-2
1	0	-1
2	?	0

- (a) 0 (b) -2  
 (c) -1 (d) 1

Sol. (d) In First column  $\downarrow 0 + 1 = 1$   
 $1 + 1 = 2$

In 2nd Column  $\downarrow -1 + 1 = 0$   
 $0 + 1 = 1$

In 3rd Column  $\downarrow -2 + 1 = -1$   
 $-1 + 1 = 0$

Ex.18 Find Missing Term?

23	529	1024
21	441	144
19	361	?

- (a) 1441 (b) 3529  
 (c) 9361 (d) 8281

Sol. (d) In 1st Row

$(23)^2 = 529$  On changing places of 23

$((23)^2 = 529, 23 (32)^2 = 1024$  It becomes 32, Then

$(32 (32)^2 = 1024)$

In 2nd Row  $\downarrow$

$(21)^2 = 441$  On Changing places of 21

$(12)^2 = 144$  it becomes

12, Then

In 3rd Row  $\downarrow$

$(19)^2 = 361$  on Changing places of 19

$(91)^2 = \mathbf{8281}$  it becomes 91, then

Ex.19

0	2	4
2	6	3
3	?	5
35	225	216

- (a) 0 (b) 2  
(c) 1 (d) 4

Sol. (c) In 1st Column  $\downarrow$   $(0)^3 + (2)^3 + (3)^3 = 35$

In 2nd Column  $\downarrow$   $(2)^3 + (6)^3 + (1)^3 = 225$

In 3rd Column  $\downarrow$   $(4)^3 + (3)^3 + (5)^3 = 216$

**Ans = 1**

Ex.20 Find the Missing Term.

67	91	45
78	90	36
?	81	27

- (a) 95 (b) 98  
(c) 105 (d) 111

Sol. (c) In Third Column  $\downarrow$   $4^{\wedge}5 = 9 \times 4 = 36$

$3^{\wedge}6 = 9 \times 3 = 27$

In 2nd Column  $\downarrow$   $9^{\wedge}1 = 10 \times 9 = 90$

$9^{\wedge}0 = 9 \times 9 = 81$

In 1st Column  $\downarrow$   $6^{\wedge}7 = 13 \times 6 = 78$

$7^{\wedge}8 = 15 \times 7 = \mathbf{105}$

Ex.21 Find Missing Term.

4	5	6
2	3	7
1	8	3
21	98	?

- (a) 94 (b) 76  
(c) 73 (d) 16

Sol. (a) In 1st Column  $\downarrow$   $4^2 + 2^2 + 1^2 = 21$

In 2nd Column  $\downarrow$   $5^2 + 3^2 + 8^2 = 98$

In 3rd Column  $\downarrow$   $6^2 + 7^2 +$

$3^2 = \mathbf{94}$

Ex.22 Find Missing Term

3	8	10	2	?	1
6	56	90	2	20	0

- (a) 5 (b) 0  
(c) 7 (d) 3

Sol. (a) In all Columns

$\downarrow$   $3^2 - 3 = 6$

$8^2 - 8 = 56$

$10^2 - 10$

$= 90$

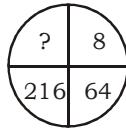
$2^2 - 2 = 2$

$5^2 - 5 = 20$

$1^2 - 1 = 0$

**In Circle**  $\downarrow$  In Circle Pattern can be of "Number Series", "Logic in opposite sector of circle"

Ex.23 Find missing term in circle?

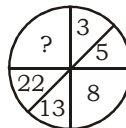


- (a) 1 (b) 512  
(c) 9 (d) 8

Sol. (b) In this circle pattern is made by series of cube of even numbers

$2^3 = 8, 4^3 = 64, 6^3 = 216, \mathbf{(8)^3 = 512}$

Ex.24 Find Missing Term.



- (a) 1 (b) 26  
(c) 39 (d) 45

Sol. (c) In this circle the following series is set

$\overset{\times 2 - 1}{\underbrace{3 \quad 5}} \quad \overset{\times 2 - 2}{\underbrace{5 \quad 8}} \quad \overset{\times 2 - 3}{\underbrace{8 \quad 13}} \quad \overset{\times 2 - 4}{\underbrace{13 \quad 22}} \quad \overset{\times 2 - 5}{\underbrace{22 \quad \mathbf{39}}}$

Ex.25 Find missing term




- (a) 10 (b) 15  
(c) 13 (d) 12

Sol. (c) In this circle the series is set clock wise from 1.

$1 + 2 = 3, 2 + 3 = 5, 3 + 5 = 8, 5$

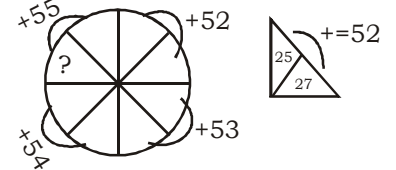
$+ 8 = \mathbf{13}$

Ex.26



- (a) 35 (b) 32  
(c) 22 (d) 19

Sol. (d) In this circle the sum of four different sectors are in increasing order



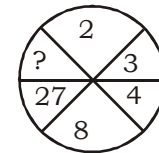
$25 + 27 = 52$

$23 + 30 = 53$

$21 + 33 = 54$

$36 + \mathbf{19} = 55$

Ex.27 Find the missing term:



- (a) 49 (b) 45  
(c) 64 (d) 56

Sol. (c) In this circle the pattern make by the opposite sectors.

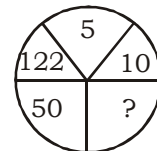


$3^3 = 27$

$2^3 = 8$

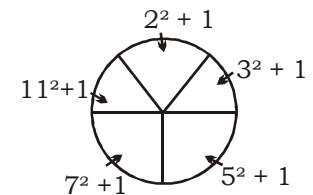
$4^3 = \mathbf{64}$

Ex.28 Find Missing Term?



- (a) 25 (b) 26  
(c) 23 (d) 27

Sol. (b) In this figure following series is set?



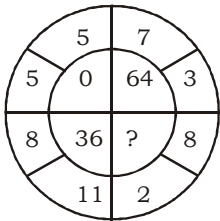
Square of prime no. than Add one.

$$2^2 + 1 = 5 \quad 7^2 + 1 = 50$$

$$3^2 + 1 = 10 \quad 11^2 + 1 = 122$$

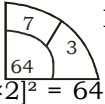
$$5^2 + 1 = \mathbf{26}$$

Ex.29



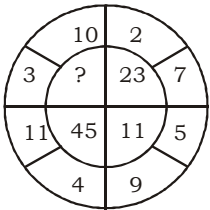
- (a) 0 (b) 125  
(c) 100 (d) 144

Sol. (d) In this sector  $[(7-3) \times 2]^2 = 64$



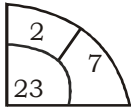
Same in other  $[(11-8) \times 2]^2 = 36$   
 $[(5-5) \times 2]^2 = 0$   
 $[(8-2) \times 2]^2 = \mathbf{144}$

Ex.30 Find Missing Term?



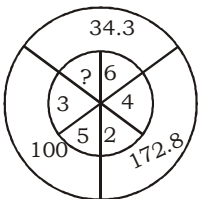
- (a) 46 (b) 34  
(c) 91 (d) 21

Sol. (a)



In this sector  $(7-2)^2 - 2 = 23$   
 Same in other sector =  $(9-5)^2 - 5 = 11$   
 $(11-4)^2 - 4 = 45$   
 $(10-3)^2 - 3 = \mathbf{46}$

Ex.31 Find Missing term?



- (a) 8 (b) 9  
(c) 36 (d) 11

Sol. (b) In this figure

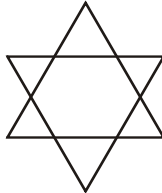


$$\frac{(5+2)^3}{10} = 34.3$$

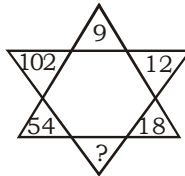
same in other  $\frac{(6+4)^3}{10} = 100$

$$\frac{(3+9)^3}{10} = 172.8$$

**In Triangle** → in this type of figure pattern is made by series, opposite sector etc.

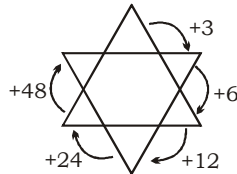


Ex.32 Find Missing Term



- (a) 40 (b) 48  
(c) 30 (d) 24

Sol. (c) In this figure following series is set



$$9 + 3 = 12$$

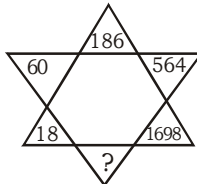
$$12 + 6 = 18$$

$$18 + 12 = \mathbf{30}$$

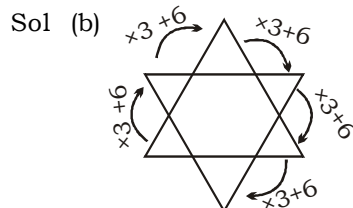
$$30 + 24 = 54$$

$$54 + 48 = 102$$

Ex.33



- (a) 5052 (b) 5100  
(c) 5094 (d) 4860



$$18 \times 3 + 6 = 60$$

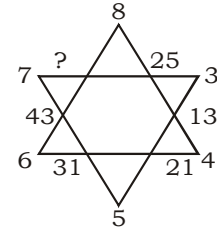
$$60 \times 3 + 6 = 186$$

$$186 \times 3 + 6 = 564$$

$$564 \times 3 + 6 = 1698$$

$$1698 \times 3 + 6 = \mathbf{5100}$$

Ex.34



- (a) 56 (b) 57  
(c) 58 (d) 59

Sol. (b)  $(8 \times 3) + 1 = 25$   $(5 \times 6) + 1 = 31$

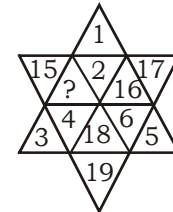
$$(3 \times 4) + 1 = 13$$

$$(6 \times 7) + 1 = 43$$

$$(4 \times 5) + 1 = 21$$

$$(7 \times 8) + 1 = \mathbf{57}$$

Ex.35



- (a) 13 (b) 14  
(c) 20 (d) 21

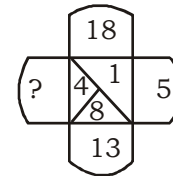
Sol. (b)  $1 + 17 = 2 + 16$   $19 + 3 = 18 + 4$

$$17 + 5 = 16 + 6$$

$$3 + 15 = 4 + \mathbf{14}$$

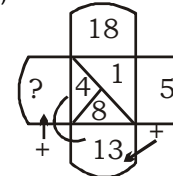
$$5 + 19 = 6 + 18$$

Ex.36



- (a) 10 (b) 17  
(c) 11 (d) 13

Sol. (b)



$$8 + 5 = 13$$

$$4 + 13 = \mathbf{17}$$

$$\mathbf{17} + 1 = 18$$

Ex.37

A	22	?	14	U
26	E	?	O	10

(a)  $\frac{L}{14}$                       (b)  $\frac{I}{18}$

(c)  $\frac{I}{20}$                       (d)  $\frac{L}{20}$

Sol. (b)

A		I		U
	E		O	

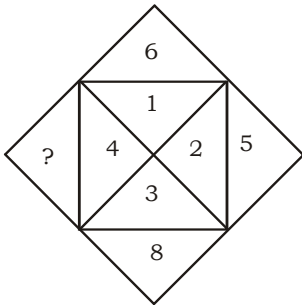
Vowels

	22		14	
26		18		10

Series

Ans:-  $\frac{I}{18}$

Ex.38



- (a) 10                      (b) 11  
(c) 12                      (d) 14

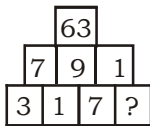
Sol. (b)  $4 + (1 \times 2) = 6$

$1 + (2 \times 2) = 5$

$2 + (3 \times 2) = 8$

$3 + (4 \times 2) = 11$

Ex.39



- (a) 3                      (b) 9  
(c) 5                      (d) 2

Sol. (a) In last Row  $\vdash 3 \times 1 \times 7 \times 3 = 63$

In 2nd Row  $\vdash 7 \times 9 \times 1 = 63$

Ex.40

CK	16	9	JR
OS	24	19	TX
KM	?	?	PV

(a) 56,84,                      (b) 21,14

(c) 84,56                      (d) 14,21

Sol. (b) In First Row

$\frac{J+R}{2} + 2 = \frac{10+18}{2} + 2 = 16$

$\frac{C+K}{2} + 2 = \frac{3+11}{2} + 2 = 9$

In 2nd Row

$\frac{O+S}{2} + 2 = \frac{15+19}{2} + 2 = 19$

$\frac{T+X}{2} + 2 = \frac{20+24}{2} + 2 = 24$

In last Row

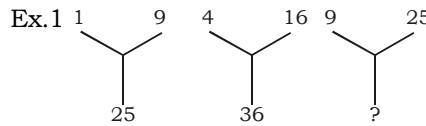
$\frac{K+M}{2} + 2 = \frac{11+13}{2} + 2 = 14$

$\frac{P+V}{2} + 2 = \frac{16+22}{2} + 2 = 21$

Hence Answer = (21,14)

**TYPE-2**

When No. of Figure are two or more then two.



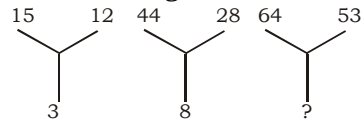
- (a) 47                      (b) 49  
(c) 50                      (d) 57

Sol. (b) In First figure =  $1^2, 3^2, 5^2$   
In 2nd Figure =  $2^2, 4^2, 6^2$

Similar

In last Figure =  $3^2, 5^2, 7^2$

Ex.2 Find Missing Term?



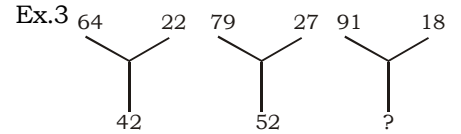
- (a) 30                      (b) 13  
(c) 70                      (d) 118

Sol. (b) In 1st figure =  $\frac{15+12}{9} = 3$

In 2nd Figure =  $\frac{44+28}{9} = 8$

Similarly

In last figure =  $\frac{64+53}{9} = 13$



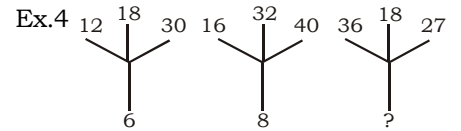
- (a) 62                      (b) 37  
(c) 73                      (d) 19

Sol. (c) In First Figure =  $42 + 22 = 64$

In 2nd Figure =  $52 + 27 = 79$

Similarly

In 3rd Figure =  $18 + 73 = 91$

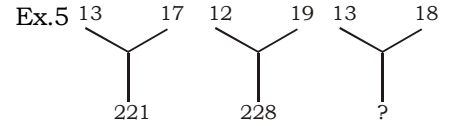


- (a) 6                      (b) 9  
(c) 12                      (d) 18

Sol. (b) In first Figure 12,18,30 are multiple of 6

In 2nd Figure 16,32,40 are multiple of 8

In last figure 36,18,27 are multiple of 9

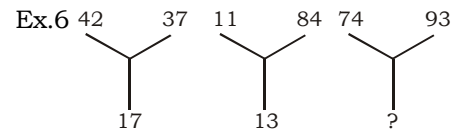


- (a) 31                      (b) 229  
(c) 234                      (d) 312

Sol. (c) In first figure =  $13 \times 17 = 221$

In 2nd figure =  $12 \times 19 = 228$

In last figure =  $13 \times 18 = 234$



- (a) 46                      (b) 42  
(c) 44                      (d) 40

Sol. (a) In first figure  $\frac{42 \times 37}{9} = 17$

$(2 \times 3) + (4 + 7) = 17$

In 2nd Figure  $\frac{11 \times 84}{9} = 13$

$(1 \times 8) + (1 + 4) = 13$

On last figure  $\frac{74 \times 93}{9} = 77$

$$(4 \times 9) + (7 + 3) = 46$$

Ex.7  $5 \begin{array}{|c|} \hline 3 \\ \hline 12 \\ \hline 2 \\ \hline \end{array} 4 \begin{array}{|c|} \hline 6 \\ \hline 18 \\ \hline 3 \\ \hline \end{array} 5 \begin{array}{|c|} \hline 2 \\ \hline ? \\ \hline 9 \\ \hline \end{array} 2$

- (a) 15 (b) 18  
(c) 17 (d) 16

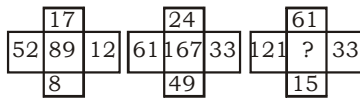
Sol. (b) In first Figure

$$= \frac{3' 4' 2' 5}{10} = 12$$

$$\text{In 2nd figure} = \frac{6' 5' 3' 2}{10} = 18$$

$$\text{In last figure} = \frac{5' 9' 2' 2}{10} = 18$$

Ex.8



- (a) 240 (b) 230  
(c) 232 (d) 251

Sol. (b) In First Figure  $17 + 12 + 8 + 52 = 89$

In 2nd Figure  $24 + 33 + 61 + 49 = 167$

In 3rd figure  $61 + 33 + 121 + 15 = 230$

Ex.9  $8 \begin{array}{|c|} \hline 6 \\ \hline 40 \\ \hline 4 \\ \hline \end{array} 2 \quad 5 \begin{array}{|c|} \hline 6 \\ \hline 32 \\ \hline 3 \\ \hline \end{array} 2 \quad 5 \begin{array}{|c|} \hline 4 \\ \hline ? \\ \hline 9 \\ \hline \end{array} 4$

- (a) 32 (b) 44  
(c) 38 (d) 50

Sol. (b) In 1st figure  $(6 + 2 + 4 + 8) \times 2 = 40$

In 2nd figure  $(6 + 2 + 3 + 5) \times 2 = 32$

In 3rd figure  $(5 + 4 + 4 + 9) \times 2 = 44$

Ex.10  $9 \begin{array}{|c|} \hline 14 \\ \hline 5 \\ \hline 4 \\ \hline \end{array} 19 \quad 13 \begin{array}{|c|} \hline ? \\ \hline 7 \\ \hline 6 \\ \hline \end{array} 27 \quad 17 \begin{array}{|c|} \hline 26 \\ \hline 9 \\ \hline 8 \\ \hline \end{array} 35$

- (a) 18 (b) 20  
(c) 22 (d) 24

Sol. (b) In Figure

$$= \frac{(9+19) - (14+4)}{2} = 5$$

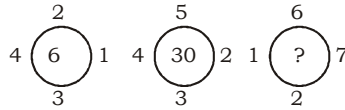
In 2nd figure

$$= \frac{(13+27) - (6+20)}{2} = 7$$

In 3rd figure

$$= \frac{(35+17) - (26+8)}{2} = 9$$

Ex.11



- (a) 21 (b) 22  
(c) 25 (d) 27

Sol. (a) In first figure

$$\Rightarrow \frac{4 \times 3 \times 2 \times 1}{4} = 6$$

In 2nd figure

$$\Rightarrow \frac{4 \times 5 \times 2 \times 3}{4} = 30$$

In 3rd figure

$$\Rightarrow \frac{1 \times 6 \times 7 \times 2}{4} = 21$$

Ex.12 : "100  $\begin{array}{|c|} \hline 25 \\ \hline 6 \\ \hline 25 \\ \hline \end{array}$  100  $\begin{array}{|c|} \hline 25 \\ \hline 5 \\ \hline 36 \\ \hline \end{array}$  81  $\begin{array}{|c|} \hline 25 \\ \hline 4 \\ \hline 25 \\ \hline \end{array}$  25  $\begin{array}{|c|} \hline 49 \\ \hline 36 \\ \hline 25 \\ \hline \end{array}$  9

- (a) 2 (b) 3  
(c) 4 (d) 5

Sol. In 1st figure

$$0 \frac{\sqrt{25} + \sqrt{100} + \sqrt{25} + \sqrt{100}}{5} = 6$$

In 2nd figure =

$$\frac{\sqrt{25} + \sqrt{81} + \sqrt{36} + \sqrt{25}}{5} = 5$$

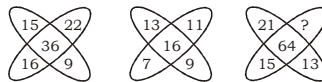
In 3rd figure

$$\frac{\sqrt{25} + \sqrt{25} + \sqrt{25} + \sqrt{25}}{5} = 4$$

In 4th figure =

$$\frac{\sqrt{49} + \sqrt{9} + \sqrt{16} + \sqrt{36}}{5} = 4$$

Ex.13



- (a) 23 (b) 19  
(c) 20 (d) 22

Sol. (a) In 1st figure =  $(22 - 16)$

$$\times (15 - 9) = 36$$

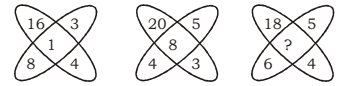
In 2nd figure =  $(11 - 7)$

$$\times (13 - 9) = 16$$

In 3rd figure =  $(23 - 15)$

$$\times (21 - 13) = 64$$

Ex.14



- (a) 3 (b) 10  
(c) 15 (d) 60

Sol. (a) In 1st figure =  $1 + 3 + 4$

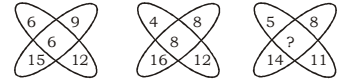
$$+ 8 = 16$$

In 2nd figure =  $3 + 5 + 8$

$$+ 4 = 20$$

In 3rd figure =  $6 + 4 + 5 + 3 = 18$

Ex.15



- (a) 12 (b) 10  
(c) 8 (d) 6

Sol. (d) In 1st figure =  $(12 - 6)$

$$= (15 - 9) = 6$$

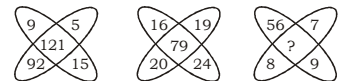
In 2nd figure =  $(12 - 4)$

$$= (16 - 8) = 8$$

In 3rd figure =  $(11 - 5)$

$$= (14 - 8) = 6$$

Ex.16



- (a) 38 (b) 80  
(c) 89 (d) 18

Sol. (b) In 1st Figure =  $9 + 5 + 15$

$$+ 92 = 121$$

In 2nd Figure =  $16 + 19$

$$+ 20 + 24 = 79$$

In 3rd Figure =  $7 + 8 + 9$

$$+ 56 = 80$$

Ex.17



- (a) 35 (b) 37  
(c) 45 (d) 73

Sol. (d) In first Figure =  $(5 \times 6)$

$$+ (3 \times 3) = 39$$

Change Place = 93

In 2nd figure =  $(7 \times 5)$

$$+ (4 \times 4) = 51$$

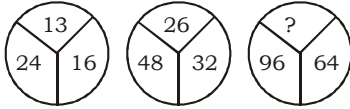
Change Place = 15

In 3rd Figure =  $(5 \times 5)$

$$+ (4 \times 3) = 37$$

Change Place = 73

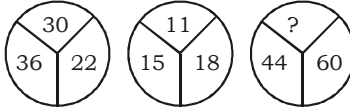
Ex.18



- (a) 160 (b) 25  
(c) 32 (d) 52

Sol. (d)  $13 \times 2 = 26$ ,  $26 \times 2 = 52$   
 $24 \times 2 = 48$ ,  $48 \times 2 = 96$   
 $16 \times 2 = 32$ ,  $32 \times 2 = 64$

Ex.19



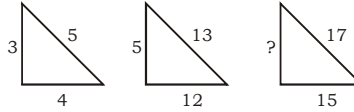
- (a) 45 (b) 54  
(c) 72 (d) 90

Sol. (c) In first figure =  $\frac{30+36}{3}$   
 $=22$

In 2nd figure =  $\frac{15+18}{3} = 11$

In 3rd figure =  $\frac{60+72}{3} = 44$

Ex.20



- (a) 2 (b) 8  
(c) 64 (d) 6

Sol. (b) In 1st Figure  $\sqrt{3^2+4^2} = 5$

In 2nd Figure  $\sqrt{5^2+12^2}$   
 $= 13$

In 3rd Figure  $\sqrt{8^2+15^2}$   
 $= 17$

Ex.21

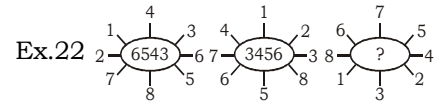
- (a) 11 (b) 10  
(c) 15 (d) 20

Sol. (a) In 1st Figure =  $7 + 9 - 6$

= 10

In 2nd Figure =  $5 + 8 - 3 = 10$

In 3rd Figure =  $9 + 6 - 4 = 11$



- (a) 6543 (b) 5634  
(c) 5364 (d) 3564

Sol. (c) In first figure =

$$\frac{4+8}{2} - \frac{7+3}{2} = \frac{2+6}{2} = \frac{1+5}{2} = 6543$$

6543

In 2nd figure=

$$\frac{5+1}{2} - \frac{6+2}{2} = \frac{7+3}{2} = \frac{4+8}{2} = 3456$$

3456

In last figure

$$= \frac{3+7}{2} - \frac{1+5}{2} = \frac{8+4}{2} = \frac{6+2}{2} = 5364$$

5364





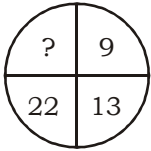
# EXERCISE

## TYPE-I

### Directions

Find the missing number from the given responses in each of the following questions.

1.



- (a) 40 (b) 38  
(c) 39 (d) 44

2.

4 9 2  
3 5 7  
8 1 ?

- (a) 9 (b) 6  
(c) 15 (d) 14

3.

In the question given below the number given at the top follow a certain specific pattern. Study out the pattern and find out the missing number.

9	4	20
8	5	12
7	6	?

- (a) 2 (b) 4  
(c) 6 (d) 9

4.

5 4 9  
6 3 ?  
7 2 4  
65 20 45

- (a) 4 (b) 2  
(c) 3 (d) 1

5.

9 6 8  
5 8 4  
7 4 ?  
11 2 7

- (a) 4 (b) 7  
(c) 3 (d) 6

6.

4 12 11 5  
6 7 10 3  
8 9 10 7  
7 5 ? 4

- (a) 12 (b) 14  
(c) 13 (d) 8

7.

6 18 15  
3 2 5  
4 3 ?  
8 27 9

- (a) 2 (b) 4  
(c) 3 (d) 5

8.

2 12 ?  
50 300 550  
10 60 110  
124 744 1364

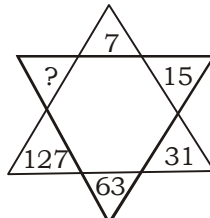
- (a) 22 (b) 33  
(c) 44 (d) 55

9.

9 3 7  
12 2 9  
13 5 ?  
1404 30 504

- (a) 5 (b) 8  
(c) 15 (d) 56

10.



- (a) 190 (b) 255  
(c) 221 (d) 536

11.

7 21 15  
49 441 225  
98 882 450  
140 1302 ?

- (a) 6750 (b) 690  
(c) 1380 (d) 660

12.

11 6 8  
17 12 ?  
25 34 19  
19 28 11

- (a) 13 (b) 15  
(c) 16 (d) 9

13.

25	49	81
5	7	?
15	13	11
20	20	20

- (a) 9 (b) 3  
(c) 61 (d) 31

14.

The given equations follow the same rule. Find the missing number according to it.

836 (316) 112  
213 ( ? ) 420

- (a) 368 (b) 220  
(c) 211 (d) 468

15.

5	20	6	9
4	8	15	3
9	25	7	9
22	7	8	?

- (a) 7 (b) 8

- (c) 9 (d) 10

16. 341 (16) 521  
613 (25) 816  
452 (?) 326

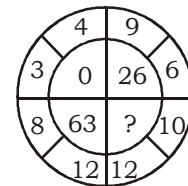
- (a) 27 (b) 22  
(c) 30 (d) 41

17. Find the missing number from the given responses:

4	9	17	6
20	5	8	9
7	23	9	9
?	9	4	19

- (a) 7 (b) 9  
(c) 8 (d) 6

18.



- (a) 12 (b) 7  
(c) 16 (d) 14

19.

1 3 7  
2 4 4  
4 5 9  
3 2 3  
50 70 ?

- (a) 23 (b) 115  
(c) 118 (d) 220

20.

7	3	2
4	9	6
2	1	5
69	91	?

- (a) 58 (b) 51  
(c) 65 (d) 64

21.

169	64	81	30
625	?	49	50
1296	576	100	70

- (a) 324 (b) 289  
(c) 441 (d) 361

22.

6 9 12  
36 81 144  
24 63 ?

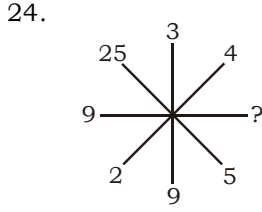
- (a) 120 (b) 80  
(c) 94 (d) 102

23.

Find out the numbers that would fit in the second row and third row middle and last blank spaces (?) respectively.  
18 23 16



- 17 19 ?  
22 ? ?  
(a) 26,24,25  
(b) 21,15,20  
(c) 22,15,20  
(d) 25,24,36



- (a) 81 (b) 64  
(c) 32 (d) 20  
25. 408 (169) 395  
129 (?) 122  
(a) 49 (b) 39  
(c) 59 (d) 48

26. 5 7 8  
4 6 6  
2 3 ?  
10 14 12  
(a) 2 (b) 4  
(c) 61 (d) 3

27. 

26	18	10
11	9	7
5	4	1
10	5	?

- (a) 4 (b) 2  
(c) 5 (d) 6  
28.

- (a) 32 (b) 6  
(c) 12 (d) 20  
29. 7 9 5 11  
4 15 12 7  
13 8 11 ?  
(a) 20 (b) 10  
(c) 30 (d) 70

30. 

3	1	4
5	4	7
2	8	?
38	81	74

- (a) 9 (b) 6  
(c) 3 (d) 7  
31. A = 12 (175) 15, b = 14 (219)  
16, c = 17 (?) 14  
(a) 223 (b) 233

- (c) 224 (d) 230

32. 

24	144	384
6	36	?
2	12	32
1	6	16

- (a) 85 (b) 80  
(c) 96 (d) 91  
33. F J N  
M Q U  
O S ?  
(a) U (b) W  
(c) X (d) Y

34. 

1	$\frac{1}{2}$	$\frac{3}{2}$
2	$\frac{2}{3}$	$\frac{8}{3}$
3	?	$\frac{19}{5}$

- (a)  $\frac{1}{2}$  (b)  $\frac{2}{3}$   
(c)  $\frac{3}{4}$  (d)  $\frac{4}{5}$

35. Find the missing number in the matrix.

10	17	8
5	3	15
6	14	?
42	68	92

- (a) 23 (b) 10  
(c) 25 (d) 46  
36. 144 (132) 121  
64 (?) 100  
(a) 70 (b) 80  
(c) 85 (d) 90

37.  $\frac{6}{62}$   $\frac{7}{79}$   $\frac{5}{47}$   
 $\frac{7}{7}$   $\frac{8}{8}$   $\frac{6}{6}$   
 $\frac{8}{62}$   $\frac{9}{79}$   $\frac{?}{47}$

- (a) 4 (b) 7  
(c) 8 (d) 9

38. 9 4 5  
12 16 15  
15 20 25  
180 80 ?

- (a) 125 (b) 75  
(c) 20 (d) 25

39. 5 3 7  
7 5 9  
4 4 4  
3 2 ?

- (a) 6 (b) 5  
(c) 4 (d) 2

40. 5 4 41  
7 3 58  
10 2 ?  
(a) 34 (b) 12  
(c) 99 (d) 104

41. 10 85 8  
7 54 7  
8 ? 9  
(a) 72 (b) 77  
(c) 74 (d) 79

42. 7 23 21  
1 3 ?  
2 5 7  
3 4 3  
(a) 1 (b) 0  
(c) 2 (d) 3

43. 

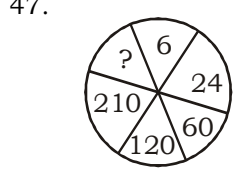
2	9	11	7
8	5	13	-3
7	?	10	(-4)
6	4	10	?

- (a) 3 and 2  
(b) (-3) and 2  
(c) 3 and (-2)  
(d) (-3) and (-2)

44. 2 3 4  
24 39 ?  
20 30 40  
(a) 44 (b) 49  
(c) 50 (d) 56

45. 5 1 25  
6 2 18  
10 4 25  
3 3 ?  
(a) 10 (b) 9  
(c) 3 (d) 4

46. 4 3 2  
6 9 10  
9 27 ?  
(a) 54 (b) 30  
(c) 20 (d) 50

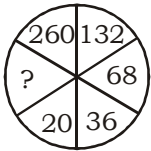


- (a) 330 (b) 336  
(c) 428 (d) 420

48. Select the missing number from the given responses.  
92 70 48  
64 53 42  
52 45 ?  
(a) 36 (b) 40  
(c) 38 (d) 42

49. 3 4 13

- 8 8 56  
5 3 ?  
(a) 4 (b) 6  
(c) 8 (d) 2
50. 25 17 41  
32 40 11  
26 ? 31  
(a) 25 (b) 34  
(c) 38 (d) 26
51. Find the missing number from the given responses.



- (a) 12 (b) 10  
(c) 9 (d) 8
52. 

7	9	8
2	4	3
5	7	6
16	32	?

  
(a) 17 (b) 23  
(c) 47 (d) 73
53. 8 3 12  
2 3 6  
4 3 3  
4 3 ?

- (a) 5 (b) 6  
(c) 7 (d) 15
54. 7 6 8  
5 4 9  
3 2 1  
83 56 ?  
(a) 146 (b) 128  
(c) 136 (d) 148
55. 15 225 30  
7 70 20  
3 ? 8  
(a) 70 (b) 12  
(c) 16 (d) 24
56. 6 8 7  
36 64 49  
24 48 35  
18 24 ?  
(a) 17 (b) 18  
(c) 19 (d) 21
57. 2 4 3 2  
9 7 6 5  
? 33 27 21  
(a) 77 (b) 35  
(c) 69 (d) 80

58.   
(a) 19 (b) 18  
(c) 24 (d) 12

59.   
(a) 9107 (b) 97  
(c) 907 (d) 1097
60. 9 11 13  
13 15 17  
10 12 14  
14 16 18  
11 13 ?  
(a) 21 (b) 22  
(c) 14 (d) 15

## SOLUTION

1. (b)  $9+2^2=13$   
 $13+3^2=22$   
 $22+4^2=38$
2. (b) Sum of each row, column and diagonal is 15.  
 $4+9+2=15$   
 $3+5+7=15$   
 $8+1+6=15$
3. (b) In first row  $\downarrow (9-4)\times 4=20$   
In 2nd row  $\downarrow (8-5)\times 4=12$   
In 3rd row  $\downarrow (7-6)\times 4=4$
4. (d) In first column  $\downarrow (6+7)\times 5=65$   
In 2nd column  $\downarrow (2+3)\times 4=20$   
In 3rd column  $\downarrow (4+1)\times 9=45$
5. (c) In first column  $\downarrow 9+7=11+5$   
In 2nd column  $\downarrow 6+4=8+2$   
In 3rd column  $\downarrow 8+3=4+7$
6. (d) In first row  $\downarrow 4+12=11+5$   
In 2nd row  $\downarrow 6+7=10+3$   
In 3rd row  $\downarrow 8+9=10+7$   
In 4th row  $\downarrow 7+5=8+4$
7. (c) In first column  $\downarrow \frac{6}{3}\div\frac{2}{3}\times 4=8$   
In 2nd column  $\downarrow \frac{18}{2}\div\frac{3}{2}\times 3=27$   
In 3rd column  $\downarrow \frac{15}{5}\div\frac{2}{3}\times 3=9$
8. (a) In first column  $\downarrow (2+50+10)\times 2=124$   
In 2nd column  $\downarrow (12+300+60)\times 2=744$   
In 3rd column  $\downarrow (22+550+110)\times 2=1364$
9. (b) In first column  $\downarrow 9\times 12\times 13=1404$   
In 2nd column  $\downarrow 3\times 2\times 5=30$   
In 3rd column  $\downarrow 7\times 9\times 8=504$
10. (b) In this figure series is set as given below.  
 $7 \xrightarrow{\times 2+1} 15 \xrightarrow{\times 2+1} 31 \xrightarrow{\times 2+1} 63 \xrightarrow{\times 2+1} 127 \xrightarrow{\times 2+1} 255$
11. (d) In first column  $\downarrow 49+98-7=140$   
In 2nd column  $\downarrow 441+882-21=1302$   
In 3rd column  $\downarrow 225+450-15=660$
12. (c) In first column  $\downarrow 11+25-17=19$   
In 2nd column  $\downarrow 6+34-12=28$   
In 3rd column  $\downarrow 8+19-16=11$
13. (a) In first column  $\downarrow \frac{25}{5}\div\frac{2}{3}+15=20$   
In 2nd column  $\downarrow \frac{49}{7}\div\frac{3}{2}+13$

=20

In 3rd column  $\frac{81}{9} + 11$

=20

14. (c) In first row  $\frac{836+112}{3} = 316$

In 2nd row  $\frac{420+213}{3}$

=211

15. (a) In first row  $5+6+9=20$

In 2nd row  $4+8+3=15$

In 3rd row  $9+7+9=25$

In 4th row  $7+8+7=22$

16. (b) In 1st row  $(3+4+1)+(5+2+1)=16$

In 2nd row  $(6+1+3)$

$+ (8+1+6)=25$

In 3rd row  $(4+5+2)+(3+2+6)=22$

17. (c) In 1st row  $9+6+4-17=2$

In 2nd row  $5+8+9-20=2$

In 3rd row  $9+9+7-23=2$

In 4th row  $9+4+8-19=2$

18. (b)



In this figure

$(9-6)^3 - 1 = 26$

same

$(12-8)^3 - 1 = 63$

$(4-3)^3 - 1 = 0$

$(12-10)^3 - 1 = 7$

19. (b) In first column  $(1+2+4+3) \times 5 = 50$

In 2nd column  $(3+4+5+2)$

$\times 5 = 70$

In 3rd column  $(7+4+9+3)$

$\times 5 = 115$

20. (c) In first column  $(7^2+4^2+2^2)=69$

In 2nd column  $(3^2+9^2+1^2)$

$=91$

In 3rd column  $(2^2+6^2+5^2)$

$=65$

21. (a) In first row  $\sqrt{169} + \sqrt{64} + \sqrt{81} = 30$

In 2nd row  $\sqrt{625} + \sqrt{324} + \sqrt{49} = 50$

In 3rd row  $\sqrt{1296} + \sqrt{576} + \sqrt{100} = 70$

22. (a) column 1st  $6 \times 6 = 36$

$6 \times (6-2) = 24$

column 2nd  $9 \times 9 = 81$

$9 \times (9-2) = 63$

column 3rd  $12 \times 12 = 144$

$12 \times (12-2) = 120$

23. (c) Sum of all row, column and diagonal is 57.

first row  $18+23+16=57$

2nd row  $17+19+21=57$

3rd row  $22+15+20=57$

24. (a) In this, squaring of no. on opposite side.

$5^2=25$

$3^2=9$

$2^2=4$

$9^2=81$

25. (a)  $(408-395)^2 = 169$  1st row

$(129-122)^2 = 49$  2nd row

26. (b) In first column  $\frac{5 \cdot 4}{2} = 10$

In 2nd column  $\frac{7 \cdot 6}{3} = 14$

In 3rd column  $\frac{8 \cdot 6}{4} = 12$

27. (b) In 1st column

$26 - (11+5) = 10$

2nd column  $18 - (9+4) = 5$

3rd column  $10 - (7+1) = 2$

28. (a) This circle is set as the series given below

$1 \times 2 = 2$

$2 \times 2 = 4$

$2 \times 4 = 8$

$8 \times 4 = 32$

29. (b) In first row  $(7+9)-5=11$

In 2nd row  $(4+15)-12=7$

In 3rd row  $(13+8)-11=10$

30. (c) In first column  $3^2+5^2+2^2=38$

2nd column  $1^2+4^2+8^2=81$

3rd column  $4^2+7^2+3^2=74$

31. (b) In 1st  $12 \times 15 - 5 = 175$

In 2nd  $14 \times 16 - 5 = 219$

In 3rd  $14 \times 17 - 5 = 233$

32. (c)  $1 \times 2 = 2, 2 \times 3 = 6, 6 \times 4 = 24$  1st column

$6 \times 2 = 12, 12 \times 3 = 36,$

$36 \times 4 = 144$  2nd column

$16 \times 2 = 32, 32 \times 3$

$= 96, 96 \times 4 = 384$

3rd column

33. (b) In first row  $\begin{matrix} & +4 & & +4 & \\ & \curvearrowright & & \curvearrowright & \\ F & & J & & N \\ 6 & & 10 & & 14 \end{matrix}$

In 2nd row  $\begin{matrix} & +4 & & +4 & \\ & \curvearrowright & & \curvearrowright & \\ M & & Q & & U \\ 13 & & 17 & & 21 \end{matrix}$

In last row  $\begin{matrix} & +4 & & +4 & \\ & \curvearrowright & & \curvearrowright & \\ O & & S & & W \\ 15 & & 19 & & 23 \end{matrix}$

34. (d)  $\frac{3}{2} - 1 = \frac{1}{2}$  1st row

$\frac{8}{3} - 2 = \frac{2}{3}$  2nd row

$\frac{19}{5} - 3 = \frac{4}{5}$  3rd row

35. (a) In first column

$(10+5+6) \times 2 = 42$

In 2nd column

$(17+3+14) \times 2 = 68$

In 3rd column

$(8+15+23) \times 2 = 92$

36. (b)  $\sqrt{144} \times \sqrt{121} = 132$  first row

$\sqrt{64} \times \sqrt{100} = 80$  2nd row

37. (b) In first column  $7 \times 8 + 6 = 62$

2nd column  $8 \times 9 + 7 = 79$

In 3rd column  $7 \times 6 + 5 = 47$

38. (b) In first column L.C.M. of 9, 12, 15 = 180

In 2nd column L.C.M. of 4, 16, 20 = 80

In 3rd column L.C.M. of 5, 15, 25 = 75

39. (c) In first column  $5+7=4 \times 3$

In 2nd column  $3+5=4 \times 2$

In 3rd column  $7+9=4 \times 4$

In 4th column  $1+3=4 \times 1$

40. (d) In first row  $5^2+4^2=41$

In 2nd row  $7^2+3^2=58$

In last row  $10^2+2^2=104$

41. (b) In first row  $10 \times 8 + 5 = 85$

In 2nd row  $7 \times 7 + 5 = 54$

In 3rd row  $8 \times 9 + 5 = 77$

42. (b) In first column  $2 \times 3 + 1 = 7$

In 2nd column  $4 \times 5 + 3 = 23$

In 3rd column  $3 \times 7 + 0 = 21$

43. (c) In first row  $2+9=11$

$9-2=7$

In 2nd row  $8+5=13$

$5-8=(-3)$

In 3rd row  $7+3=10$

$3-7=(-4)$

In 4th row  $6+4=10$

$4-6=-2$

44. (d) In first row  $20+2^2=24$

In 2nd row  $30+3^2=39$

In 3rd row  $40+4^2=56$

45. (c) In first row  $\frac{5^2}{1}=25$

In 2nd row  $\frac{6^2}{2}=18$

In 3rd row  $\frac{10^2}{4}=25$

In 4th row

$\frac{3^2}{3}=\mathbf{3}$

46. (d) first column  $\sqrt{9 \cdot 4}=6$

2nd column  $\sqrt{3 \cdot 27}=9$

3rd column  $\sqrt{50 \cdot 2}=10$

47. (b) In this circle the following series is set

$2^3-2=6, 3^3-3=24, 4^3-4=60,$

$5^3-5=120$

$6^3-6=210, 7^3-7 = \mathbf{336}$

48. (c) Sum of columns having difference '40'

$92+64+52=208$  first column

$70+53+45=168$  2nd column

$48+42+\mathbf{38}=128$  3rd column

49. (a) In first row  $4^2-3=13$

2nd row  $8^2-8=56$

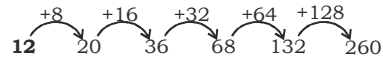
3rd row  $3^2-5=\mathbf{4}$

50. (d) First row  $25+17+41=83$

2nd row  $32+40+11=83$

3rd row  $26+\mathbf{26}+31=83$

51. (a) In this circle following series is set.



52. (b) In first column  $\frac{7+5+(2)^2}{2}=16$

In 2nd column  $\frac{9+7+(4)^2}{2}=32$

In 3rd column  $\frac{8+6+(3)^2}{2}=\mathbf{23}$

53. (b)  $\sqrt[3]{8 \times 2 \times 4} = 4$  first column

$\sqrt[3]{3 \times 3 \times 3} = 3$  2nd column

$\sqrt[3]{12 \times 6 \times 3} = 6$  3rd column

54. (a)  $7^2+5^2+3^2=83$  first column

$6^2+4^2+2^2=56$  2nd column

$8^2+9^2+1^2=\mathbf{146}$  3rd column

55. (b) In first row  $\frac{30}{2} \times 15=225$

In 2nd row  $\frac{20}{2} \times 7=70$

In 3rd row  $\frac{8}{2} \times 3=\mathbf{12}$

56. (d) In first column  $\frac{6+36}{2}=24+18$

In 2nd column  $\frac{8+64}{2}=48+24$

In 3rd column  $\frac{7+49}{2}=35+\mathbf{21}$

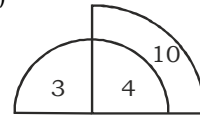
57. (a) In 4th column  $\frac{(2+5) \times (5-2)}{2}=21$

In 3rd column  $\frac{(3+6) \times (6-3)}{2}=27$

In 2nd column  $\frac{(4+7) \times (7-4)}{2}=33$

In 1st column  $\frac{(2+9) \times (9-2)}{2}=77$

58. (a)



$3 \times 2 + 4 = 10$

$4 \times 2 + 6 = 14$

$6 \times 2 + 8 = 20$

$8 \times 2 + 3 = \mathbf{19}$

59. (d)  $2 \times 8 + 1 = 17$

$17 \times 8 + 1 = 137$

$137 \times 8 + 1 = \mathbf{1097}$

60. (d) In first row  $9+2$

$=11, 11+2=13$

In 2nd row  $11+2=13,$

$13+2=15$

In 3rd row  $10+2=12,$

$12+2=14$

In 4th row  $14+2=16,$

$16+2=18$

In 5th row

$11+2=13, 13+2=\mathbf{15}$