

Measurement of Capacity

1. What do we use to measure length?

- a) Spoon ☐
- b) Ruler ☐
- c) Plate ☐



2. Which is longer?

 Pencil ☐ or  Book ☐

3. Fill in the blank:

1 metre = ____ centimetres

4. Trick the object that is longer:

 Ruler ☐ or  Eraser ☐

6. Which tool would you use to measure a table?

- a) Measuring tape ☐
- b) Eraser ☐
- c) Plate ☐

7. Draw a line longer than 5 cm.



8. Which is shorter?

- a) Your finger ☐
- b) Your leg ☐

9. True or False:

- a) We use a ruler to measure small things. ☐
- b) 1 metre is shorter than 1 centimetre. ☐

10. Look at the pictures and tick the longer object:

(Stick)  ☐ or (Thread)  ☐



11. How many centimetres are there in half a metre?

a) 50 cm

b) 100 cm

12. Color the box that should be measured in centimetres:

a) Balloon

b) Pencil

c) House

13. Fill in the blank:

A pencil is about ____ centimetres long.

14. Tick the object you would measure in metres:

a) Playground

b) Book

15. Arrange these from shortest to longest:

 Ticket,  Book,  Door