

## Reading the Clock

### 1. What time is it?

Short hand is on 4, long hand is on 12

Answer: \_\_\_\_\_

### 2. How many hands does a clock have?

a) 1 ☐

b) 2 ☐

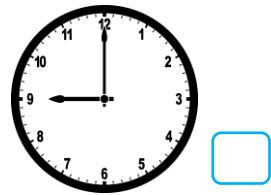

c) 3 ☐

### 3. Fill in the blank:

When the long hand is on 12, the clock shows \_\_\_\_\_ o'clock.

### 4. Your bedtime is 9 o'clock at night.

Tick the clock that shows your bedtime:



### 5. Draw the clock hands to show 5 o'clock

\_\_\_\_\_

### 6. What does the long hand tell us?

a) Hour

b) Minute

c) Day

### 7. Write the time:

Short hand – 2

Long hand – 12

Time: \_\_\_\_\_

### 8. Circle the correct answer:

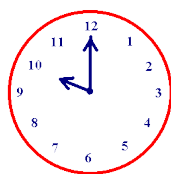


a) 1 o'clock

b) 2 o'clock

c) 12 o'clock

9. Look at the picture:



What time is it? \_\_\_\_\_

10. When the short hand is on 6 and the long hand is on 12, what time is it?

Answer: \_\_\_\_\_

11. Which of these shows 7 o'clock?



12. Fill in the blank:

There are \_\_\_\_ numbers on a clock face.

13. You go to school at 8 o'clock in the morning.

Which clock shows school time?



14. The long hand is on 12, and the short hand is on 11.

What time is it? \_\_\_\_\_.