

## Measuring Time

1. What do we use to measure time?

- a) Clock
- b) Bag
- c) Pen

2. Draw the short hand pointing at 5. Blank watch face




3. Fill in the blank:

1 hour = \_\_\_\_ minutes

4. Tick the activity that takes more time.

- a) Brushing teeth ☐
- b) Watching a movie ☐

5. Match the following:

- |             |  |
|-------------|--|
| a) Clock    | i.  Shows the day                |
| b) Calendar | ii.  Tells the time             |
| c) Watch    | iii.  Shows the hour and minute |

6. What comes after morning?

- a) Night ☐
- b) Afternoon ☐
- c) Evening ☐

7. If it is 12 o'clock now, after 1 hour, it will be \_\_\_\_ o'clock.

8. Tick the activities you do in the evening:

- a) Going to school ☐
- b) Having dinner ☐
- c) Doing homework ☐
- d) Waking up ☐

9. Draw a clock showing 3 o'clock.

\_\_\_\_\_

10. How many hours are there in a day?

\_\_\_\_\_

11. Choose the correct answer:

The minute hand is \_\_\_\_.

a) Shorter ☐

b) Longer ☐

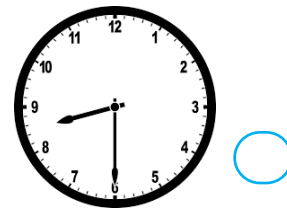

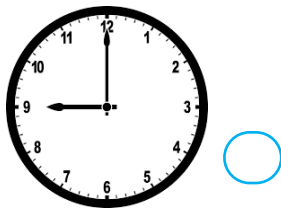
12. Which activity takes only a few seconds?

a) Tying shoelaces ☐

b) Blinking eyes ☐

c) Playing football ☐

13. Color the correct clock that shows 9 o'clock:



14. Which hand of the clock shows minutes?

a) Short hand ☐

b) Long hand ☐

15. Write True or False:

a) A clock has two hands. ☐

b) 60 minutes make 1 hour. ☐

c) Afternoon comes before morning. ☐