

Shape Around Us

1. What shape is a window?

a) Circle

☐

b) Square

☐

c) Triangle

☐

2.  A pizza slice looks like a

Answer: _____

3. Tick the object that is round in shape

a) Ball

☐

b) Book

☐

c) Pencil box

☐

4. Match the object with its shape:

a) Clock

i. Circle

c) Slice of bread

ii. Triangle

d) Birthday cap

iii. Square

5. What shape is the sun?

Answer: _____

6. Which of these things are triangle-shaped?

a) Ice cream cone

☐

b) Book

☐

c) Traffic sign

☐

7. Fill in the blank:

A coin is in _____ shape.

8. Draw a (✓) on square-shaped objects:

a) Juice

☐

c) Box

☐

b) Football

☐

d) CD

☐

9. How many sides does a square have?

Answer: _____

10. What is the shape of your notebook?

a) Circle

☐

b) Rectangle

☐

c) Triangle

☐



11. Choose the correct shape for a clock

a)  ☐

b)  ☐

c)  ☐

12.  A doughnut is _____

a) Round ☐


b) Square ☐


c) Triangle ☐


13. Fill in the blanks:

A triangle has ____ sides and ____ corners.

13. Circle the things that are rectangle in shape:

a)  Mobile ☐

b)  Book ☐

c)  Balloon ☐

14. What shape is the door of your house?

Answer: _____