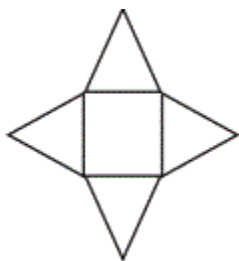


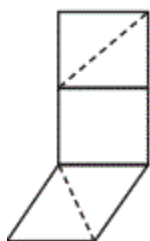
Nets for Building 3-D Shapes

1. Which of the following is 'not' the net of a square pyramid?

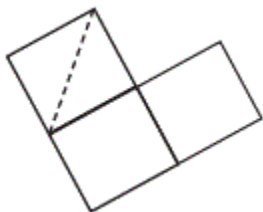
A.



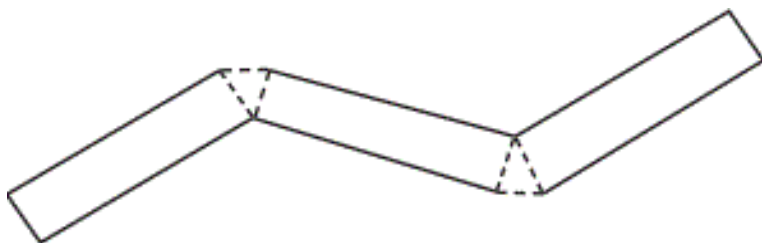
B.



C.

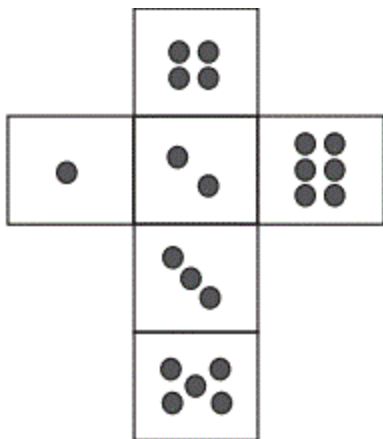


2. The net below is to be folded to make a 3D shape. Name the shape.

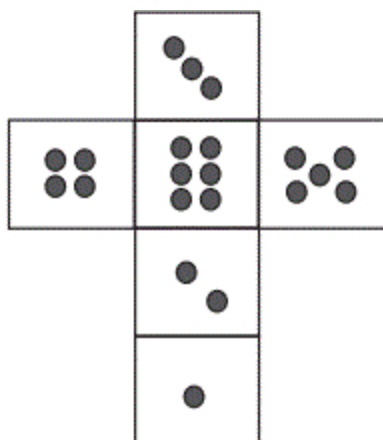


3. Using the fact— "Opposite sides of a die always add upto 7", find which of the following is/are the net of a die?

A.



B.



C.

