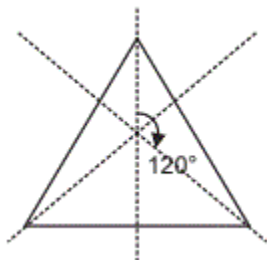


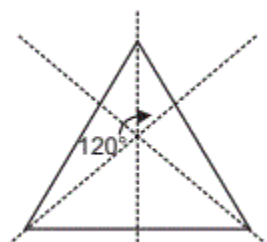
## Order of Rotational Symmetry

1. Can you tell the order of rotational symmetry for an equilateral triangle?

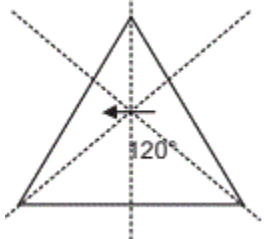
A.



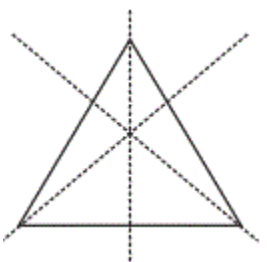
B.



C.



D.

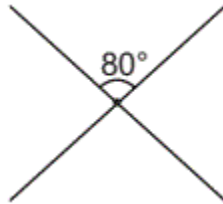


2. Give the order of rotational symmetry for each figure:

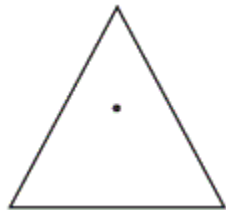
A.



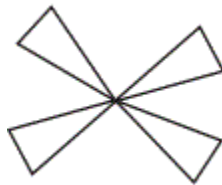
B.



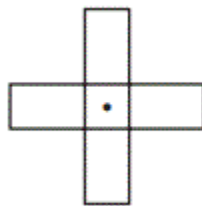
C.



D.



E.



F.

