



Rounding Whole Numbers


1. Round off 557829 to the nearest tens.




2. Round off 41827 to the nearest hundreds.



3. Round off 684321 to the nearest thousands.



4. Round off 684321 to the nearest thousands.



5. Ato has 154 cedis and Abina has 289 cedis. How many cedis do they have altogether? Round off the numbers and give answer in nearest tens?

6. Kojo has bought 295 marbles. He gave 147 to his friend. How many are left with Kojo? Round off the numbers and give answer in nearest hundreds.

7. Round up and round down the given numbers.

287647	Round Up	Round Down	Round Off
To the nearest tens			
To the nearest hundreds			
To the nearest thousands			
To the nearest ten thousnads			

8. Round up and round down the given numbers.

1756832	Round Up	Round Down	Round Off
To the nearest tens			
To the nearest hundreds			
To the nearest thousands			
To the nearest ten thousands			