

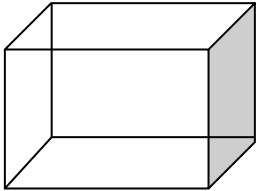
## Symmetry in 3D Shapes

1. How many lines of symmetry are there in the following figures?

**Shapes**


**No. of line of symmetry**

a.



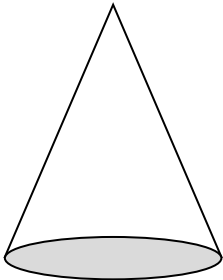
---

b.



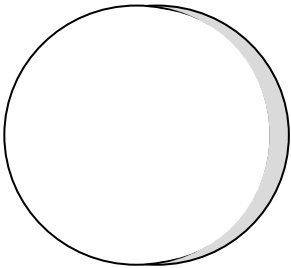
---

c.




---

d.



---

e.



---