

Classification Basis of Habitat


1. Answer the following questions:

A. What is terrestrial animal?

B. What is aerial animals?

C. Give an example of arboreal animal?

D. Draw a diagram of an Amphibian animal.



2. Write True or False:-

A. Terre means earth.

B. Animals which are able to fly are called aquatic animals.

C. Fish is a terrestrial animal.




3. Fill in the blanks:-

A. The term aquatic can be applied to animals that live in either _____ or _____.

B. Animals which are able to fly are known as _____.

C. Monkeys, pandas are come in _____ animal.

4. Match the following:-

Column A	Column B
i. 	A. Aquatic animals
ii. 	B. Arboreal animals
iii. 	C. Terrestrial animal
iv. 