

# Cotton

## 1. Answer the following questions.

A. Explain the term ginning.

---

---

B. What are looms?

---

---

C. What is handloom?

---

---

D. Draw a diagram of cotton plant.

---

---

## 2. Write True or False:-

A. We get cotton from the flowers of cotton plants.




B. The cotton balls are a bundle of red fluffy materials.

C. The looms may be hand operated or power operated.

**3. Fill in the blanks:-**

- A. The flowers of cotton plant are called the \_\_\_\_\_.
- B. The fluff is then spun into \_\_\_\_\_ or \_\_\_\_\_.
- C. The machine on which thread is woven into cloth are called \_\_\_\_\_.

**4. Match the following-**

Column A	Column B
i. Handloom	A. 
ii. Power loom	B. 
iii. Sea Island cotton	C. 
iv. Gossypium hirsutum	D. 