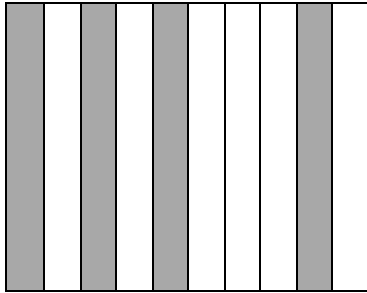


# What are Decimals?

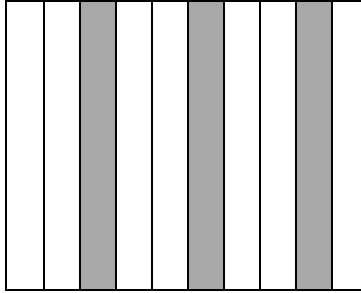
1. Write the decimal forms for the shaded portions in the figures below.

a.



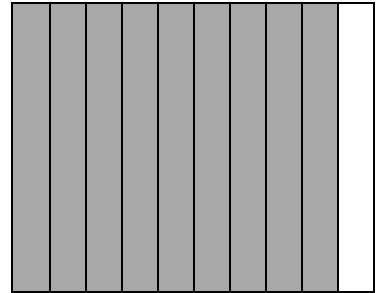
\_\_\_\_\_

b.



\_\_\_\_\_

c.



\_\_\_\_\_

2. How do you read these decimals? Write them.

a. 1.5 = \_\_\_\_\_

b. 5.8 = \_\_\_\_\_

c. 26.5 = \_\_\_\_\_

d. 0.15 = \_\_\_\_\_

3. How do you read these decimals? Write them.

a. Two point two. \_\_\_\_\_

b. Fourteen point eight. \_\_\_\_\_

c. Forty point six two. \_\_\_\_\_

d. Zero point seven. \_\_\_\_\_

e. One point nine five three. \_\_\_\_\_