

# Meaning of Perimeter

1. What is a rectilinear figure? Give some examples also.

---

---

---

2. What is the perimeter of the figure?

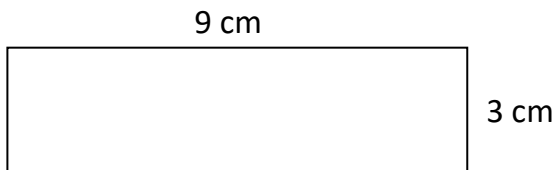
---

---

---

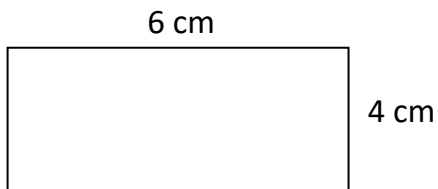
3. Calculate the perimeter of the following rectangles and squares.

a.



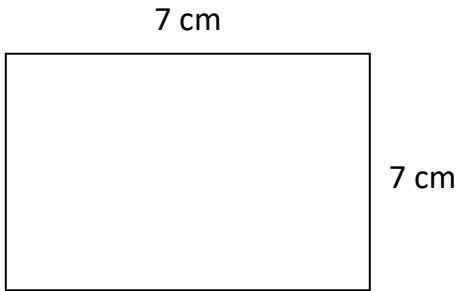
Perimeter = \_\_\_\_\_

b.



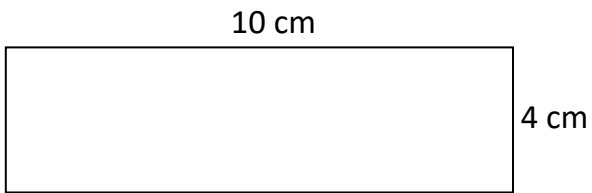
Perimeter = \_\_\_\_\_

c.



Perimeter = \_\_\_\_\_

d.



Perimeter = \_\_\_\_\_