



Addition and Subtraction of Money

1. Add and Subtract the following sums:


a. ₹ 249.67 + ₹ 90 .48 + ₹ 678.55



b. ₹ 2568.85 + ₹ 979.08 + ₹ 5765.57




c. ₹ 6710.95 + ₹ 5.78 + ₹ 879.85




d. ₹ 761.15 – ₹ 78.87



e. ₹ 9120.05 – ₹ 2568.76




f. ₹ 18005.70 – ₹ 6595.89



2. Solve the following word problems.

- a. Your mother went to the mall for shopping with ₹ 2000. She purchased grocery worth 980 cosmetics worth ₹ 265.67, cookies worth ₹ 80.75 and some juices worth ₹ 50.35. How much money was left with her?



- b. A microwave costs ₹ 5680.56 and a mixer costs ₹ 1850.75 less than that of microwave. Also, a table fan costs ₹ 3485.85 less than that of the microwave. Find the total cost of the three objects.



- c. The cost of pencil box is ₹ 257.75 and a colour box is ₹ 575.25. Which costs more and by how much?

