

How to Read the Clock to Find the Time in Hours and Minutes

1. Read the clock and write given time.

a.



b.



c.



d.



e.



f.



g.



h.



2. Read the given time and draw the hands on the clock.

a.




1 : 00

b.



3 : 15

c.



4 : 30

d.




5 : 45

e.



6 : 30

f.



8 : 15

g.



10 : 00

h.



12 : 45

i.



10 : 15

j.




12 : 30

k.



9 : 30

l.



1 : 45