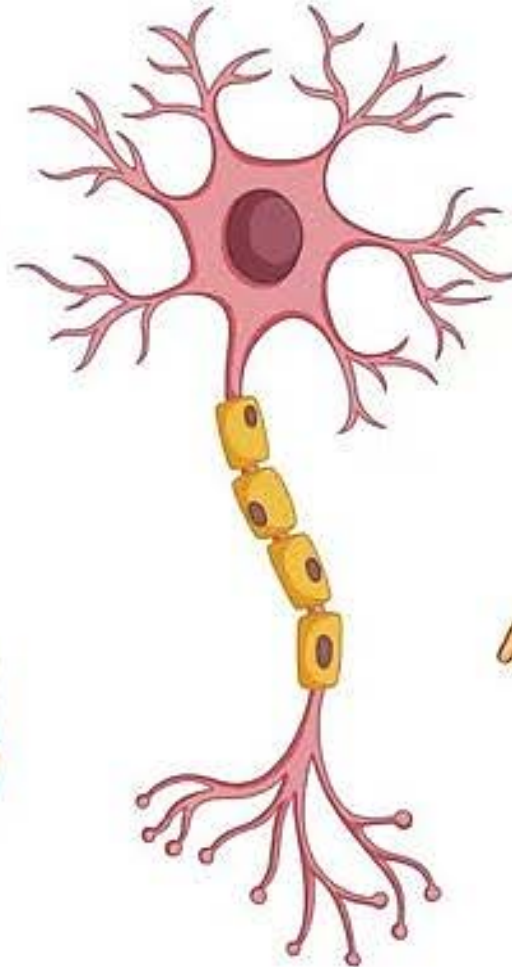
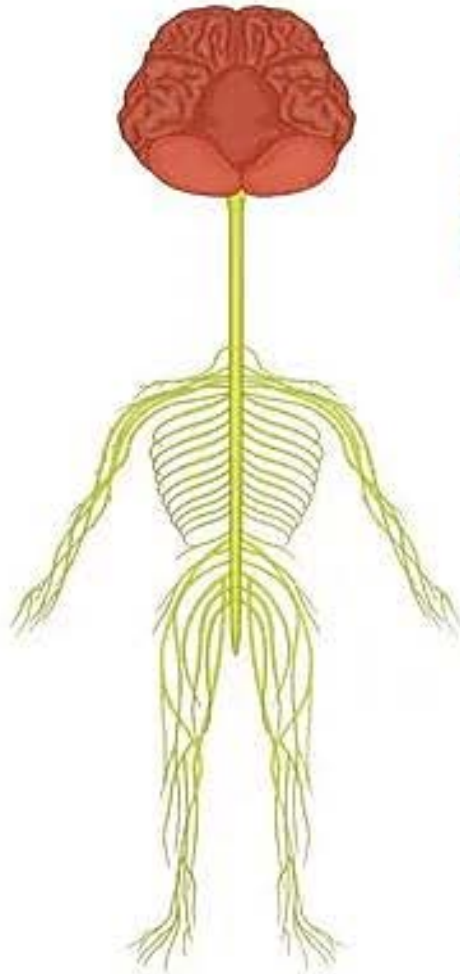
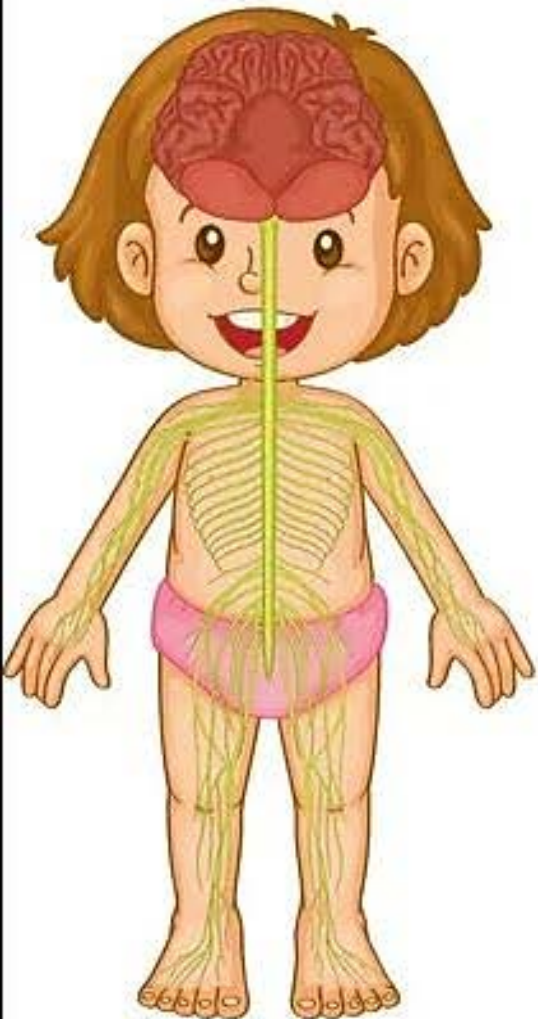



10. Nervous System EXERCISE

Class 5 E.V.S





A. Multiple Choice Questions (MCQs).

Choose the correct answer from the following:



1. Which of the following is not a sense organ?

- a. Eye b. Tongue c. Skin d. Teeth**

2. Which of the following does not come under the nervous system?

- a. Kidney b. Nerves c. Brain d. Spinal cord**

3. Which of the following connects the brain to spinal cord?


- a. Cerebellum b. Cerebrum c. Medulla d. Bone**

4. The image in eye is formed on . _____

- a. eye lids b. cornea c. iris d. retina**

5. Brain needs a continuous supply of . _____

- a. hydrogen b. oxygen c. carbon dioxide d. nitrogen**



B. Fill in the blanks.


- 1. Eyes help to see different _____.**
- 2. _____ is the structural and functional unit of nervous system.**
- 3. Brain and spinal cord together form _____ system.**
- 4. Ear enable us to _____.**
- 5. Some of our actions are automatic they are called _____ actions.**

C. Answer the following questions.


1. Define sensory nerves.



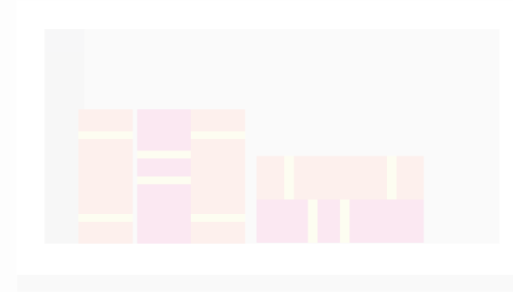

2. Name five sense organs.



3. Name all the parts of a human brain.



4. Explain three kinds of nerves.



5. Write the function of the following:

a. Cerebrum

b. Medulla

c. Spinal cord



6. How signals are transferred from brain to other parts of body?



Life Skill

A. Model

Create a model of the brain by using clay, playdough, styrofoam, recyclable food, etc. Create a whole brain using a brain atlas. Use different colours to indicate different structures



B. Chart

Make a chart of human body showing various joints in the body. This should be a group work.



