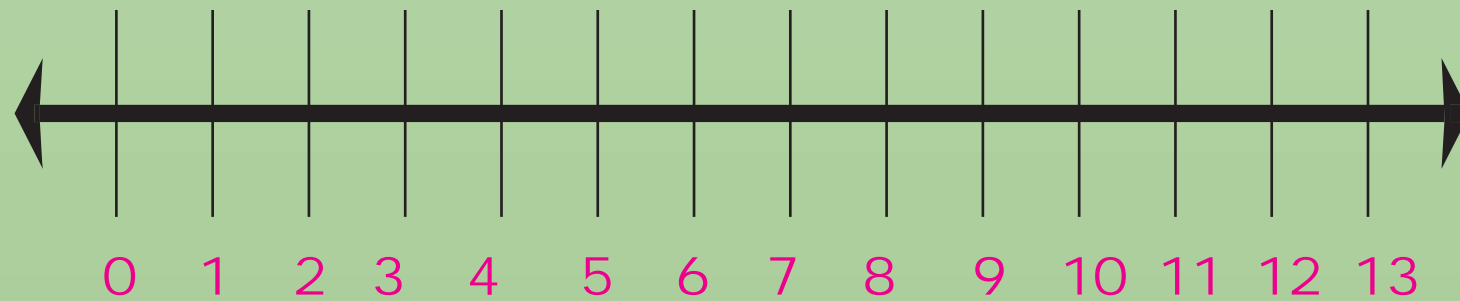
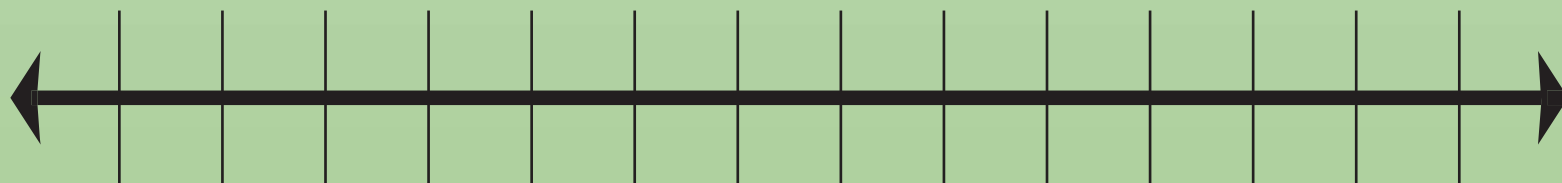
A colorful border surrounds the central text box. It features large, stylized numbers in various colors (red, yellow, pink, blue, green, purple) and illustrations of four happy children at the bottom.

CLASS = 2
CHACPTAR = 4
SUBTRACTION

Subtract with the help of number line :

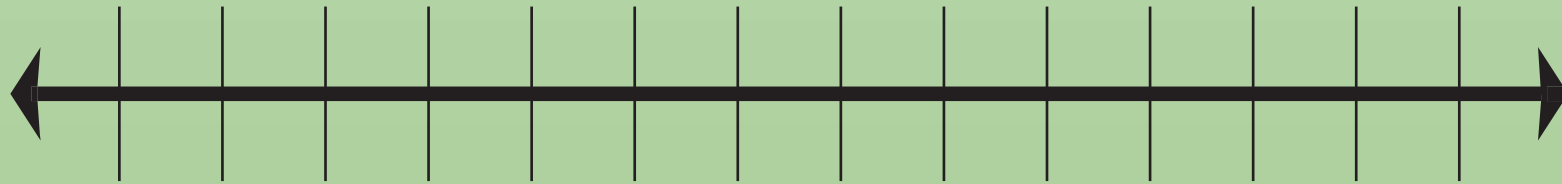


$$\boxed{12} - \boxed{6} = \boxed{}$$



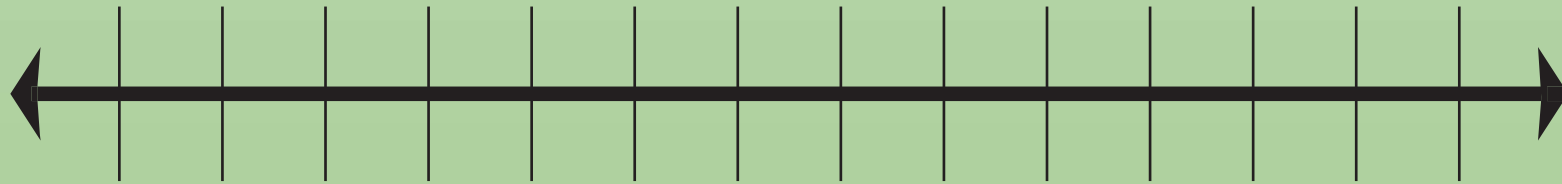
0 1 2 3 4 5 6 7 8 9 10 11 12 13

$$\boxed{10} - \boxed{4} = \boxed{}$$



0 1 2 3 4 5 6 7 8 9 10 11 12 13

$$\boxed{10} - \boxed{4} = \boxed{}$$



0 1 2 3 4 5 6 7 8 9 10 11 12 13

13

—

6

=

Write a subtraction fact for each addition :

10	+	5	=	<input type="text"/>	→	15	-	5	=	10
11	+	6	=	<input type="text"/>	→	17	-	<input type="text"/>	=	<input type="text"/>
14	+	8	=	<input type="text"/>	→	22	-	<input type="text"/>	=	<input type="text"/>
18	+	9	=	<input type="text"/>	→	<input type="text"/>	-	<input type="text"/>	=	9
17	+	8	=	<input type="text"/>	→	<input type="text"/>	-	8	=	17

Fill in the boxes :

$$\begin{array}{|c|c|} \hline \text{T} & \text{O} \\ \hline 8 & 9 \\ \hline 2 & \boxed{8} \\ \hline 6 & 1 \\ \hline \end{array} -$$

$$\begin{array}{|c|c|} \hline \text{T} & \text{O} \\ \hline 6 & 2 \\ \hline \boxed{} & 1 \\ \hline 3 & 1 \\ \hline \end{array} -$$

—

T	O
9	4
<input type="text"/>	3
1	1

—

T	O
6	8
<input type="text"/>	4
1	4

-

T	O
<input type="text"/>	8
1	4
2	4

-

T	O
8	3
<input type="text"/>	<input type="text"/>
6	1

Subtract :

H

T

O

9

2

9

– 8

0

4

1

2

5

H

T

O

4

6

8

– 3

5

7

--	--	--

$$\begin{array}{r} 9 \quad 8 \quad 4 \\ - 8 \quad 3 \quad 0 \end{array}$$

$$\begin{array}{r} 4 \quad 8 \quad 6 \\ - 3 \quad 0 \quad 5 \end{array}$$

$$\begin{array}{r} 843 \\ -712 \\ \hline \end{array}$$

$$\begin{array}{r} 976 \\ -521 \\ \hline \end{array}$$

Match the following :

Column A

1. $62 - 38$

2. $82 - 64$

3. $94 - 65$

4. $76 - 69$

Column B

(a) 29

(b) 24

(c) 7

(d) 18

Subtract :

T	O
---	---

$$\begin{array}{r} 48 \\ -29 \\ \hline \end{array}$$

1	9
---	---

$$\begin{array}{r} 89 \\ -20 \\ \hline \end{array}$$

--	--

$$\begin{array}{r} 64 \\ -39 \\ \hline \end{array}$$

--	--

$$\begin{array}{r} 31 \\ -12 \\ \hline \end{array}$$

$$\begin{array}{r} 34 \\ -15 \\ \hline \end{array}$$

$$\begin{array}{r} 61 \\ -29 \\ \hline \end{array}$$

$$\begin{array}{r} 71 \\ -47 \\ \hline \end{array}$$

1. Write a subtraction fact for the following addition :

(a) $9 + 8 = 17$ $17 - 8 = 9$ (b) $14 + 7 = 21$

2. Subtract :

(a) H T O

3 5 0

- 6 1

(b) H T O

2 0 0

- 8 9

(c) H T O

8 1 1

- 2 1 1

3. Fill in the boxes :

(a) $134 - 3 \text{ tens} =$

(b) $256 - 2 \text{ hundreds} =$

(c) $556 - 6 \text{ tens} =$

(d) $386 - 8 \text{ tens} =$

Subtract :

H	T	O
---	---	---

$$\begin{array}{r} 631 \\ - 582 \\ \hline \end{array}$$

49

H	T	O
---	---	---

$$\begin{array}{r} 462 \\ - 385 \\ \hline \end{array}$$

--

H T O

$$\begin{array}{r} 990 \\ - 560 \\ \hline \end{array}$$

H T O

$$\begin{array}{r} 348 \\ - 259 \\ \hline \end{array}$$

$$\begin{array}{r} 340 \\ - 258 \\ \hline \end{array}$$

$$\begin{array}{r} 679 \\ - 589 \\ \hline \end{array}$$

Problems of Subtraction :

1. There are 780 students in a school. If the number of boys is 489, how many girls are there ?
2. A shopkeeper had 200 chairs. He sold 126 chairs. How many chairs were left with him ?
3. There are 816 kites in a shop. 218 kites are sold. How many kites are left to be sold ?
4. What should be added to 458 to get 900 ?

780
-489
291

5. A shopkeeper supplied 630 pencils and pens to a school. If he supplied 340 pens, find the number of pencils he supplied.



2. There are 362 bananas in a basket. 188 are taken out. How many bananas are left in the basket ?

SOLUTION :

Total number of bananas =

Number of bananas taken out =

Bananas left in the basket = -

=

3. A shopkeeper has 764 eggs. He sells 389 out of them. How many eggs are left with him ?

SOLUTION :

Total number of eggs =

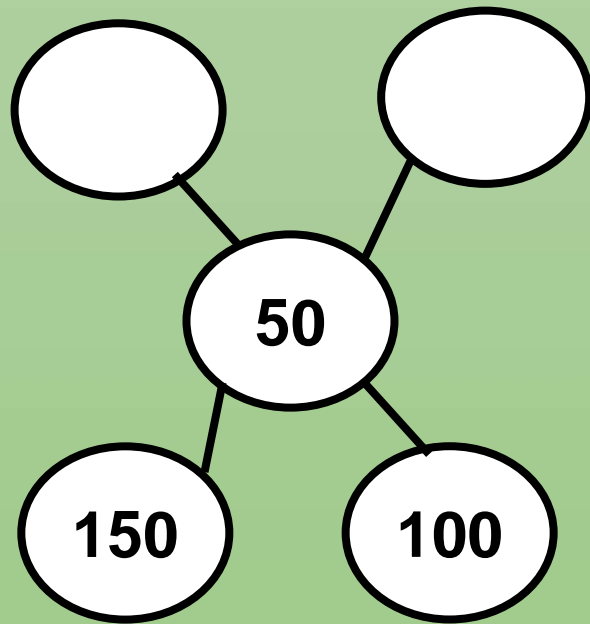
Number of eggs sold =

Number of eggs left = -
=

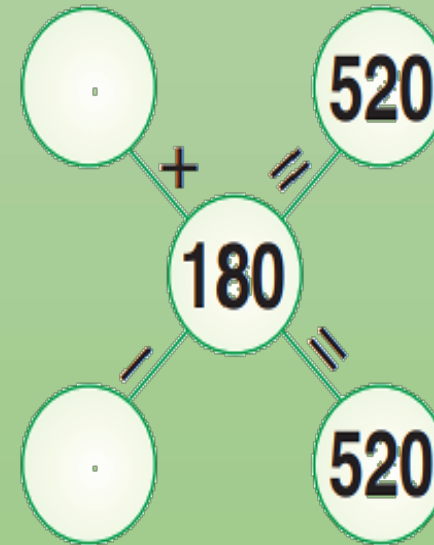
MATH QUIZ

1. Fill in the placeholders :

(a)

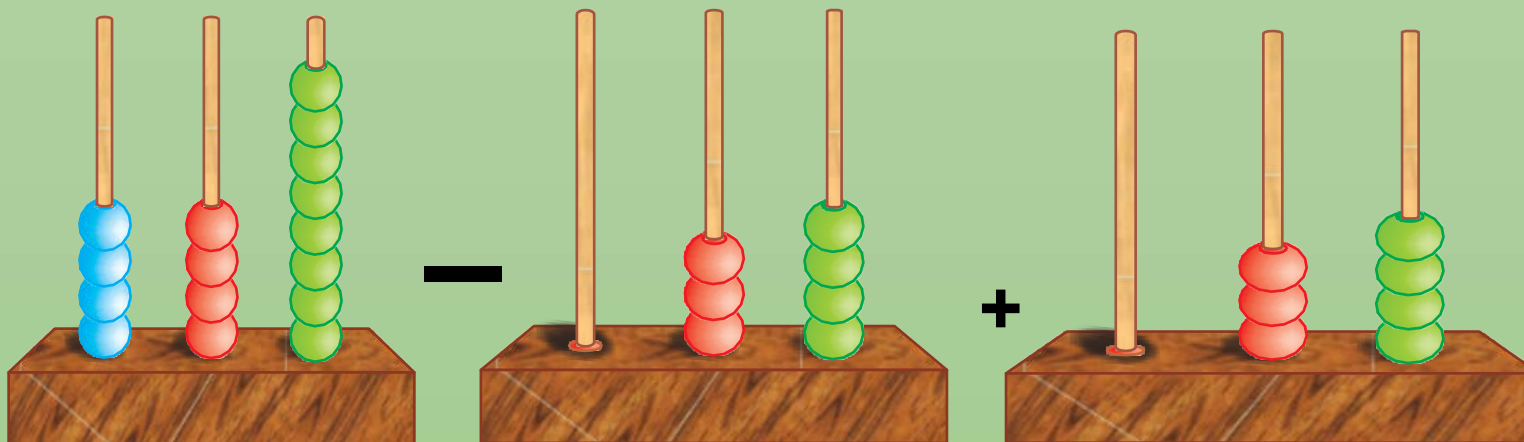


(b)



2. Find the sum by using the abacus

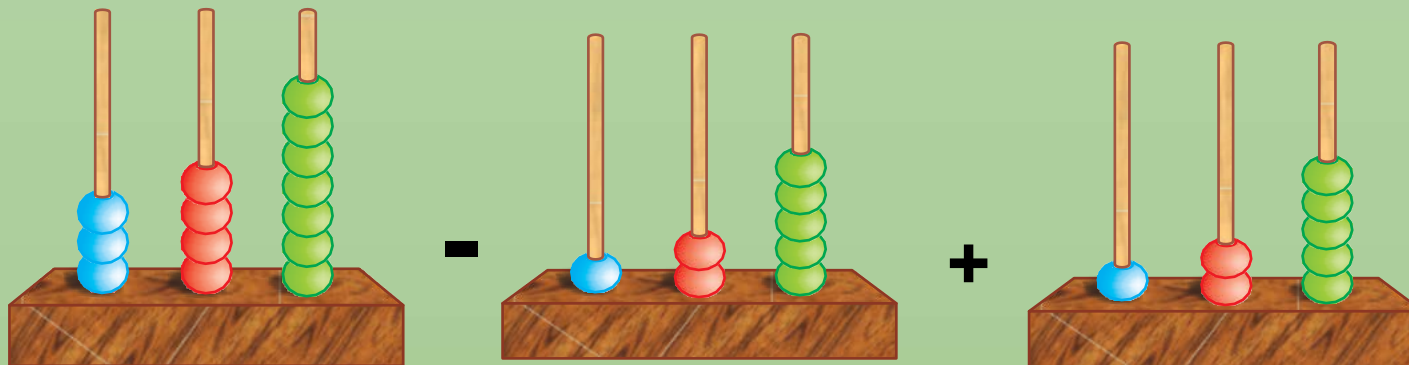
a



$$448 - 34 + 307 =$$



(b)



$$347 - 125 + 99 =$$

3. There are 861 students in your school from classes I to V. There are 426 students in classes I and II and 256 students in classes III and IV. How many students are there in class V ?

TEST PAPER – 1

Based on Chapters (1-4)

1. TICK (3) THE CORRECT OPTION :

(a) How do we write twenty-nine in figures ?

92 ☐

209 ☐

29 ☐

(b) What is $91 + 8$?

98 ☐

99 ☐

100 ☐

(c) What is 5 tens and 4 ones ?

45 ☐

504 ☐

54 ☐

(d) What comes after 509 ?

600 ☐

510 ☐

511 ☐

2. FILL IN THE BLANKS :

(a) 4 hundreds + 3 tens + 5 ones =

(b) $111 + 222 =$

(c) $9 + 5 =$ + 9

(d) $89 - 56 =$

3. WRITE 'T' FOR TRUE and 'F' FOR FALSE :

(a) $251 + 0 = 252$

(b) $9 + 5 = 14$, so, $14 - 5 = 9$

(c) $28 + 56 = 84$

(d) 10 tens = 100 hundreds

4. MATCH THE FOLLOWING :

Column A

1 hundred 3 tens

2 hundreds 5 tens 6 ones

6 hundreds 7 ones

9 hundreds 1 ten 2 ones

Column B

256

912

130

607



Thank
you

