

Comparing Numbers

1. Tick the greater number.

i. 12 ☐ 18 ☐

ii. 45 ☐ 42 ☐

2. Use the correct symbol (>, <, =)

i. 39 ___ 41



ii. 22 ___ 19

iii. 30 ___ 30

3. Count and compare the pictures

i.  (donuts)

 (Apples)

Which is more?  (donuts) or  (Apples) = _____

ii.  (Stars)

 (Fish)

Which is greater?  (Stars) or  (Fish) = _____

4. Color to circle with smallest number

i. 11 ☐ 18 ☐ 9

ii. 47 ☐ 50 ☐ 45

5. Color to circle with greatest number

i. 23 ☐ 25 ☐ 22

ii. 35 ☐ 30 ☐ 40

6. Fill in the blanks (Use symbols >, <, =)

i. 14 is ___ than 12

ii. 48 is ___ than 50

iii. 25 is ___ to 25

7. Color to circle with bigger number

i) 7 ☐ 9 ☐

ii) 22 ☐ 20 ☐

8. Find the odd one out

i. 13 17 15 44

Odd one: _____

ii. 49 41 50 12

Odd one: _____

9. Match the correct pair

- | | |
|-------|---------------------|
| a) 18 | i. Less than 40 |
| b) 10 | ii. Greater than 15 |
| c) 33 | iii. Equal to 10 |

10. Choose the correct comparison (Use symbols $>$, $<$, $=$)

i. Which is greater?



27



35

Answer: _____

ii. Which is smaller?



41



38

Answer: _____

11. Fill using $>$, $<$ or $=$

i. 33 ____ 38

ii. 46 ____ 46

iii. 19 ____ 14

12. Write: (Use symbols $>$, $<$, $=$)

"37 is _____ 28."

13. Rani has 18 pencils. Rahul has 22 pencils.


Who has more pencils? _____

14. A bag has 30 marbles. Another has 28 marbles.

Which bag has fewer marbles? _____

15. True or False

- | | | |
|--------------------------|----------------------------|-----------------------------|
| i. 50 is greater than 45 | <input type="radio"/> True | <input type="radio"/> False |
| ii. 22 is less than 20 | <input type="radio"/> True | <input type="radio"/> False |



iii. 39 is equal to 39

☐

True

☐

False

16. Complete the statements

i. 50 is the _____ number (biggest / smallest)

ii. 1 is the _____ number (biggest / smallest)

iii. 24 is _____ than 20 (greater / less)

17. 29, 30, ____ → Is the missing number greater than 29? (Yes/No)

18. ____, 37, 38 → What number fits here? Is it greater or less than 37?

19. Arrange the numbers

i. Arrange from small to big:

34 29 32 _____

ii. Arrange from big to small:

45 49 41 _____

20. Find the number that is less than 10:

11 9 15 12
