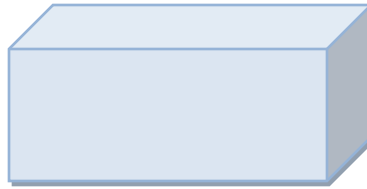
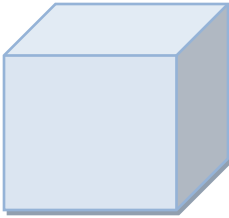
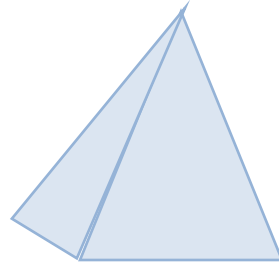
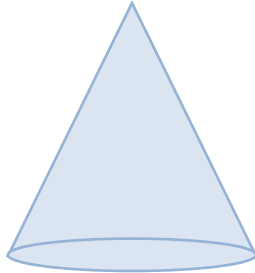



Shapes Around Us

1. Write the names of each shape.



2. Match each object to its shape's name.



Cuboid

Cube

Cone


Sphere

Cylinder


3. Fill in the blanks.

- a. A sphere has _____ face, _____ edge and _____ vertex.
- b. A cube has _____ faces, _____ edge and _____ vertices.
- c. A cylinder has _____ faces, _____ edge and _____ vertices.
- d. A pyramid has _____ faces, _____ edge and _____ vertices.
- e. A cone has _____ faces, _____ edge and _____ vertices.

4. Draw an object that has a shape of a cube.



5. Draw an object that has a shape of a cylinder.



6. Draw an object that has a shape of a cone.

