


Time

1. What time is shown on this clock?



Answer: _____

2. Look at the clock below and tick the correct time:



(a) 9 o'clock

(b) 3 o'clock

(c) 6 o'clock

3. Fill in the blanks:

(a) There are _____ hours in one day

(b) There are _____ minutes in one hour

4. Match the following:

(a) 6:00 AM

(i) Sleep

(b) 1:00 PM

(ii) Wake up

(c) 9:00 PM

(iii) Lunch

5. What comes after 5 o'clock?


Answer: _____

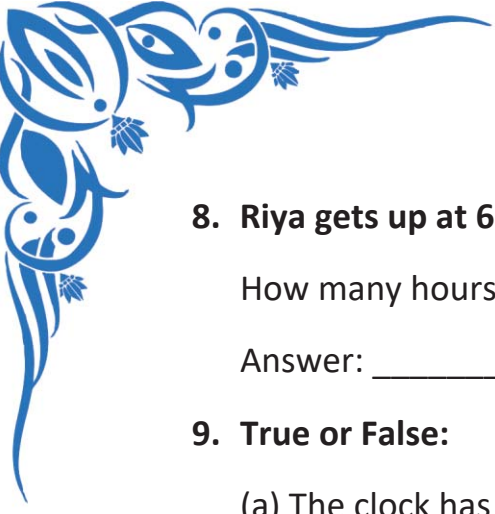
6. Which hand of the clock is longer?

(a) Hour hand

(b) Minute hand

7. Draw the hands on the clock to show 4 o'clock





8. Riya gets up at 6:00 AM. She goes to school at 8:00 AM.

How many hours later does she go to school?

Answer: _____

9. True or False:

(a) The clock has 10 numbers – _____

(b) Minute hand moves faster than hour hand – _____

10. What time will it be 2 hours after 3 o'clock?

Answer: _____

11. Circle the correct time for breakfast

(a) 8:00 PM (b) 8:00 AM (c) 2:00 PM

12. Fill in the blanks using the correct words:

The _____ hand shows minutes

The _____ hand shows hours

13. Arrange these in the correct order:

(a) Dinner

(b) Wake up

(c) Lunch

Order: _____ → _____ → _____

14. Rohit's school starts at 9:00 AM and ends at 2:00 PM

How many hours is he at school?

Answer: _____

15. What time will it be 1 hour before 7 o'clock?

Answer: _____