





## Before, After and Between

1. The number before 29 is \_\_\_\_\_.
2. The number after 41 is \_\_\_\_\_.
3. The number between 35 and 37 is \_\_\_\_\_.
4. What comes after 48?  
☐ 47    ☐ 49    ☐ 50
5. What comes before 23?  
☐ 22    ☐ 24    ☐ 25
6. What comes between 18 and 20?  
16  17  19
7. Write the number that comes after 36: \_\_\_\_\_
8. Write the number that comes before 12: \_\_\_\_\_
9. Write the number between 7 and 9: \_\_\_\_\_
10. Before 25 is \_\_\_\_\_ ( $<$ ,  $>$ ,  $=$ ) 26
11. After 43 is \_\_\_\_\_ ( $<$ ,  $>$ ,  $=$ ) 42
12.  = 10  
If  = 1, what comes before 10?  
Answer: \_\_\_\_\_
13.  = 7  
If  = 1, what comes after 7?  
Answer: \_\_\_\_\_
14. Draw 3 balloons and write the number that comes before 3.  
Answer: \_\_\_\_\_
15. Missing numbers:
  - a) 26, \_\_\_\_\_, 28
  - b) \_\_\_\_\_, 39, 40



c) 11, 12, \_\_\_\_

d) What comes after 49? \_\_\_\_

e) What comes before 1? \_\_\_\_

f) What comes between 44 and 46? \_\_\_\_

**16. Which number comes between 6 and 8?**

5  6  7

**17. Connect the missing number:**

45 →  → 47

**18. Which number path is correct?**

a) 33 → 34 → 35

b) 33 → 32 → 35

c) 33 → 36 → 35

Correct path: \_\_\_\_

**19. Arrange in order: 39, 41, 40**

Answer: \_\_\_\_ → \_\_\_\_ → \_\_\_\_

**20. Complete the pattern**

28, 29, \_\_\_\_, 31

**21. What comes before 39?**

38  40  41

**22. Which number comes before 15?**

14  16  13

**23. Riddle Time**

I come just after 35. Who am I? \_\_\_\_

**24. If 25 is after 24, what comes after 25? \_\_\_\_**

**25. What number is hiding?**

a) Before 40 → \_\_\_\_

b) After 40 → \_\_\_\_