






Non-Standard Unit of Length

1. Find out the lengths.


a. Your  is _____  long.

b. Your  is _____ sharpeners long.

c. Your  is _____  long.

d. Your  is _____  long.

e. Your  is _____  long.

f. Your  is _____  long.