

Number from Thirty One to Forty

1. Write the numerals of the following number names.

- a. Thirty- six _____
- b. Thirty- one _____
- c. Thirty- nine _____
- d. Thirty- three _____
- e. Thirty- two _____
- f. Forty _____
- g. Thirty- four _____
- h. Thirty- five _____

2. Write the number in Ones and Tens.

a. 33

Ones	Tens

b. 36

Ones	Tens

c. 39

Ones	Tens

d. 38

Ones	Tens

e. 36

Ones	Tens

f. 32

Ones	Tens

3. Fill in the blanks with <, > or =.

31 35

30 38

35 35

34 32

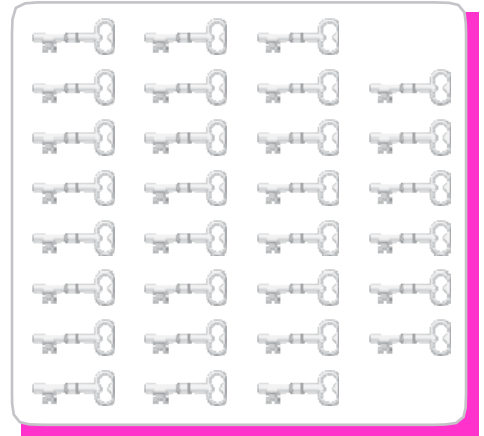
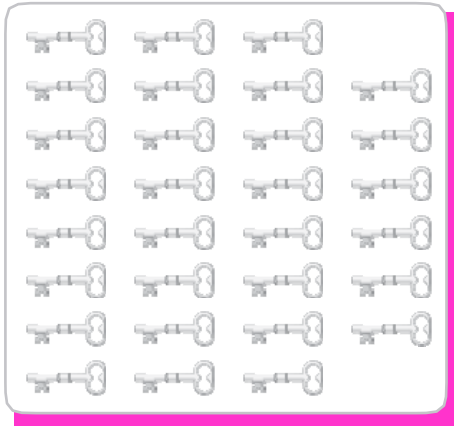
36 39

31 31

38 33

37 40

4. How many keys are there in both the groups?




Is the number of keys the same in both groups?

Yes ☐

No ☐

5. How many cars are there in both the groups? Start counting from top right to bottom left for box A and from the bottom right to top left for box B.



Is the number of cars the same in both boxes?

Yes ☐

No ☐