



# Addition (Introduction)

1. Count and add the objects together. Write the addition sentence also.


a.



and



is equal to




Addition sentence =


+

=


b.



and



is equal to



Addition sentence =

+

=

c.



and



is equal to




Addition sentence =

+


=

2. Count and add the objects. Write the answers in each box.

a.

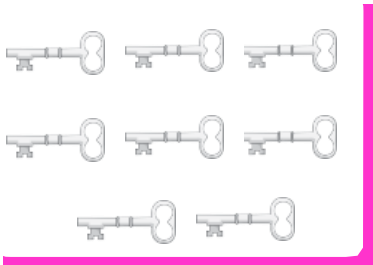


+

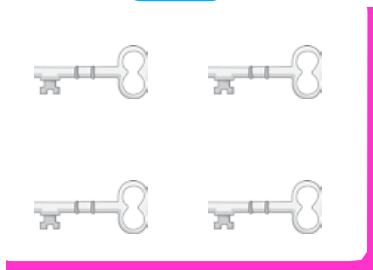


$$\begin{array}{r} 5 \\ + 3 \\ \hline \end{array}$$

b.




+



$$\begin{array}{r} 8 \\ + 4 \\ \hline \end{array}$$

c.




+




$$\begin{array}{r} 9 \\ + 2 \\ \hline \end{array}$$

d.



+



$$\begin{array}{r} 4 \\ + 5 \\ \hline \end{array}$$