

Class: II

Subject: Maths (unsolved sample paper)

Time: 2½ hours

MM: 50

Name: \_\_\_\_\_ class & section: \_\_\_\_\_ Roll.no. \_\_\_\_\_

Invigilator's Name & Signature \_\_\_\_\_

Solve the following problems


1. Which numbers comes next?

16 , 22 , 28 , \_\_\_\_\_ , \_\_\_\_\_.

2. Which of these is the same as 1 day?

A. 4 weeks   B. 24 hours   C. 60 minutes   D. 60 sec

3. Break the rectangle in 3 equal parts and color one-third ( $\frac{1}{3}$ ) of the rectangle.  
Break the circle in 4 equal parts and color three-fourth ( $\frac{3}{4}$ ) of the circle.



4. Which of these is the same as 2 days

A. 2 weeks    B. 24 hours    C. 24 hours    D. 2800 minutes

5. Fill in the missing two numbers?

847, 855, \_\_\_\_, 871 , \_\_\_\_.

6. Vishu bought 6 postcards and 7 birthday cards. How many cards he bought in all?

A.  $7 - 6 = 1$     B.  $7 + 6 = 12$     C.  $6 + 7 = 13$     D.  $7 + 6 = 14$

7. At a wedding reception, there are 458 guests but 324 meals. How many more meals are needed? \_\_\_\_\_

8. Which figure is the same of both sides of the red line?

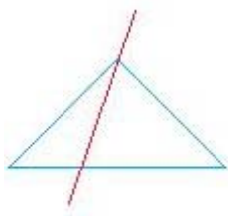


Figure #1

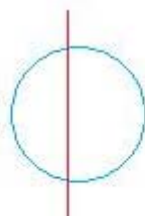


Figure #2

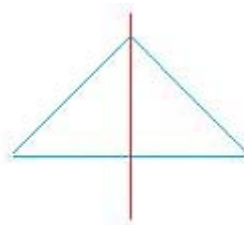


Figure #3




Figure #4

A. Figure #1    B. Figure #2    C. Figure #3    D. Figure#4

9. Tell if the number on the left is less or greater than the number on the right.  
Replace the question mark (?) with < or >

$$87 \quad ? \quad 81$$

$$157 \quad ? \quad 211$$

10. Which number has 5 in the hundreds place and 2 in the ones place?

A. 152    B. 252    C. 521    D. 512

11. For the number 985, what digit is in the

Tens place? \_\_\_\_\_ Ones place? \_\_\_\_\_ Hundreds place \_\_\_\_\_

12. Perform the following additions and subtractions


$$\begin{array}{r} 344 \\ + 132 \\ \hline \end{array}$$

$$\begin{array}{r} 654 \\ + 323 \\ \hline \end{array}$$

$$\begin{array}{r} 987 \\ - 445 \\ \hline \end{array}$$

$$\begin{array}{r} 863 \\ - 752 \\ \hline \end{array}$$

13. Look at the figure below and then write the fractions in the space below:



\_\_\_\_\_



\_\_\_\_\_

14. Tell if the number on the left is less or greater than the number on the right.  
Replace the question mark ( ? ) with <, =, or >

$$42 + 14 \quad ? \quad 56$$

$$65 + 33 \quad ? \quad 90$$

15. Write the following numbers in words

25 \_\_\_\_\_ 48 \_\_\_\_\_

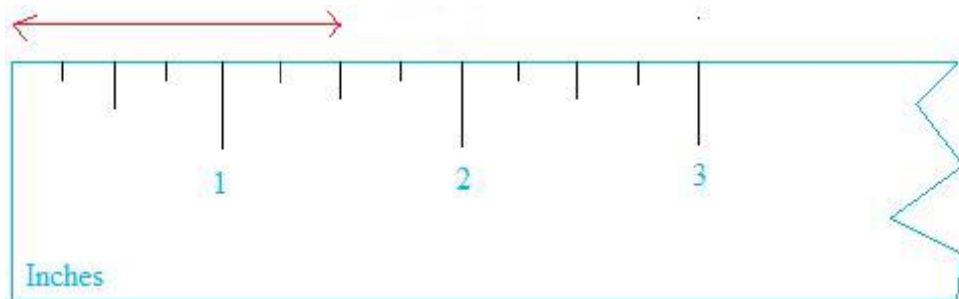
124 \_\_\_\_\_ 256 \_\_\_\_\_

16. What is the geometric name for a figure that looks like the earth?\_\_\_\_\_ Indian tents like tapes?\_\_\_\_\_ a pipe that carry water? \_\_\_\_\_

17. Fill in the blank for the missing numbers

467, 459, \_\_\_\_\_ 443, 435, \_\_\_\_\_

18. What is the measure of the length shown in red below?



19. Which math problem means the same thing as  $20 + 8 = 28$ ? \_\_\_\_\_

A.  $20 - 8 = 12$     B.  $28 - 8 = 20$     C.  $28 - 8 = 18$     D.  $8 - 28 = 20$

20. Math Puzzles: Who am I?

55 + 66 is more than I am. 55 + 63 is less than I am. I am an even number

I have 3 digits and I am the second highest number before the smallest number with 4 digits.