

SUMMATIVE ASSESSMENT-II, 2012

Subject : MATHS

Time : 1 hrs.

Class : IInd

M.M. : 60



Name : Roll No.


Q.1 Fill in the blanks : 8×1/2=4


1. 2 groups of 8 are _____
2. 7 × 8 = _____
3. We use _____ to measure the thickness of a book.
4. The weight of a packet of biscuits is measured in _____ .
5. Complete the pattern
● ● ● ● ● ● ● ● _____
6. One rupee = _____ paise

Q.2 Match the following : 8×1/2=4

1. Height of a building


2. 

Metre
3. 

Curved line
4. 

Cuboid
5. Minute hand

Long hand
6. 60 Seconds

Slanting line
7. Rupee 1

Four 25 paise coins
- One minute

Cont....

Q.3 Very short answers.

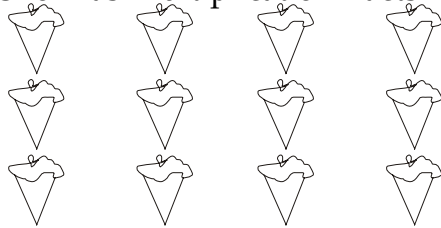
$10 \times 1\frac{1}{2} = 15$

1. Multiply

(a)
$$\begin{array}{r} 36 \\ \times 7 \\ \hline \end{array}$$

(b)
$$\begin{array}{r} 84 \\ \times 3 \\ \hline \end{array}$$

2. Show as multiplication Facts

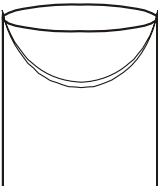


_____ \times _____ = _____

3. Circle the correct capacity



200 ml / 200 l



5 ml / 5 l



7 cm / 7 m

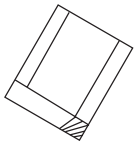
4. Decide which unit you will use

(a) A sack of potatoes _____. (ml / kg / km)

(b) A bottle of ink _____. (ml / l / mm)

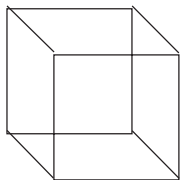
5. Write R if it rolls, S if it slides, R and S, if it can do both







6.



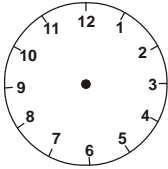
(a) Name the shape = _____

(b) Number of Sides = _____

(c) Number of corners = _____

7. Draw both hands of the clock to show the time.

9 : 30




8. Draw the least number of notes and coins needed




Rs 17

9. Find the total cost needed to buy this things



Rs 12



Rs 14

Tens	Ones

+

10. Make Rs 5. Use onl

Re1

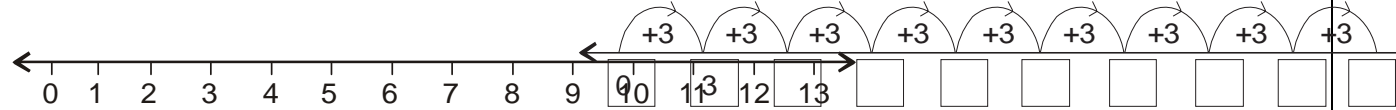
Rs2

 coins

Q.4 Short answers.

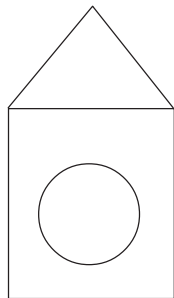
1. Show the jump on the number line and complete the multiplication sentence

4 × 3 = _____



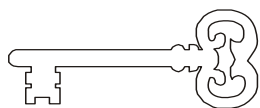
2. Fill inthe boxes by skip counting

3. Look at the picture given below. Count and write number of lines of each kind.

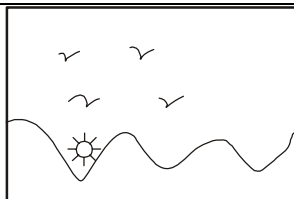


- Sleeping lines _____
- Slanting lines _____
- Curved lines _____
- Standing lines _____

4. Choose the correct one.

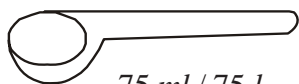


5 g / 5 kg



20 cm / 20 m

5.



75 ml / 75 l



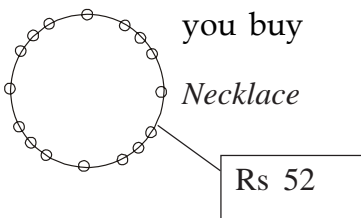
200 ml / 2 l

6. Do as directed

(a) Rs 7 6
 + Rs 3 2

(b) Rs 8 9
 - Rs 4 2

7. Subtracting money



you buy

Necklace

Rs 52

you give

Rs 50

Rs 10

your change

Q.5 Long Answers

$4 \times 2\frac{1}{2} = 10$

1. A book has 14 pages. How many pages in 8 such books

_____ pages

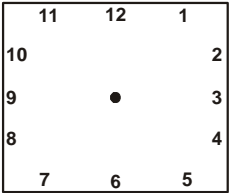
2. Name the months which have 30 days.

3. Draw the notes and coins needed

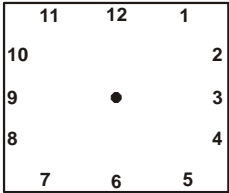
Rs 8

Rs 23

4. Draw the hands of the clock to the given time.



5 : 30



3 o'clock

Q.6 Very long answers

3×3=9

1. Priya has made 4 cakes. She cuts each cake into 5 pieces. How many pieces of cakes are there in all ?

× =

pieces

2. Look at the calender to answer the questions given below.

SEPTEMBER						
Mon	Tue	Wed	Thu	Fri	Sat	Sun
		1	2	3	4	5
6	7	8	9	10	11	12
13	14	15	16	17	18	19
20	21	22	23	24	25	26
27	28	29	30			

(a) How many Tuesdays are there in September ?

(b) What day is it on 22nd September ?

(c) What is the date on Second Saturday of September ?

3. Read this table and answer the following questions.

Name of Fruits	No. of Fruits
Oranges	8
Mangoes	3
Apples	2
Bananas	3

(a) Which fruit is most in muber ?

(b) Which fruit is least in number ?

(c) How many apples and bananas in all ?
