

SUMMATIVE ASSESSMENT-II

Class: III

EVS

Maximum Mark-50

Name: _____ **Roll No.** _____

COMPETENCY	OBSERVATION	IDENTIFICATION	DISCOVERING FACTS
GRADE			

Invigilator's Sign. _____ .


Examiner's Sign. _____ .

OBSERVATION

I. Answer the following questions in one word. 1. Observe and write the name of these symbols.



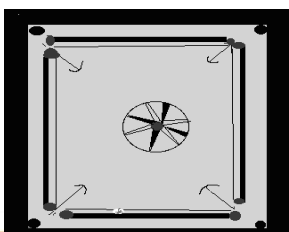
2. Observe and write the name of these dresses.



3. Observe and name it.



(4) How many players are needed to play these games?






Cricket

(5) Give any two examples of temporary house.

(1) _____ (2) _____

(6) Complete this food chain.



(7)



II. Answer the following questions in short.

(8) Write any four types of houses.

1) 2) _____

3) 4) 9) What kind of problems do people have in old age?

(10) Write any five natural things.

1) 2) 3) _____

4) 5) _____

(11) What are living things?

III. Answer the following questions briefly:

(12) Write the steps involved in making cotton cloth.



IDENTIFICATION


IV. Read and draw.

(13) Book behind the baby

(14) Chair in front of the baby

(15) Tree on left side of baby

(16) Animal on right side of baby.



(17) Name any two indoor games.

(1) _____ (2) _____

V. Answer the following questions in short.

(18) Name the animals which can,

(b) eat us. 1. _____ 2. _____

(19) Write the difference between joint family and nuclear family.

Joint family	Nuclear family
_____	_____
_____	_____
_____	_____
_____	_____

(20) How can we reuse the water? Give any two simple ways.

(21) What is a map?

(22) Write any four mathematical symbols you have learnt.

1) 2) _____

3) 4) _____

VI. Answer the following questions briefly

(23) Besides drinking, how is water used in your house? (Clue: Uses of water)



(1) _____

(2) _____

(3) _____

(4)

DISCOVERING FACTS

VII. Fill in the blanks:

(24) Cotton cloth is good to wear in season.

(25) The sun rises in the direction.


(26) Tanka is a way of collecting.

(27) is mostly used by the travellers and soldiers.

(28) script is read by running the fingers on the raised dots.

VIII. Answer the following questions in short

(29) Write your full home address in the Post card given below.

	<table border="1"><tr><td></td><td></td><td></td><td></td><td></td><td></td></tr></table>					

(30) Write the difference between living things and non living things.

Living things	Non living things
_____	_____
_____	_____
_____	_____
_____	_____

(31) Enlist the material used to make kaccha house.

((1) _____

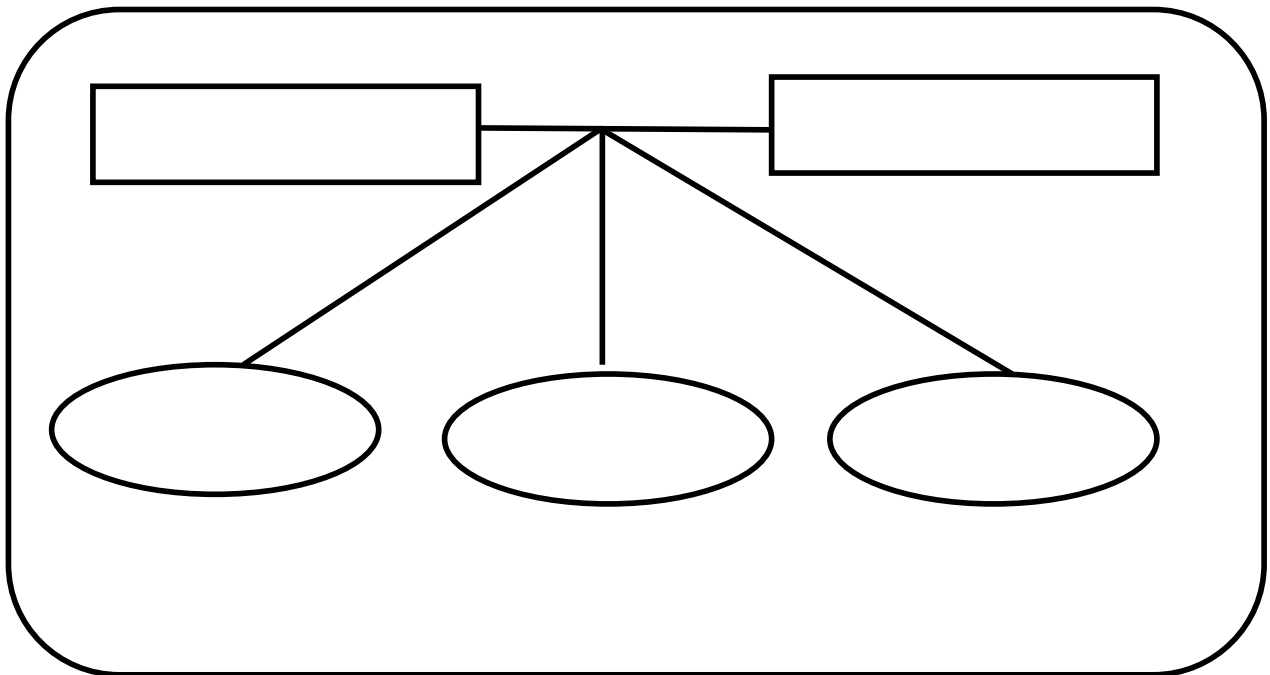
(2) _____

(3) _____

(4) _____



(32) Draw your family tree.



(33) Write any four features of living things.

IX. Answer the following questions briefly

(34) Draw any three types of house, name it and write a sentence about each.



1.Name:



2.Name:



3.Name:
