

Mathematics

(www.tiwariacademy.com)

(Chapter - 5) (Understanding Elementary Shapes)

(Class - VI)

Exercise 5.9

Question 1:

Match the following:

(a) Cone

(b) Sphere

(c) Cylinder

(d) Cuboid

(e) Pyramid

Give two example of each shape.

Answer 1:

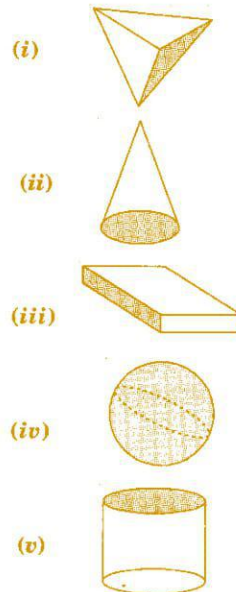
(a) Cone

(b) Sphere

(c) Cylinder

(d) Cuboid

(e) Pyramid



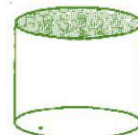
(ii)



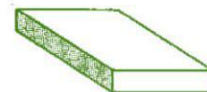
(iv)



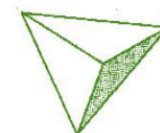
(v)



(iii)



(i)



Question 2:

What shape is:

(a) Your instrument box?

(b) A brick?

(c) A match box?

(d) A road-roller?

(e) A sweet laddu?

Answer 2:

(a) Cuboid

(b) Cuboid

(c) Cuboid

(d) Cylinder

(e) Sphere

www.tiwariacademy.com

A Free web support in Education