

## Constable (GD) in CAPFs, NIA, SSF and Rifleman (GD) in Assam Rifles Examination, 2018

Roll No. :	www.examstocks.com
Registration No.	www.examstocks.com
Name :	www.examstocks.com
Exam Venue :	Ion Digital Zone IDZ1 Mundka
Exam Time :	12:30 PM - 2:00 PM
Exam Date :	05/03/2019

### Section : General Section


**Q.1** Four words have been given out of which three are alike in some manner, while one is different. Choose the odd one.





- Ans** ☒ 1. Cargo  
☒ 2. Trolley  
☒ 3. Tempo  
☒ 4. Truck

Question ID : 9895808391  
Chosen Option : 1

**Q.2** Which of the following answer figure will complete the given figure?

Question figure:



- Ans** ☒ 1.   
☒ 2.   
☒ 3.   
☒ 4. 

Question ID : 9895808408  
Chosen Option : 3

**Q.3** If 'q' stands for '+', 'y' stands for '-', 'z' stands for '÷' and 'p' stands for 'x', then the value of :

20 p 2 q 6 y 5

- Ans  1. 41  
 2. 31  
 3. 35  
 4. 45

Question ID : 9895808407  
Chosen Option : 1

**Q.4** Dates of birth of some persons are given below. Find out the date of birth of the oldest person:

- A. 12.08.1989  
B. 13.09.1991  
C. 19.06.1991  
D. 20.02.1989  
E. 22.03.1991  
F. 20.01.1991  
G. 20.12.1989

- Ans  1. B  
 2. C  
 3. G  
 4. D

Question ID : 9895808398  
Chosen Option : 4





**Q.5** The statements below are followed by four conclusions labeled I, II, III and IV. Assuming that the information in the statements is true, even if it appears to be at variance with generally established facts, decide which conclusion(s) logically and definitely follow(s) from the information given in the statements.

**Statements:**

- Some Linear Equations are Quadratic Equations.  
All Quadratic Equations are Algebraic Equations.

**Conclusions:**

- I. All Linear Equations are Algebraic Equations.  
II. Some Algebraic Equations are Linear Equations.  
III. Some Algebraic Equations are Quadratic Equations.  
IV. All Quadratic Equations are Linear Equations.

- Ans  1. Only I and II follows.  
 2. Only III follows.  
 3. Only I follows.  
 4. Only II and III follow.

Question ID : 9895808400  
Chosen Option : 4

Q.6 Select the option that is related to the third term in the same way as the second term is related to the first term.

Bees : Hum :: Snakes : ?

Ans

- ☒ 1. Hiss
- ☐ 2. Hoot
- ☐ 3. Roar
- ☐ 4. Talk

Question ID : 9895808393  
Chosen Option : 1

Q.7 If UPSIDE is coded as 74, then SHARKS will be coded as:

Ans

- ☐ 1. 68
- ☐ 2. 72
- ☐ 3. 77
- ☒ 4. 76

Question ID : 9895808396  
Chosen Option : 2

Q.8 Select the correct option that will fill in the blank and complete the series.

Mhz, Ngy, Ofx, Pew, \_\_\_\_\_

Ans

- ☐ 1. Qrm
- ☐ 2. Rrn
- ☒ 3. Qdv
- ☐ 4. Qqn

Question ID : 9895808389  
Chosen Option : 3

Q.9 Select the option that is related to the third term in the same way as the second term is related to the first term.

Lion : Roar :: Elephant : ?

Ans

- ☐ 1. Bark
- ☐ 2. Bray
- ☒ 3. Trumpet
- ☐ 4. Grunt

Question ID : 9895808392  
Chosen Option : 4

Q.1  
0

Find the missing number from the below options.

72		18
	49	
24		17

42		36
	?	
29		31

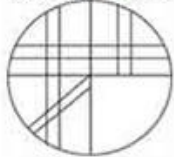
- Ans
- ☒ 1. 20
  - ☒ 2. 18
  - ☒ 3. 36
  - ☒ 4. 24

Question ID : 9895808406

Chosen Option : 2

Q.1  
1 Which of the following answer figure will complete the given figure?

Questions Figure:



- Ans
- ☒ 1.
  - ☒ 2.
  - ☒ 3.
  - ☒ 4.

Question ID : 9895808409

Chosen Option : 4

Q.1  
2 Choose the odd one out from the given alternatives.

- Ans
- ☒ 1. 78 : 4
  - ☒ 2. 72 : 6
  - ☒ 3. 39 : 3
  - ☒ 4. 56 : 4

Question ID : 9895808405

Chosen Option : 1

Q.1

3 Find the related numbers-pair from the given alternatives.

12 : 156 :: ?

- Ans
- ☒ 1. 10 : 101
  - ☒ 2. 15 : 340
  - ☒ 3. 10 : 110
  - ☒ 4. 7 : 50

Question ID : 9895808404  
Chosen Option : 3

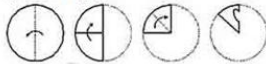
Q.1 In a queue, Lily is eighteenth from the front while Mini is sixteenth from the back. If Nisha is twenty- fifth from the front and is exactly in the middle of Lily and Mini, then how many persons are there in the queue?

- Ans
- ☒ 1. 47
  - ☒ 2. 45
  - ☒ 3. 48
  - ☒ 4. 46

Question ID : 9895808399  
Chosen Option : 1

Q.1 A piece of paper is folded and cut as shown below in the question figures from the given answer figures, indicate the pattern that it will appear when it is opened?

Questions Figure:



Ans


- ☒ 1.
- ☒ 2.
- ☒ 3.
- ☒ 4.

Question ID : 9895808412  
Chosen Option : 3

Q.1  
6

Choose the option figure in which the problem figure is hidden/embedded.

**Questions Figure:**

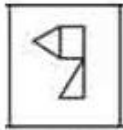


**Ans**

✗ 1.



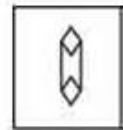
✗ 2.



✓ 3.



✗ 4.



Question ID : **9895808410**  
Chosen Option : **3**

**Q.1**  
7 In a certain code ROHIT is written as "TQJKV", how will COUNTRY be coded?

**Ans**

✗ 1. EQWPUTA

✗ 2. EQWVPTE

✗ 3. EQWVPAT

✓ 4. EQWPVTA

Question ID : **9895808395**  
Chosen Option : **4**

**Q.1**  
8 Four letter clusters have been given out of which three are alike in some manner, while one is different. Choose the odd one.

**Ans**

✓ 1. CFJ

✗ 2. GJM

✗ 3. TWZ


✗ 4. DGJ

Question ID : **9895808390**  
Chosen Option : **1**

**Q.1**  
9 Select the Venn diagram that best illustrates the relationship between the three given classes.

**Girls, Healthy, Trains**

**Ans**



Question ID : 9895808413  
Chosen Option : 1

Q.2 Select the correct option that will fill in the blank and complete the series.

1331, 121, 2197, 169, 3375, \_\_\_\_\_

- Ans
- ✗ 1. 216
  - ✗ 2. 215
  - ✓ 3. 225
  - ✗ 4. 205

Question ID : 9895808402  
Chosen Option : 3

Q.2 A, B, C, D, E, F, G and H are sitting around a circle facing at the centre. E, is second to the left of F and third to the right of A. B is third to the right of G who is not an immediate neighbour of E or F. C is second to the right of B. D is to the immediate left of A and third to the left of H.

Who is the fifth to the right of C?

- Ans
- ✗ 1. H
  - ✗ 2. G
  - ✗ 3. B
  - ✓ 4. E

Question ID : 9895808397  
Chosen Option : 2

Q.2 Select the correct option that will fill in the blank and complete the series.

37, 26, 39, 24, 41, \_\_\_\_\_

- Ans
- ✓ 1. 22



✗ 2. 26

✗ 3. 23

✗ 4. 25

Question ID : 9895808403

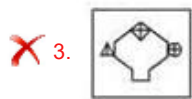
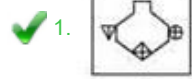
Chosen Option : 1

**Q.2**  
3 If a mirror is placed on MN line, then which of the answer figures will be the right image of the given figure?

Questions Figure:



Ans



Question ID : 9895808411

Chosen Option : 1

**Q.2**  
4 The statements below are followed by two conclusions labeled I and II. Assuming that the information in the statements is true, even if it appears to be at variance with generally established facts, decide which conclusion(s) logically and definitely follow(s) from the information given in the statements.

**Statements:**

All rivers are mountains.

All forests are mountains.

**Conclusion:**

I. Some forests are river.

II. No forest is a river.

Ans ✗ 1. Neither conclusion I nor II follows

✗ 2. Only conclusion II follows

✗ 3. Only conclusion I follows

✓ 4. Either conclusion I or II follows

Question ID : 9895808401

Chosen Option : 4

**Q.2**  
5 Select the option that is related to the third term in the same way as the second term is related to the first term.

pRSq : tVWu :: iKLj : ?

Ans ✗ 1. MrsQ



☒ 2. MopN

☒ 3. mRSq

☒ 4. mOPn

Question ID : 9895808394  
Chosen Option : 4

Q.2  
6 Minimum Support Price for 2018-19 for Maize is set at \_\_\_\_\_.

Ans ☒ 1. ₹ 2,430 per quintal

☒ 2. ₹ 1,950 per quintal

☒ 3. ₹ 1,700 per quintal

☒ 4. ₹ 5,150 per quintal

Question ID : 9895807463  
Chosen Option : 2

Q.2  
7 The Charter Act of 1833 made the Governor-General of \_\_\_\_\_ as the Governor-General of India and vested in him all civil and military powers.

Ans ☒ 1. Oudh State

☒ 2. Bengal

☒ 3. Berar Province

☒ 4. United Provinces

Question ID : 9895807466  
Chosen Option : 2

Q.2  
8 The Maithon Dam is in which state?

Ans ☒ 1. Chhattisgarh

☒ 2. Jharkhand

☒ 3. Odisha

☒ 4. Madhya Pradesh

Question ID : 9895807472  
Chosen Option : 3

Q.2  
9 Which amendment to the constitution introduced the Goods and Services Tax (GST)?

Ans ☒ 1. 103rd Constitution Amendment Act, 2018

☒ 2. 73rd Constitution Amendment Act of 2003

☒ 3. 101st Constitution Amendment Act, 2016

☒ 4. 92nd Constitution Amendment Act of 2003

Question ID : 9895807465

Chosen Option : 3

Q.3 Which Indian was crowned Miss World Continental Queen of Beauty—Asia & Oceania in 1999?

0

- Ans
- ☒ 1. Dia Mirza
  - ☒ 2. Yukta Mookhey
  - ☐ 3. Reita Faria
  - ☐ 4. Priyanka Chopra

Question ID : 9895807460

Chosen Option : 2

Q.3 Which team won in the 2018 Pro Wrestling League finals?

1

- Ans
- ☒ 1. Punjab Royals
  - ☐ 2. Delhi Sultans
  - ☐ 3. Haryana Hammers
  - ☐ 4. Veer Marathas

Question ID : 9895807456

Chosen Option : 3

Q.3 Name the highest peak of the Satpura range.

2

- Ans
- ☒ 1. Dhupgarh
  - ☐ 2. Kalsubai
  - ☐ 3. Doddabetta
  - ☐ 4. Anamudi

Question ID : 9895807473

Chosen Option : 1

Q.3 Moment of inertia of a thin rod of mass 'M' and length 'L' about the axis perpendicular to the rod and passing through its centre is \_\_\_\_\_.

3

- Ans
- ☐ 1.  $ML^2/4$
  - ☐ 2.  $ML^2/6$
  - ☒ 3.  $ML^2/12$
  - ☐ 4.  $ML^2/2$

Question ID : 9895807467

Chosen Option : 4

Q.3 Name the class of folk songs of Goa, usually sung to mourn the death of the loved ones.

4

- Ans
- ☐ 1. Sumangali
  - ☒ 2. Banvarh

- ☒ 3. Gha To Kito
- ☒ 4. Khubakeshei

Question ID : 9895807453  
Chosen Option : 1

Q.3  
5 The formula of Cyanogen is \_\_\_\_\_.

- Ans ☒ 1.  $\text{CH}_3\text{OCN}$
- ☒ 2.  $\text{C}_2\text{N}_2$
- ☒ 3.  $\text{CH}_2\text{CHCN}$
- ☒ 4.  $\text{CH}_3\text{CN}$

Question ID : 9895807469  
Chosen Option : 2

Q.3  
6 The coccyx is part of the \_\_\_\_\_.

- Ans ☒ 1. spine
- ☒ 2. shoulder girdle
- ☒ 3. arm
- ☒ 4. leg

Question ID : 9895807471  
Chosen Option : 1

Q.3  
7 Parliamentary form of government as laid down in the Indian Constitution is influenced by the constitution of \_\_\_\_\_.

- Ans ☒ 1. United Kingdom
- ☒ 2. Australia
- ☒ 3. United States
- ☒ 4. Ireland

Question ID : 9895807464  
Chosen Option : 1

Q.3  
8 Name the Sanskrit scholar who was awarded the Bharat Ratna?

- Ans ☒ 1. Madan Mohan Malaviya
- ☒ 2. Pandurang Vaman Kane
- ☒ 3. Purushottam Das Tandon
- ☒ 4. Bidhan Chandra Roy

Question ID : 9895807458  
Chosen Option : 3

Q.3 \_\_\_\_\_ alloy consists of copper and tin.

9

- Ans ☒ 1. Bell Metal  
☐ 2. Solder  
☐ 3. Rose Metal  
☐ 4. German silver

Question ID : 9895807470

Chosen Option : 1

Q.4  
0 Which of the following dances is a dance form from Chhattisgarh?

- Ans ☒ 1. Raut Nacha  
☐ 2. Chiraw  
☐ 3. Ottam Thullal  
☐ 4. Macha

Question ID : 9895807455

Chosen Option : 1

Q.4  
1 Which of the following is an autobiography by former Minister in charge of External Affairs, Kunwar Natwar Singh?

- Ans ☐ 1. Courage and Conviction  
☐ 2. Where Have I Been?  
☐ 3. Ace Against Odds  
☒ 4. One Life is not Enough

Question ID : 9895807459

Chosen Option : 2

Q.4  
2 The Kila Raipur Rural Olympics is held annually in between January and February near \_\_\_\_\_.

- Ans ☐ 1. Gwalior  
☒ 2. Ludhiana  
☐ 3. Vadodara  
☐ 4. Aizwal

Question ID : 9895807454

Chosen Option : 3

Q.4  
3 It was stated in the Union Budget 2018, that the Ujjwala Yojana, the free LPG connection scheme would be expanded to \_\_\_\_\_ crore women.

- Ans ☒ 1. eight  
☐ 2. six  
☐ 3. two  
☐ 4. four

Question ID : 9895807462

Chosen Option : 2

Q.4  
4 Chandragupta I was succeeded by his son \_\_\_\_\_.

- Ans
- ☒ 1. Samudragupta
  - ☐ 2. Bhanugupta
  - ☐ 3. Skandagupta
  - ☐ 4. Purugupta

Question ID : 9895807475

Chosen Option : 1

Q.4  
5 The origin of the sun was approximately how many years before the present age?

- Ans
- ☒ 1. 4.6 billion years
  - ☐ 2. 10.6 billion years
  - ☐ 3. 1.5 billion years
  - ☐ 4. 2.4 billion years

Question ID : 9895807474

Chosen Option : 1

Q.4  
6 India defeated which team to win the Nidahas Trophy 2018 cricket Tri-Series Final played in March 2018?

- Ans
- ☐ 1. South Africa
  - ☐ 2. West Indies
  - ☒ 3. Bangladesh
  - ☐ 4. England

Question ID : 9895807457

Chosen Option : 3

Q.4  
7 Which British retired Civil Service Officer took the initiative to convene the first meeting of the Indian National Union?

- Ans
- ☐ 1. John Morley
  - ☐ 2. Edwin Montagu
  - ☒ 3. Allan Octavian Hume
  - ☐ 4. Gilbert Elliot

Question ID : 9895807476

Chosen Option : 3

Q.4  
8 The Economic Survey report 2017-18 stated that the Services sector growth for FY18 was likely to be at \_\_\_\_\_.

- Ans
- ☒ 1. 8.30%
  - ☐ 2. 6.50%

☒ 3. 9.60%

☒ 4. 7.10%

Question ID : 9895807461  
Chosen Option : 4

Q.4  
9 Farad is the unit of \_\_\_\_\_.

Ans ☒ 1. electric conductance

☒ 2. capacitance

☒ 3. magnetic flux

☒ 4. magnetic flux density

Question ID : 9895807468  
Chosen Option : 3

Q.5  
0 In Battle of Khatoli (1517) Rana Sanga of Mewar defeated Sultan of Delhi, \_\_\_\_\_ Lodhi and imprisoned him and then released him after collecting ransom.

Ans ☒ 1. Bahlul Khan

☒ 2. Qutb-ud-din

☒ 3. Ibrahim

☒ 4. Sikandar

Question ID : 9895807477  
Chosen Option : 4

Q.5  
1 The mode of the data  
26, 32, 26, 28, 26, 24, 31, 24 is:

Ans ☒ 1. 28

☒ 2. 24

☒ 3. 31

☒ 4. 26

Question ID : 9895807784  
Chosen Option : 4

Q.5  
2 What should come in place of the question mark (?) in the following question?

$$[(16 \div 4) \times 4] \div 4 = ?$$

Ans ☒ 1. 2

☒ 2. 5

☒ 3. 4

☒ 4. 3

Question ID : 9895807779  
Chosen Option : 3



**Q.5** 3 Ajay can row his boat in still water, at a speed of 6 kmph. If the speed of the stream is 4 kmph, how long will he take to a distance of 30 km downstream?

- Ans
- ☐ 1. 2 hours
  - ☐ 2. 5 hours
  - ☐ 3. 4 hours
  - ☒ 4. 3 hours

Question ID : 9895807796

Chosen Option : 4

**Q.5** 4 An inlet pipe takes 8 hours to fill a tank. An outlet pipe takes 12 hours to empty it. If both pipes are opened simultaneously, in how many hours will the tank be filled?

- Ans
- ☐ 1. 36
  - ☐ 2. 8
  - ☒ 3. 24
  - ☐ 4. 12

Question ID : 9895807794

Chosen Option : 3

**Q.5** 5 If the profit made by a merchant on selling 45 m of cloth is equal to the selling price of 5m of cloth, then his profit percentage is:

- Ans
- ☐ 1. 9.09%
  - ☒ 2. 12.5%
  - ☐ 3. 11.11%
  - ☐ 4. 10%

Question ID : 9895807786

Chosen Option : 2

**Q.5** 6 Two parallelogram stand on equal bases and between the same parallel. The ratio of their areas is:

- Ans
- ☒ 1. 1 : 1
  - ☐ 2. 2 : 1
  - ☐ 3. 1 : 3
  - ☐ 4. 1 : 2

Question ID : 9895807798

Chosen Option : 1

**Q.5** 7 Rajaram purchased a certain amount of wheat. If he sold one-fourth of the wheat at a profit of 12%, then the profit percent he needs to make on the remaining wheat to make an overall profit of 15% is:

- Ans
- ☐ 1. 18%
  - ☒ 2. 16%
  - ☐ 3. 15%
  - ☐ 4. 20%

Question ID : 9895807787

Chosen Option : 2



Q.5  
8 Which of the following is the greatest among all?

- Ans
- ☒ 1. 8% discount on marked price ₹400
  - ☒ 2. 12% discount on marked price ₹240
  - ☒ 3. 7% discount on marked price ₹500
  - ☒ 4. 10% discount on marked price ₹320

Question ID : 9895807783

Chosen Option : 3

Q.5  
9 Sanjay scored 75 out of 150 marks in his mid-term exam and 105 out of 150 in his annual exam. The percentage increase in his marks is:

- Ans
- ☒ 1. 30%
  - ☒ 2. 45%
  - ☒ 3. 50%
  - ☒ 4. 40%

Question ID : 9895807785

Chosen Option : 4

Q.6  
0 The average marks of 42 students in an examination, was 64. Later it was found that the marks of three students were misread as 72, 58 and 44 instead of the actual marks 64, 42 and 26 respectively. What is the correct average marks?

- Ans
- ☒ 1. 61
  - ☒ 2. 62
  - ☒ 3. 63
  - ☒ 4. 60

Question ID : 9895807781

Chosen Option : 3

Q.6  
1 If the area of the base of a cone is increased then it becomes 1.96 times of original area. If the volume is increased by:

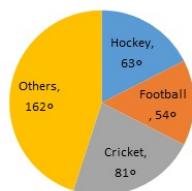
- Ans
- ☒ 1. 141%
  - ☒ 2. 40%
  - ☒ 3. 96%
  - ☒ 4. 100%

Question ID : 9895807799

Chosen Option : 3

Q.6  
2

The pie chart given here shows the spendings of a country on various sports during a particular year. Study the graph carefully and answer the questions given below it.



If the total amount spent on sports during the year be ₹18000, the amount spent on Cricket exceeds that on football by (in ₹) :

- Ans
- ☒ 1. 2800
  - ☒ 2. 1350
  - ☒ 3. 3000
  - ☒ 4. 2550

Question ID : 9895807802  
Chosen Option : 2

Q.6 Five years ago, the ratio of the ages of a father and his son was 5 : 3. Which of the following cannot be the ratio of their ages 10 years from now?

- Ans
- ☒ 1. 3 : 2
  - ☒ 2. 8 : 7
  - ☒ 3. 6 : 5
  - ☒ 4. 7 : 3

Question ID : 9895807789  
Chosen Option : 4

Q.6 In what time does money becomes double at simple interest rate of 12% per annum?

- Ans
- ☒ 1.  $6\frac{1}{3}$  Years
  - ☒ 2.  $6\frac{2}{3}$  Years
  - ☒ 3.  $8\frac{1}{3}$  Years
  - ☒ 4.  $8\frac{2}{3}$  Years

Question ID : 9895807791  
Chosen Option : 3

Q.6 If 30 men can do a job in 30 days, find what part of the job can be completed by 1 man in 1 day.

- Ans
- ☒ 1.  $\frac{1}{30}$
  - ☒ 2.  $\frac{1}{900}$

✗ 3.  $\frac{1}{90}$

✗ 4.  $\frac{1}{60}$

Question ID : 9895807793

Chosen Option : 2

**Q.6** The ratio of length of two trains is 6 : 5 and the ratio of their speed is 3 : 2 The ratio of time taken by them to cross a pole is:

**Ans** ✗ 1. 3 : 5

✓ 2. 4 : 5

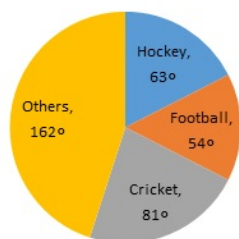
✗ 3. 5 : 6

✗ 4. 5 : 8

Question ID : 9895807795

Chosen Option : 2

**Q.6** The pie chart given here shows the spendings of a country on various sports during a particular year. Study the chart carefully and answer the questions given below it.



How much percent less is spent on Football than that on Cricket?

**Ans** ✓ 1.  $33\frac{1}{3}\%$

✗ 2.  $12\frac{1}{2}\%$

✗ 3.  $20\frac{1}{2}\%$

✗ 4. 25%

Question ID : 9895807801

Chosen Option : 1

**Q.6** A certain sum is divided among p, q and r in a manner that for every rupee that p gets, q gets 75 paise and for every rupee that q gets, r gets 50 paise. If r's share in the total sum is ₹ 36, then find the share of p.

**Ans** ✓ 1. ₹ 96

✗ 2. ₹ 72

✗ 3. ₹ 54

✗ 4. ₹ 60

Question ID : 9895807790

Chosen Option : 1

Q.6  
9 What should come in place of the question mark (?) in the following question?

$$6 \div 6 \times 9 + 6 - 9 \times 6 - 6 + 6 \times 9 = ?$$

- Ans
- ☒ 1. 7
  - ☒ 2. 8
  - ☒ 3. 10
  - ☒ 4. 9

Question ID : 9895807780  
Chosen Option : 4

Q.7  
0 Find the average of  $(5 + 5 + \dots)$  upto 200 times) and  $(8 + 8 + \dots)$  upto 100 times).

- Ans
- ☒ 1. 6.5
  - ☒ 2. 7
  - ☒ 3. 6
  - ☒ 4. 75

Question ID : 9895807782  
Chosen Option : 3

Q.7  
1 If the HCF of two numbers is 6 and their LCM is 120, one such pair of numbers is:

- Ans
- ☒ 1. 24, 30
  - ☒ 2. 18, 40
  - ☒ 3. 12, 60
  - ☒ 4. 12, 40

Question ID : 9895807778  
Chosen Option : 1

Q.7  
2 In a class there are a total of 60 boys and girls. Which of the following can't represent the ratio of the number of boys and girls in the class?

- Ans
- ☒ 1. 2 : 3
  - ☒ 2. 1 : 3
  - ☒ 3. 1 : 6
  - ☒ 4. 3 : 7

Question ID : 9895807788  
Chosen Option : 3

Q.7  
3 A sum borrowed under compound interest doubles itself in 10 years. When will it become fourfold of itself at the same rate of interest?

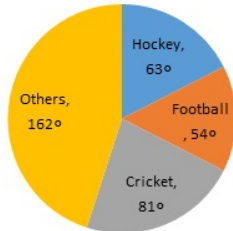
- Ans
- ☒ 1. 24 years
  - ☒ 2. 15 years
  - ☒ 3. 20 years

☒ 4. 40 years

Question ID : 9895807792

Chosen Option : 3

Q.7  
4 The pie chart given here shows the spendings of a country on various sports during a particular year. Study the chart carefully and answer the questions given below:



What percent of the total spendings is spent on others?

- Ans
- ☒ 1. 12.5%
  - ☒ 2. 45%
  - ☒ 3. 25%
  - ☒ 4. 22.5%

Question ID : 9895807800

Chosen Option : 2

Q.7  
5 If the surface area of two spheres is in the ratio 49 : 25, then the ratio of their volumes will be:

- Ans
- ☒ 1. 64 : 27
  - ☒ 2. 25 : 49
  - ☒ 3. 343 : 64
  - ☒ 4. 343 : 125

Question ID : 9895807797

Chosen Option : 4

Section : English Language

Q.1 Select the synonym of the given word.

Delight.

- Ans
- ☒ 1. Grief
  - ☒ 2. Joy
  - ☒ 3. Excitement
  - ☒ 4. Dread

Question ID : 9895808127

Chosen Option : 2

Q.2 Select the word which means the same as the group of words given.

Existing, happening, or operating in the air

- Ans
- ☒ 1. Terrestrial
  - ☒ 2. Aerial
  - ☒ 3. Arboreal
  - ☒ 4. Aquatic

Question ID : 9895808133

Chosen Option : 2

Q.3 Select the synonym of the given word.

Incredible

- Ans
- ☒ 1. Unbelievable
  - ☒ 2. Ordinary
  - ☒ 3. Unspectacular
  - ☒ 4. Impossible

Question ID : 9895808128

Chosen Option : 1

Q.4 Select the most appropriate option to substitute the underlined segment in the given sentence. If there is no need to substitute it, select No substitution required.

Modern farming practices is involving the use of fertilizers and pesticides.

- Ans
- ☒ 1. involved the using of
  - ☒ 2. involve the use of
  - ☒ 3. has involved the use in
  - ☒ 4. No substitution required

Question ID : 9895808118

Chosen Option : 2

Q.5 Select the most appropriate word to fill in the blank.

The French Revolution \_\_\_\_\_ to the end of monarchy in France.

- Ans
- ☒ 1. is leading
  - ☒ 2. were leading
  - ☒ 3. led
  - ☒ 4. was led

Question ID : 9895808119

Chosen Option : 3



**Q.6** Identify the segment in the sentence which contains the grammatical error from the given options.

Scholars have studied the lives of present-day farmer's who practice agriculture.

Ans

- ☒ 1. farmer's
- ☐ 2. the lives of
- ☐ 3. Scholars have
- ☐ 4. practice agriculture

Question ID : 9895808114  
Chosen Option : 4

**Q.7** Identify the segment in the sentence which contains the grammatical error from the given options.

If you plant a seed, you will be noticed that it takes some time to grow.

Ans

- ☐ 1. to grow
- ☐ 2. takes some
- ☒ 3. will be noticed
- ☐ 4. If you

Question ID : 9895808113  
Chosen Option : 3

**Q.8** Select the most appropriate word to fill in the blank.

Minerals are \_\_\_\_\_ occurring substances which have certain physical properties.

Ans

- ☐ 1. thoroughly
- ☒ 2. naturally
- ☐ 3. fictitiously
- ☐ 4. falsely

Question ID : 9895808138  
Chosen Option : 2

**Comprehension:**

In the following passage some words have been deleted. Fill in the blanks with the help of the alternatives given. Select the most appropriate option for each number.





On the morning of 14 July 1789, (1) \_\_\_\_\_ city of Paris was in a state of (2) \_\_\_\_\_. The king had (3) \_\_\_\_\_ troops to move into the city. Rumors spread that he would soon order the army to (4) \_\_\_\_\_ fire upon the citizens. Some 7,000 men and women gathered (5) \_\_\_\_\_ the town hall.

SubQuestion No : 9

**Q.9**



Select the most appropriate option that will fill in the blank number 1.

- Ans  1. No article needed  
 2. an  
 3. the  
 4. a

Question ID : 9895808122  
Chosen Option : 3





**Comprehension:**

In the following passage some words have been deleted. Fill in the blanks with the help of the alternatives given. Select the most appropriate option for each number.

On the morning of 14 July 1789, (1) \_\_\_\_\_ city of Paris was in a state of (2) \_\_\_\_\_. The king had (3) \_\_\_\_\_ troops to move into the city. Rumors spread that he would soon order the army to (4) \_\_\_\_\_ fire upon the citizens. Some 7,000 men and women gathered (5) \_\_\_\_\_ the town hall.

SubQuestion No : 10

Q.1  
0 Select the most appropriate option that will fill in the blank number 2.

- Ans  1. peace  
 2. disagreement  
 3. ease  
 4. alarm

Question ID : 9895808123  
Chosen Option : 4



**Comprehension:**

In the following passage some words have been deleted. Fill in the blanks with the help of the alternatives given. Select the most appropriate option for each number.

On the morning of 14 July 1789, (1) \_\_\_\_\_ city of Paris was in a state of (2) \_\_\_\_\_. The king had (3) \_\_\_\_\_ troops to move into the city. Rumors spread that he would soon order the army to (4) \_\_\_\_\_ fire upon the citizens. Some 7,000 men and women gathered (5) \_\_\_\_\_ the town hall.

SubQuestion No : 11

Q.1  
1 Select the most appropriate option that will fill in the blank number 3.

- Ans  1. commanded  
 2. urged

☒ 3. expected

☒ 4. announced

Question ID : 9895808124

Chosen Option : 1

**Comprehension:**

In the following passage some words have been deleted. Fill in the blanks with the help of the alternatives given. Select the most appropriate option for each number.

On the morning of 14 July 1789, (1) \_\_\_\_\_ city of Paris was in a state of (2) \_\_\_\_\_. The king had (3) \_\_\_\_\_ troops to move into the city. Rumors spread that he would soon order the army to (4) \_\_\_\_\_ fire upon the citizens. Some 7,000 men and women gathered (5) \_\_\_\_\_ the town hall.

SubQuestion No : 12

Q.1  
2 Select the most appropriate option that will fill in the blank number 4.

Ans ☒ 1. open

☒ 2. cross

☒ 3. Spread fire

☒ 4. extinguish

Question ID : 9895808125

Chosen Option : 1

**Comprehension:**

In the following passage some words have been deleted. Fill in the blanks with the help of the alternatives given. Select the most appropriate option for each number.

On the morning of 14 July 1789, (1) \_\_\_\_\_ city of Paris was in a state of (2) \_\_\_\_\_. The king had (3) \_\_\_\_\_ troops to move into the city. Rumors spread that he would soon order the army to (4) \_\_\_\_\_ fire upon the citizens. Some 7,000 men and women gathered (5) \_\_\_\_\_ the town hall.

SubQuestion No : 13

Q.1  
3 Select the most appropriate option that will fill in the blank number 5.

Ans ☒ 1. in front of

☒ 2. besides

☒ 3. across

☒ 4. on top of

Question ID : 9895808126

Chosen Option : 1

Q.1  
4 Select the wrongly spelt word.

- Ans
- ☒ 1. Bracelet
  - ☒ 2. Biannual
  - ☒ 3. Bileive
  - ☒ 4. Brochure

Question ID : 9895808136

Chosen Option : 3

Q.1  
5 Select the wrongly spelt word.

- Ans
- ☒ 1. Auditorum
  - ☒ 2. Analysis
  - ☒ 3. Absolute
  - ☒ 4. Ambition

Question ID : 9895808135

Chosen Option : 1

Q.1  
6 Select the most appropriate option to substitute the underlined segment in the given sentence. If there is no need to substitute it, select No substitution required.

The aquatic animals can breathed under water due to dissolved oxygen.

- Ans
- ☒ 1. can breathe under water
  - ☒ 2. can be breathing in water
  - ☒ 3. could have breathed under water
  - ☒ 4. No substitution required

Question ID : 9895808117

Chosen Option : 1

Q.1  
7 Select the most appropriate word to fill in the blank.

Most workers \_\_\_\_\_ as laborers in factories where their wages were fixed.

- Ans
- ☒ 1. is employed
  - ☒ 2. has employed
  - ☒ 3. were employed
  - ☒ 4. was employ

Question ID : 9895808120

Chosen Option : 3

Q.1  
8 Select the antonym of the given word.

Genuine

- Ans ☒ 1. Thankful  
☒ 2. Fake  
☒ 3. Unhealthy  
☒ 4. Original

Question ID : 9895808130  
Chosen Option : 2

Q.1  
9 Select the meaning of the given idiom.

Fish out of water

- Ans ☒ 1. To shift to a new place  
☒ 2. In a new job  
☒ 3. To be uncomfortable  
☒ 4. To be depressed

Question ID : 9895808132  
Chosen Option : 3

Q.2  
0 Select the most appropriate word to fill in the blank.

Biosphere is a narrow zone of the earth where land, water and air \_\_\_\_\_ with each other to support life.

- Ans ☒ 1. collapse  
☒ 2. interact  
☒ 3. surround  
☒ 4. impose

Question ID : 9895808137  
Chosen Option : 2

Q.2  
1 Identify the segment in the sentence which contains the grammatical error from the given options.

Raw materials are substances that are either found naturally or produce by farmers.

- Ans ☒ 1. found naturally  
☒ 2. produce by  
☒ 3. Raw materials  
☒ 4. substances

Question ID : 9895808115  
Chosen Option : 2

Q.2  
2 Select the word which means the same as the group of words given.

That which can be heard

- Ans ☒ 1. Legible



- ☒ 2. Edible  
☒ 3. Tangible  
☒ 4. Audible

Question ID : 9895808134  
Chosen Option : 4

Q.2 Select the most appropriate option to substitute the underlined segment in the given sentence. If there is no need to substitute it, select No substitution required.

Tissue is a group of cells that are similar to structure and are organised together.

- Ans ☒ 1. that were similarly in  
☒ 2. No substitution required  
☒ 3. that is similarly to  
☒ 4. that are similar in

Question ID : 9895808116  
Chosen Option : 4

Q.2 Select the meaning of the given idiom.

A piece of cake

- Ans ☒ 1. Unrealistic hope  
☒ 2. A small quantity  
☒ 3. A very easy task  
☒ 4. Very tasty

Question ID : 9895808131  
Chosen Option : 3

Q.2 Select the antonym of the given word.

Rational

- Ans ☒ 1. Impatient  
☒ 2. Conscious  
☒ 3. Illogical  
☒ 4. Polite

Question ID : 9895808129  
Chosen Option : 3

Section : Hindi Language

Q.1 दिए गए वाक्य का वह भाग ज्ञात करें जिसमें कोई त्रुटि है।

यह मेरा सौभाग्य है कि आप मेरे घर पधारे और आपका दर्शन हुआ।

Ans

- ☒ 1. और आपका दर्शन हुआ।
- ☒ 2. यह मेरा
- ☒ 3. सौभाग्य है कि
- ☒ 4. आप मेरे घर पधारे

Question ID : 9895806893

Chosen Option : --

Comprehension:

निम्नलिखित गद्यांश के रिक्त स्थानों की पूर्ति गद्यांश के नीचे दिए गए प्रश्नों के अनुसार कीजिए-

डिजिटल इंडिया एक ऐसा प्रोजेक्ट है जिसका \_\_\_\_\_ (1) भारत को एक बेहतर राष्ट्र बनाना है। ये \_\_\_\_\_ (2) देश के जाने माने उद्योगपतियों की मौजूदगी में 1 जुलाई 2015 को इंदिरा गाँधी इंडोर स्टेडियम में शुरू किया गया। 2019 तक इसके पूरा होने की \_\_\_\_\_ (3) है। डिजिटल इंडिया का विज़न तीन प्रमुख क्षेत्रों पर \_\_\_\_\_ (4) है। ये हैं- डिजिटल ढांचा, मांग पर संचालन एवं सेवाएं और \_\_\_\_\_ (5) का डिजिटल सशक्तीकरण।

SubQuestion No : 2

Q.2 गद्यांश में संकेतित रिक्त स्थान (1) के लिए उपयुक्त शब्द होगा।

Ans

- ☒ 1. लक्ष्य
- ☒ 2. इच्छा
- ☒ 3. साधन
- ☒ 4. अभिलाषा

Question ID : 9895806902

Chosen Option : --

Comprehension:

निम्नलिखित गद्यांश के रिक्त स्थानों की पूर्ति गद्यांश के नीचे दिए गए प्रश्नों के अनुसार कीजिए-

डिजिटल इंडिया एक ऐसा प्रोजेक्ट है जिसका \_\_\_\_\_ (1) भारत को एक बेहतर राष्ट्र बनाना है। ये \_\_\_\_\_ (2) देश के जाने माने उद्योगपतियों की मौजूदगी में 1 जुलाई 2015 को इंदिरा गाँधी इंडोर स्टेडियम में शुरू किया गया। 2019 तक इसके पूरा होने की \_\_\_\_\_ (3) है। डिजिटल इंडिया का विज़न तीन प्रमुख क्षेत्रों पर \_\_\_\_\_ (4) है। ये हैं- डिजिटल ढांचा, मांग पर संचालन एवं सेवाएं और \_\_\_\_\_ (5) का डिजिटल सशक्तीकरण।

SubQuestion No : 3

Q.3 गद्यांश में संकेतित रिक्त स्थान (2) के लिए उपयुक्त शब्द होगा।

- Ans
- ☒ 1. वायुयान
  - ☒ 2. महायान
  - ☒ 3. हीनयान
  - ☒ 4. अभियान

Question ID : 9895806903  
Chosen Option : --

Comprehension:

निम्नलिखित गद्यांश के रिक्त स्थानों की पूर्ति गद्यांश के नीचे दिए गए प्रश्नों के अनुसार कीजिए-

डिजिटल इंडिया एक ऐसा प्रोजेक्ट है जिसका \_\_\_\_\_ (1) भारत को एक बेहतर राष्ट्र बनाना है। ये \_\_\_\_\_ (2) देश के जाने माने उद्योगपतियों की मौजूदगी में 1 जुलाई 2015 को इंदिरा गाँधी इंडोर स्टेडियम में शुरू किया गया। 2019 तक इसके पूरा होने की \_\_\_\_\_ (3) है। डिजिटल इंडिया का विज़न तीन प्रमुख क्षेत्रों पर \_\_\_\_\_ (4) है। ये हैं- डिजिटल ढांचा, मांग पर संचालन एवं सेवाएं और \_\_\_\_\_ (5) का डिजिटल सशक्तीकरण।

SubQuestion No : 4

Q.4 गद्यांश में संकेतित रिक्त स्थान (3) के लिए उपयुक्त शब्द होगा।

- Ans
- ☒ 1. उम्मीद
  - ☒ 2. निर्देश
  - ☒ 3. निवेदन
  - ☒ 4. आदेश

Question ID : 9895806904  
Chosen Option : --

Comprehension:



निम्नलिखित गद्यांश के रिक्त स्थानों की पूर्ति गद्यांश के नीचे दिए गए प्रश्नों के अनुसार कीजिए-

डिजिटल इंडिया एक ऐसा प्रोजेक्ट है जिसका \_\_\_\_\_ (1) भारत को एक बेहतर राष्ट्र बनाना है। ये \_\_\_\_\_ (2) देश के जाने माने उद्योगपतियों की मौजूदगी में 1 जुलाई 2015 को इंदिरा गाँधी इंडोर स्टेडियम में शुरू किया गया। 2019 तक इसके पूरा होने की \_\_\_\_\_ (3) है। डिजिटल इंडिया का विज्ञान तीन प्रमुख क्षेत्रों पर \_\_\_\_\_ (4) है। ये हैं- डिजिटल ढांचा, मांग पर संचालन एवं सेवाएं और \_\_\_\_\_ (5) का डिजिटल सशक्तीकरण।

SubQuestion No : 5

Q.5 गद्यांश में संकेतित रिक्त स्थान (4) के लिए उपयुक्त शब्द होगा।

- Ans
- ☒ 1. पठित
  - ☒ 2. लिखित
  - ☒ 3. सूचित
  - ☒ 4. केन्द्रित

Question ID : 9895806905

Chosen Option : --

Comprehension:

निम्नलिखित गद्यांश के रिक्त स्थानों की पूर्ति गद्यांश के नीचे दिए गए प्रश्नों के अनुसार कीजिए-

डिजिटल इंडिया एक ऐसा प्रोजेक्ट है जिसका \_\_\_\_\_ (1) भारत को एक बेहतर राष्ट्र बनाना है। ये \_\_\_\_\_ (2) देश के जाने माने उद्योगपतियों की मौजूदगी में 1 जुलाई 2015 को इंदिरा गाँधी इंडोर स्टेडियम में शुरू किया गया। 2019 तक इसके पूरा होने की \_\_\_\_\_ (3) है। डिजिटल इंडिया का विज्ञान तीन प्रमुख क्षेत्रों पर \_\_\_\_\_ (4) है। ये हैं- डिजिटल ढांचा, मांग पर संचालन एवं सेवाएं और \_\_\_\_\_ (5) का डिजिटल सशक्तीकरण।

SubQuestion No : 6

Q.6 गद्यांश में संकेतित रिक्त स्थान (5) के लिए उपयुक्त शब्द होगा।

- Ans
- ☒ 1. नागरिकों
  - ☒ 2. कलकारखानों
  - ☒ 3. लघु उद्योग

✓ 4. सामान्य वस्तु

Question ID : 9895806906

Chosen Option : --

Q.7 दिए गए वाक्य का वह भाग ज्ञात करें जिसमें कोई त्रुटि है।

ग्रीष्म ऋतु आते ही अनाज खरीदने की व्यवस्था किया जाता है।

Ans ✓ 1. ग्रीष्म ऋतु आते ही

✗ 2. किया जाता है।

✗ 3. की व्यवस्था

✗ 4. अनाज खरीदने

Question ID : 9895806892

Chosen Option : --

Q.8 दिये गये वाक्यांश के लिए एक शब्द दीजिये।

विज्ञान से संबंध रखने वाला

Ans ✓ 1. आविष्कार

✗ 2. ज्ञानी

✗ 3. वैज्ञानिक

✗ 4. अल्पज्ञानी

Question ID : 9895806913

Chosen Option : --

Q.9 दिए गए वाक्य का वह भाग ज्ञात करें जिसमें कोई त्रुटि है।

सूरजकुंड से प्रतिवर्ष बड़ा मेला लगता है।

Ans ✗ 1. प्रतिवर्ष

✓ 2. सूरजकुंड से

✗ 3. लगता है।

✗ 4. बड़ा मेला

Question ID : 9895806891

Chosen Option : --

Q.1 रिक्त स्थान को भरने के लिए उपयुक्त शब्द का चयन करें।

वह खाना \_\_\_\_\_ चुका है।

Ans

- ✓ 1. ठूस
- ✗ 2. खा
- ✗ 3. चुग
- ✗ 4. कर

Question ID : 9895806899  
Chosen Option : --

Q.1  
1 दिए गए शब्द के पर्यायवाची शब्द का चयन करें।

न्यून

Ans

- ✗ 1. पर्याप्त
- ✓ 2. कम
- ✗ 3. अधिक
- ✗ 4. कोण

Question ID : 9895806909  
Chosen Option : --

Q.1  
2 दिए गए वाक्य में रेखांकित खंड को प्रतिस्थापित करने के लिए उपयुक्त विकल्प का चयन करें।

विजय ने अजय का बहुत तिरस्कार किया।

Ans

- ✓ 1. अपमान
- ✗ 2. विश्वास
- ✗ 3. विरोध
- ✗ 4. सम्मान

Question ID : 9895806895  
Chosen Option : --

Q.1  
3 दिए गए शब्द का विलोम चुनें।

साध्य

Ans

- ✓ 1. असाध्य
- ✗ 2. रोगी
- ✗ 3. वैद्य
- ✗ 4. संध्या

Question ID : 9895806908  
Chosen Option : --

Q.1  
4

दिए गए वाक्य में रेखांकित खंड को प्रतिस्थापित करने के लिए उपयुक्त विकल्प का चयन करें।

लक्ष्मण, राम को अपना भाता मानता है।

- Ans
- ☒ 1. आदर्श
  - ☒ 2. शत्रु
  - ☒ 3. मित्र
  - ☒ 4. भाई

Question ID : 9895806896

Chosen Option : --

Q.1  
5 दिए गए वाक्य में रेखांकित खंड को प्रतिस्थापित करने के लिए उपयुक्त विकल्प का चयन करें।

तालिका में उनके प्रकार के फूलों का वर्णन किया गया है।

- Ans
- ☒ 1. सारणी
  - ☒ 2. चित्र
  - ☒ 3. पंक्ति
  - ☒ 4. पत्र

Question ID : 9895806894

Chosen Option : --

Q.1  
6 रिक्त स्थान को भरने के लिए उपयुक्त शब्द का चयन करें।

सफेद रंग \_\_\_\_\_ का प्रतीक है।

- Ans
- ☒ 1. आतंकवाद
  - ☒ 2. हिंसा
  - ☒ 3. शांति
  - ☒ 4. असत्य

Question ID : 9895806898

Chosen Option : --

Q.1  
7 रिक्त स्थान को भरने के लिए उपयुक्त शब्द का चयन करें।

राम आजकल घर \_\_\_\_\_ से आता है।

- Ans
- ☒ 1. दौड़
  - ☒ 2. तेज
  - ☒ 3. देर
  - ☒ 4. जोर

Question ID : 9895806900

Chosen Option : --

Q.1  
8 दिये गये वाक्यांश के लिए एक शब्द दीजिये।

दोपहर से पहले का समय

- Ans
- ☒ 1. मध्याह्न
  - ☒ 2. सायंकाल
  - ☒ 3. अपराह्न
  - ☒ 4. पूर्वाह्न

Question ID : 9895806914

Chosen Option : --

Q.1  
9 दिए गए शब्द का विलोम चुनें।

आधार

- Ans
- ☒ 1. निराधार
  - ☒ 2. सूत्रधार
  - ☒ 3. मूसलाधार
  - ☒ 4. निरपराध

Question ID : 9895806907

Chosen Option : --

Q.2  
0 दिए गए शब्द के पर्यायवाची शब्द का चयन करें।

पार्वती

- Ans
- ☒ 1. विभा
  - ☒ 2. प्रभा
  - ☒ 3. गौरी
  - ☒ 4. आभा

Question ID : 9895806910

Chosen Option : --

Q.2  
1 सही वर्तनी वाले शब्द का चयन करें।

- Ans
- ☒ 1. तोपचि
  - ☒ 2. तौपचि
  - ☒ 3. तोपची
  - ☒ 4. तौपची



Question ID : 9895806916

Chosen Option : --

Q.2  
2 सही वर्तनी वाले शब्द का चयन करें।

- Ans
- ☒ 1. नाशमझी
  - ☒ 2. नासमझी
  - ☒ 3. नसमझी
  - ☒ 4. नासमजी

Question ID : 9895806915

Chosen Option : --

Q.2  
3 निम्नलिखित में से उस विकल्प का चयन करें जो 'गंगा नहाना' मुहावरे का अर्थ व्यक्त करता है।

- Ans
- ☒ 1. धार्मिक हो जाना
  - ☒ 2. तीर्थ यात्रा करना
  - ☒ 3. कठिन कार्य पूरा होना
  - ☒ 4. खूब मेहनत करना

Question ID : 9895806912

Chosen Option : --

Q.2  
4 रिक्त स्थान को भरने के लिए उपयुक्त शब्द का चयन करें।

अतिथि का फूलों की \_\_\_\_\_ से स्वागत किया गया।

- Ans
- ☒ 1. टुकड़ी
  - ☒ 2. गड़ड़ी
  - ☒ 3. माला
  - ☒ 4. गुच्छा

Question ID : 9895806897

Chosen Option : --

Q.2  
5 निम्नलिखित में से उस विकल्प का चयन करें जो 'मक्खियाँ मारना' मुहावरे का अर्थ व्यक्त करता है।

- Ans
- ☒ 1. बेकार बैठना
  - ☒ 2. मक्खियों को मारना
  - ☒ 3. काम में लगे रहना
  - ☒ 4. मक्खियों को तंग करना

Question ID : 9895806911

Chosen Option : --

--	--