

SECOND SUMMATIVE ASSESMENT 2011-12

Subject : **MATHEMATICS**

Time : **3 hrs.**

Class : **IIIRD**

M.M. : **60**

Name Roll No.

Day & Date Marks Obt.

Inv. Sign.

Q.1 Tick the correct answer :-

5x1=5

1. $36 \div 4 = \dots\dots\dots$
 (a) 9 (b) 6 (c) 32 (d) 40 []
2. 8 pizzas were cut into 88 pieces. How many pieces was each pizza cut into ?
 (a) 8 (b) 11 (c) 3 (d) 96 []
3. How can we write two fourths -
 (a) $\frac{2}{4}$ (b) $\frac{4}{2}$ (c) 2-4 (d) 4-2 []
4. Length of pencil is measured in -
 (a) cm (b) l (c) km (d) kg. []
5. The long hand is the hand -
 (a) minute (b) second (c) hour (d) none []

Q.2 Fill in the blanks -

5x1=5

1. 50 p. coins make 1 rupee.
2. $1\text{kg} = \dots\dots\dots \text{gm} + \dots\dots\dots \text{gm}$.
3. A person about 1 m 60 cm tall is cm tall.
4. $\frac{1}{2}$ of 22 =
5. $15 \div 3$ dividend Divisor

3. Match the following :-

4x1=4

- | | |
|--|-------------------|
| (i) $900 \div 3$ | (a) $\frac{3}{4}$ |
| (ii)  | (b) 7 days |
| (iii) Three fourth | (c) $\frac{1}{2}$ |
| (iv) 1 week | (d) 300 |

$$\underline{4 \times 1\frac{1}{2} = 6}$$

(2) Ring the closest measure -

- (3) Write two fraction for each as shown -

unshaded part

(4) $48 \div 4$

Divisor

Divident

Quotient

Q.1 Very short questions -

1x4=4

-

$$\frac{3}{4} \quad \frac{1}{2} \quad \frac{2}{3}$$


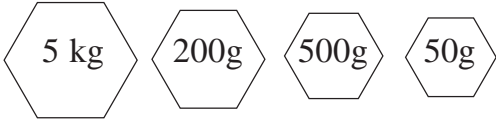
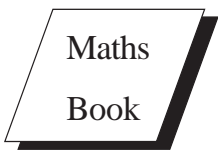
3. Subtract - Rs. 110.00

4. Read the pictograph and answer the questions -

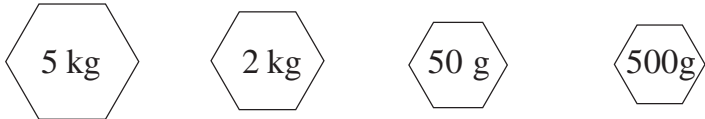
Which is the most popular pet ?

Ans.



1. Mark the weight that you will need to weigh the following -



2 kg 500 g



(2) Shade one half parts -

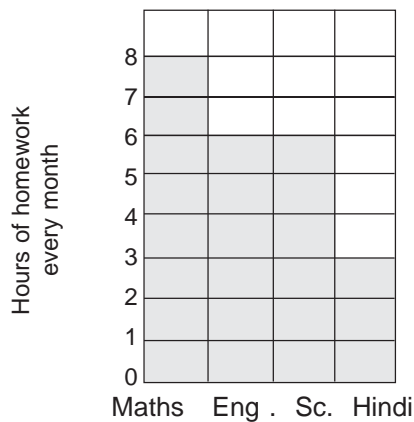


(3) Use the numbers 72, 8, 9 to build all the possible multiplication and division facts.

(4) Add the money and match the correct one.

Rs. 72	Rs. 20	Rs. 20	Rs. 20	50p	
Rs. 60.50	Rs. 100	Rs. 50	Rs.2	Re.1	Re.1
Rs. 154	Rs. 50	Rs. 10	Rs. 5	Rs. 5	Rs.2a

(5) Read the bar graph and answer the questions.



(a) In which subject was the most home work given ?

Ans.

(b) How many hours of Hindi home work was set ?

Ans.

(c) How many hours were spent on science and english together?

Ans.

(3) Long Questions -

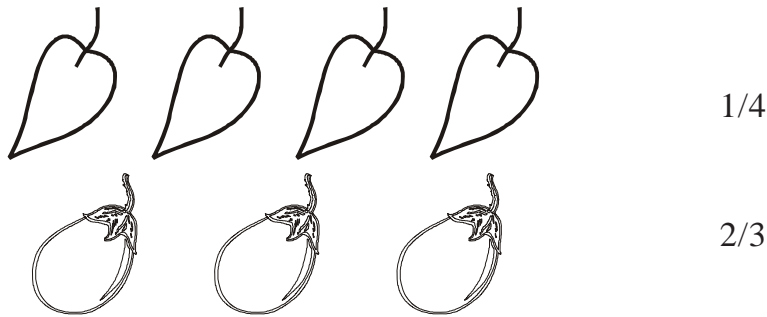
$2\frac{1}{2} \times 5 = 12\frac{1}{2}$

(i) Divide and check your answer -

(a) $650 : 5$ _____

Check =

(ii) Colour to show the fraction -



(iii) What would you use to measure these - Cm, m, or Km ?

(a) Height of building

(b) Length of mouse's tail

(c) Distance from Mumbai to Chennai

(d) Length of a scissors

(e) Length of Saree

(iv) If 7 pencils cost Rs. 84. How much dose one pencil cost ?

(v) This list shows the favourite ice-cream flavour of children of class III.

Ice-Cream flavour	Number of Children
Chocolate	7
Butter Scotch	7
Strawberry	9
Vanilla	4

(a) is the most popular flavour.

(b) more children like strawberry than Vanilla.

(c) and flavours are both equally liked.

(d) There are a total of Children in class III according to the list.

(4) Very long questions -

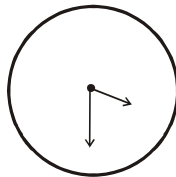
4x4=16

(i) Convert to cm

(a) 3 m

(b) 9 m 90 cm

(ii) (a) Give the time in two ways



(b) Cross out the incorrect one -

(a) Eat breakfast

15 minutes / 15 hours

(b) Sleep at night

8 minutes / 8 hours

(iii) Fill in the restaurant bill and find total spend money.

Item	Cost Per Item	Rs.	P
2 Pizzas	Rs. 50		
2 Sandwiches	Rs. 10		
1 Burger	Rs. 15		
	Total		

(iv) Divide using any method -

(a) $128 : 8$

OR

Kartik had 70 photos. He pasted 8 photos on a page. How many full pages did he have ? How many photos were left over ?

1 1 1