

## SUMMATIVE ASSESSMENT-II, 2012

Subject : **MATHS**

Time : **1 hrs.**

Class : **I<sup>st</sup>**

M.M. : **60**

Name : ..... Roll No. ....


### Q.1 Fill in the blanks :

**$8 \times \frac{1}{2} = 4$**

1. The number before 91 is \_\_\_\_\_
2. The number after 39 is \_\_\_\_\_
3. 8 tens and 6 ones = \_\_\_\_\_
4. 65 = \_\_\_\_\_ tens and \_\_\_\_\_ ones
5. Rs. 5 + Rs. 2 = Rs. \_\_\_\_\_
6. Rs. 10 + Re 1 = Rs. \_\_\_\_\_
7. 80 - 10 = \_\_\_\_\_
8. 40 + 20 = \_\_\_\_\_

### Q.2 Match the following :

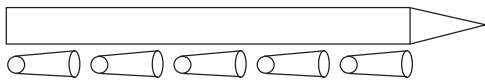
**$8 \times 1 = 8$**

- |                |     |   |
|----------------|-----|---|
| 1. Heavy       | (a) |  |
| 2. Big         | (b) | 4 tens and 3 ones   |
| 3. 43          | (c) | 53  |
| 4. eight seven | (d) | 8   |
| 5. Fifty three | (e) | light   |
| 6. 30 - 10     | (f) | small   |
| 7. 5 + 3       | (g) | 20  |
| 8. cone        | (h) | 87  |

Q.3 Very short :

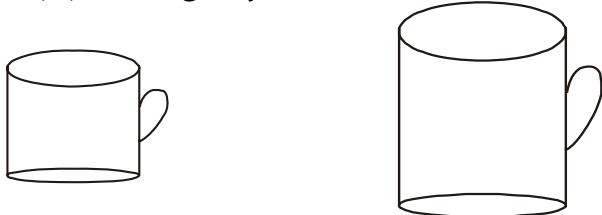
$10 \times 1\frac{1}{2} = 15$

1. How long are these object :



about  clips

2. Tick (✓) the big object :



3. Write the numbers :

- (i) sixty eight = \_\_\_\_\_
- (ii) Ninety = \_\_\_\_\_

4. Give the number :

before

	3 2
	6 7

after

2 5	
7 2	

between

4 3		4 5
1 9		2 1

Add and subtract :

- 5. (i)  $23 + 0 =$  \_\_\_\_\_
- (ii)  $30 + 60 =$  \_\_\_\_\_

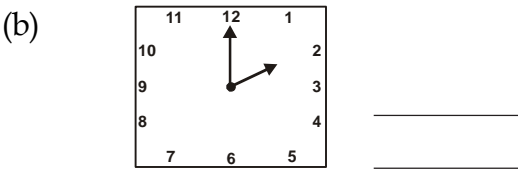
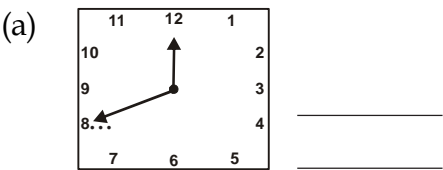
6. T O

(a) 
$$\begin{array}{r} 78 \\ - 14 \\ \hline \end{array}$$

T O

(b) 
$$\begin{array}{r} 85 \\ - 5 \\ \hline \end{array}$$

7. Write time in two ways :



8. Count money with the help of skip counting :

Rs  
2

Rs  
2

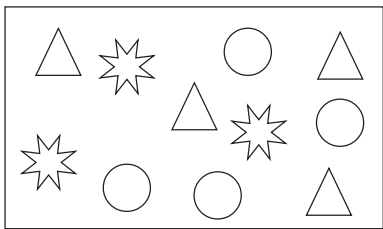
Rs  
2

Rs  
2

= Rs

2 → 4 →    →

9. Count how many of each :



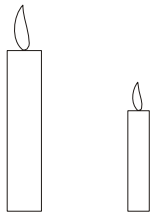
Shapes	Number of Shapes

Q.4 Short questions :


7×2=14

1. Ring the one that is


(a) long



(b) small



2. Circle the one that holds more :



3. Write in words :

52 = \_\_\_\_\_

80 = \_\_\_\_\_

4. Fill the missing numbers :

(a) 89, \_\_\_\_\_, \_\_\_\_\_, 92, \_\_\_\_\_, \_\_\_\_\_

(b) 43, \_\_\_\_\_, \_\_\_\_\_, \_\_\_\_\_, 47, \_\_\_\_\_

5. Addition and subtraction

T O

(a) 5 4

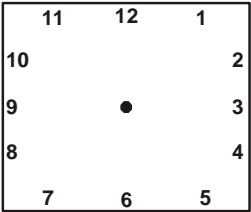
+ 2 4

T O

(b) 7 3

- 6 0

6. Draw the hand to show the time



7 o'clock

7. How much money ?

(a) 

Rs5

 + 

Rs5

 + 

Rs5

 + 

Rs5

 = Rs.

(b) 

Rs 10

 + 

Rs 10

 + 

Rs 10

 + 

Rs 5

 = Rs.

Q.5 Long questions :

$4 \times 2\frac{1}{2} = 10$

1. Complete the pattern

(a) 3, 6, , , , ,

(b) 10, 20, , , , ,

2. (a) Ring the smaller number

68	34
----	----

(b) Rearrange from smallest to biggest

28	64	18	56

$\frac{1}{2} + 2$

3. There are 84 eggs in a tray. Out of that 21 are broken. How many eggs are left ?

Tens	Ones
8	4
2	1

4. Match the following :
- Wednesday

Monday

Tuesday

Thursday

Sunday
- comes after Monday

is the first day of the week

comes before Thursday

is the last day of the week

is between Wednesday and Friday

Q.6 Very long questions :

1. Count and fill in the boxes

5 packets of safety pins each  
and 6 loose ones

Tens	Ones

2. How many boys in both classes together ?

\_\_\_\_\_ boys in I A

\_\_\_\_\_ boys in I B

\_\_\_\_\_ boys in both classes together

Tens	Ones
3	2
+	
2	6

3. Ring the correct amount of money.

(a)

Rs.12

Rs 5

Rs 5

Rs 5

Re 1

Rs 2

(b)

Rs. 7

Rs 5

Rs 5

Re 1

Rs2

\*\*\*\*\*