

Class: I

Subject: Maths (unsolved sample paper)

Time: 2½ hours

MM:50

Name: _____ class & section: _____ Roll.no. _____

Invigilator's Name & Signature _____

Solve the following problems

1. Which number comes next?

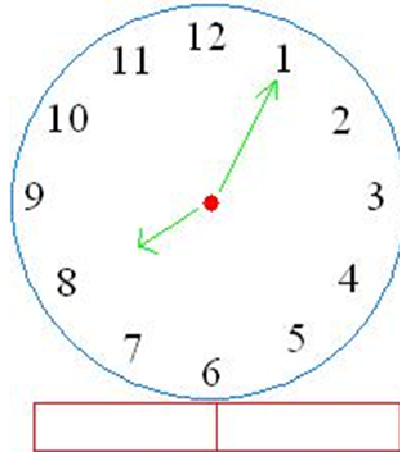
14, 15, 16, 17, _____

A. 19 B. 20 C. 18 D. 12

2. One rupee is equal to how many paise _____

A. 100 paise B. 50 paise C. . 80 paise D. . 90 paise

3. Look at the clock below. What time is it? _____



4. Luke had 12 pencils, but gave away 5 to his best friends. How many pencils does Luke have now? _____.

5. Fill in the missing two numbers?

34, 36, _____, 40, _____.

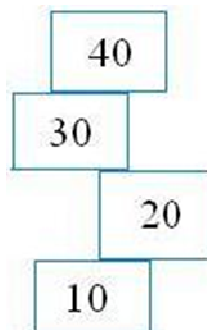
6. 96 is equal to

A. $6 + 96$ B. $90 + 6$ C. $60 + 9$ D. $66 + 9$

7. John gave 4 slices of pizza to his friend Anna and ate 5. How many slices did the pizza have?

_____.

8. Look at the figure below. Which rectangle goes on top of 40?



A	B	C	D
55	60	65	50
A.	B.	C.	D.

9. Perform the following subtraction:

$$\begin{array}{r} 38 \\ - 5 \\ \hline \end{array}$$

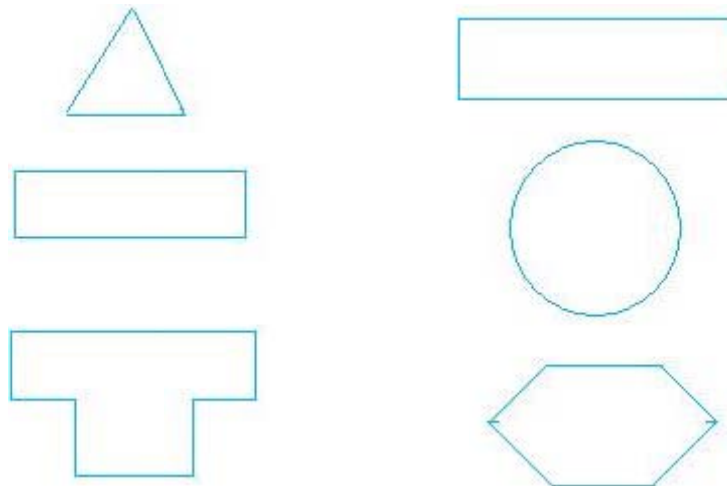
10. Tell if the number on the left is less or greater than the number on the right. Replace the question mark (?) with < or >

4 ? 2

5 ? 7

11. Color half ($\frac{1}{2}$) of the shapes on the left and one quarter or one fourth of the shapes on the right:

Color the triangle with red, rectangles with yellow, the circle with orange, and other figures with a color of your choice

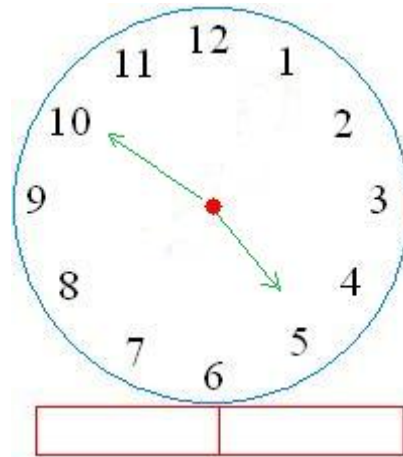


12. For the number 56, what digit is in the
tens place? _____ Ones place? _____.

13. Perform the following additions and subtractions

$$\begin{array}{r} 67 \\ + 32 \\ \hline \end{array} \quad \begin{array}{r} 68 \\ + 34 \\ \hline \end{array} \quad \begin{array}{r} 68 \\ - 32 \\ \hline \end{array} \quad \begin{array}{r} 62 \\ - 45 \\ \hline \end{array}$$

14. What time is it?



15. Write the following numbers in words

2 _____ 7 _____ 14 _____ 24 _____

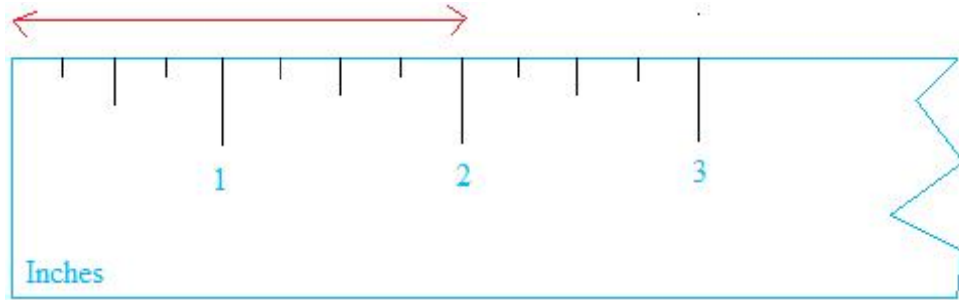
16. What is the geometric name for a figure that looks like a ball? _____ a soda can? _____

A famous figure that is found in Egypt? _____ something that you put your ice cream on top? _____.

17. Fill in the blank for the missing numbers

75, 70, _____ 60, 55, _____.

18. What is the measure of the length shown in red below?



19. How many dimes are there in fifty cents? _____

20. Math Puzzles: Who am I?

6 + 6 is less than I am. 6 + 8 is greater than I am.

I am an odd number and if you subtract me from 10, you get a number greater than 7.