

Class : IV

Summative Assessment-II

Subject : EVS

Time: 2 hours

MM: 50

Name : \_\_\_\_\_

Class & Section \_\_\_\_\_

Roll.No. \_\_\_\_\_

Invigilator's Name & Signature \_\_\_\_\_

Q.1 Choose the correct option:

(4x1=4)

- (a) The young one of the frog is called
- i) tadpole
  - ii) larva
  - iii) nymph
  - iv) Both (i) and (ii)
- (b) While running, we use
- i) Electrical energy
  - ii) Muscular energy
  - iii) Wind energy
  - iv) Sound energy
- (c) Humus is made from
- i) dead leaves
  - ii) fresh plastic
  - iii) water
  - iv) both i) and ii)
- (d) Larva of a mosquito is called
- i) caterpillar
  - ii) maggot
  - iii) Pupa
  - iv) cocoon

Q.2 Fill in the blanks:

(6x1=6)

- a) The chemicals sprayed on the crops to kill insects are called  
.....
- b) The .....Dam is built across river Narmada.
- c) Coal is formed out of ..... and ..... buried under the earth millions of years ago.
- d) .....is a mammal that lays eggs.
- e) Brahmaputra river is called .....in Tibet.
- f) ..... have a poisonous bite to keep them safe from their enemies.

- Q.3 Give one word: (5x1=5)
- Animals that live mostly in water. ....
  - Energy obtained from the sun. ....
  - The loss of soil due to rain or wind. ....
  - Young one in the life cycle of insects that resembles the adult. ....
  - Important gold mine of India. ....
- Q.4 Correct the false statement: (4x1=4)
- During photosynthesis, green plants absorb oxygen from the atmosphere  
.....
  - Mumbai High is an important source of Iron ore.  
.....
  - Animals that eat flesh are called carnivorous.  
.....
  - Mahanadi delta is the largest delta in the world.  
.....
- Q.5 Give reasons: (2x1.5=3)
- We sprinkle powder on carom board  
.....  
.....  
.....
  - Burning of forests should be avoided because  
.....  
.....  
.....
- Q.6 Answer the following questions:
- What are glaciers? Name any two glaciers. (1+1)  
.....  
.....  
.....  
.....

(b) What is reproduction? What are the two ways by which animals reproduce? (2)

.....

.....

.....

.....

(c) How is soil formed? Name the soil found in the Rajasthan state. (2)

.....

.....

.....

.....

(d) Why do tigers have sharp claws? Name any one more animal that has sharp claws. (1+1)

.....

.....

.....

.....

(e) What is hibernation? Name any two animals that hibernate. (1+1)

.....

.....

.....

.....

(f) What are ores? Name the ore of aluminum metal. (2)

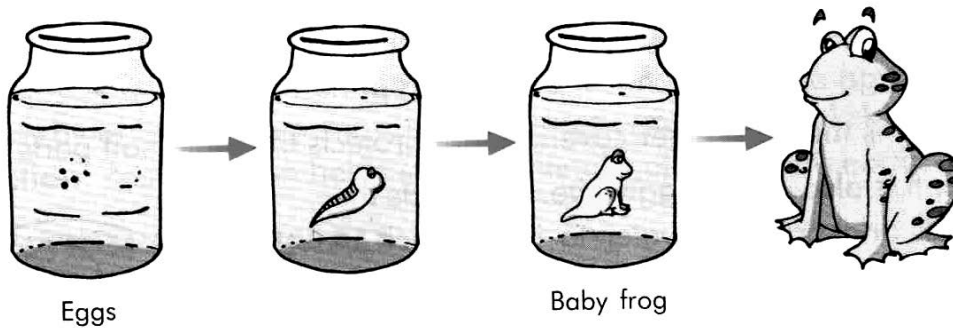
.....

.....

.....

.....


Q.7 a) Identify the picture and answer the following questions: (3x1=3)



Label the missing stages.

This is the life cycle of a .....

b) Identify the animal and write its two adaptations. (3x1=3)



Adaptations

(1) .....

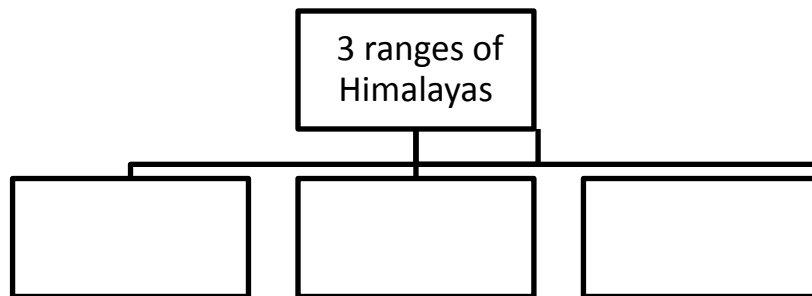
.....

(2) .....

.....

Name : .....

Q.8 Complete the flowchart: (3x1=3)



Q.9 Draw the diagram showing structure of an egg and label it. (4)



Q.10 Mark the following in the political map of India. (Make key)

(3)

- a) A place where laterite soil is found
- b) A state where coal is found
- c) A state where petroleum oil is found

