

SUMMATIVE ASSESSMENT – II

CLASS: 4-

EVS

TIME: 2 HOURS

Name: _____ Roll No. _____ M.M . 50

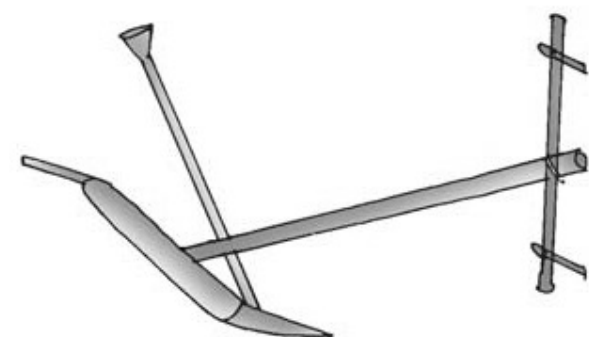
Sign. Of Invigilator: _____

Skill	Observation	Identification	Discov. facts
Grade			


Sign. Of Examiner : _____

OBSERVATION

Observe the picture and answer the questions related to the picture.



1. Name the iron tool used in the picture.
What is its use?



2. Write the name of the spice shown in the picture.

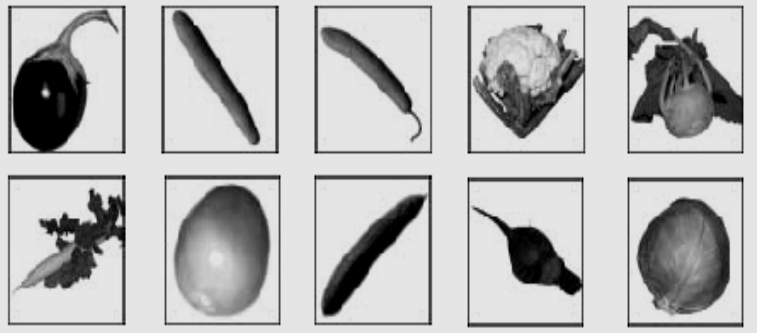
What is its medicinal value?

3. Write the number in this 10-rupee currency note.

Which bank prints this currency note?



4. In the adjacent picture write any two roots of the plant which we use as a vegetable.



A

B



5. Write the names of the birds shown in the adjacent picture.

A. _____

B. _____

6. How does Chushit go to school ?



7. How many commands will be given over the entire parade?



8. What are Sand dunes?

9. You know about the following dishes made by your mother. Write the methods of cooking. (One is done for you.)

Dishes	Methods of cooking
Idli, Puttu, Idiappam	Steaming
Dosa, Chappathi	
Rice, Dal	
Biscuits, bread, cake	
Poori, Vada, Samosa	

10. What is Bhelaghar?

11. People in defence service like Navy, Air force and Army wear uniform. Name four other jobs where people wear uniform.

12. Write the steps involved in the cultivation of onion crops.

IDENTIFICATION

Fill up the blanks with the suitable answer given in the brackets.

13) _____ is the harvest festival which is celebrated in **Assam**.
(Pongal, Holi, Bihu)

14) Potato is the _____ of the plant.(stem, root, fruit)

15) _____ does not make its own nest, it lay eggs in a crow's nest.
(Sparrow, Weaver bird, Koel)

16) The language written in Abu-Dhabi currency is _____
(English, Arabic , French)

17) Mukhtapur village is in the -----town of Andhra Pradesh.

18). Write two differences between root system and shoot system of the plant.

Root system	Shoot system


19). Write any four properties of water.

20) i. What is the meaning of the word **PRISM**?


ii) What is langar?

21) Draw a bird's feet:

i) which swims in water



ii) which walks on land



22) Find out where Ladakh is? What kind of place it is?

23. Compare the climates of Kerala and Abu-Dhabi.

Climate of Kerala	Climate of Abu-Dhabi
1	1
2	2
3	3
4	4
5	5

Discovering Facts

Choose the correct answer.

24) Tap roots are seen in _____

- a) Wheat plant b) Sugar cane c, Neem tree

25) The bird which searches food at night is _____

- a) crow b) owl c) dove

26) Capital of Maharashtra is _____

- a) Chennai b) Mumbai c) Delhi

27) A person who cannot walk is called _____

- a) Lame b) Deaf c) Dumb

28) The currency note in INDIA is issued by _____

- a) Indian bank b) Reserve Bank of India c) State Bank of India

29. Draw four vegetables and fruits grown in our locality.

30. What are the things that you enjoy doing in school?

31. When Nandita first came to Mumbai, what were the things that she was afraid to do?

32. Write the preparation of Oral Rehydration Solution.

33. What are the main functions of roots?

34. Mark and colour the following in the given India Political map.

- a) State in which Pochampalli is situated.
- b) Maharashtra
- c) State in which Bihu festival is celebrated.
- d) Karnataka
- e) Jammu and Kashmir

India

